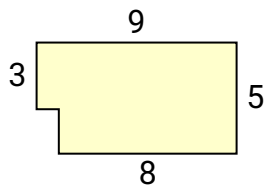




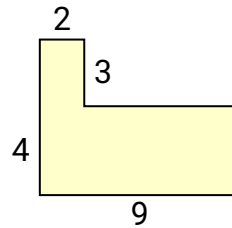
Calculez l'aire totale de chaque figure. Les mesures sont en millimètres (mm).

Réponses

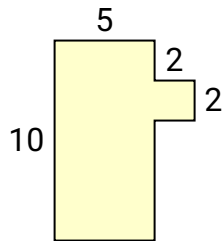
1)



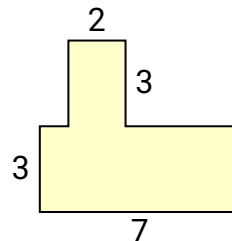
2)



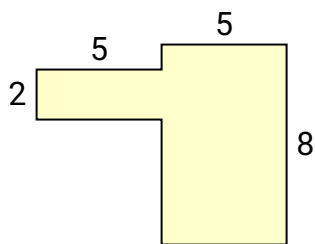
3)



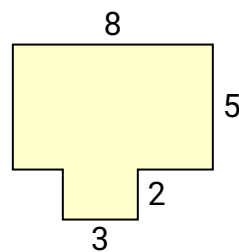
4)



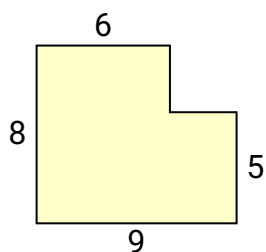
5)



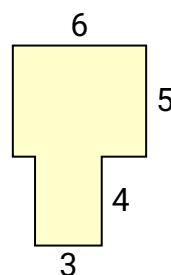
6)



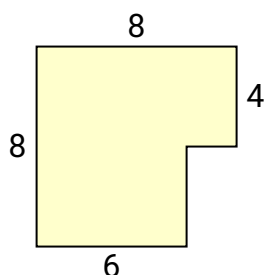
7)



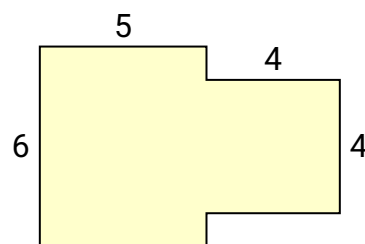
8)



9)



10)



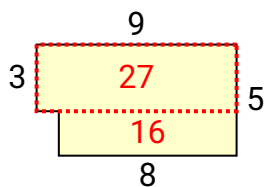
1. _____
2. _____
3. _____
4. _____
5. _____
6. _____
7. _____
8. _____
9. _____
10. _____



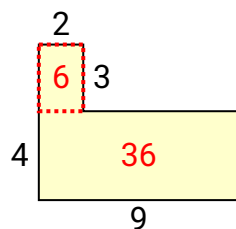
Calculez l'aire totale de chaque figure. Les mesures sont en millimètres (mm).

Réponses

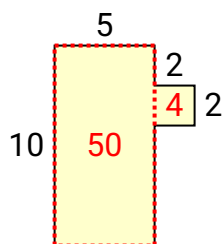
1)



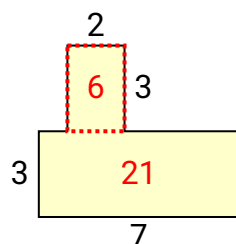
2)



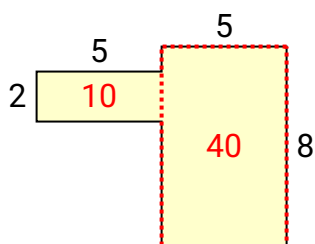
3)



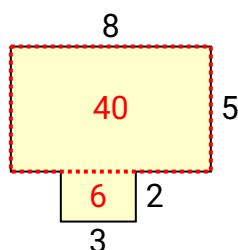
4)



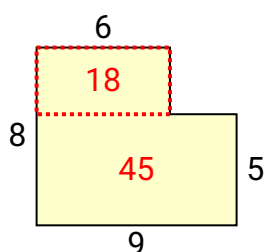
5)



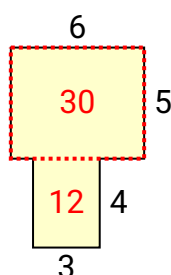
6)



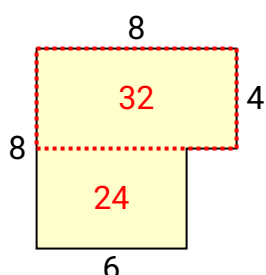
7)



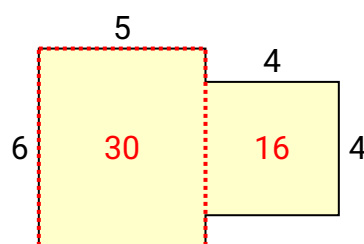
8)



9)



10)



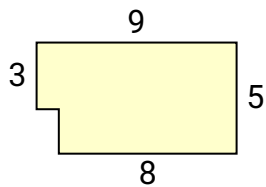
1. **43**
2. **42**
3. **54**
4. **27**
5. **50**
6. **46**
7. **63**
8. **42**
9. **56**
10. **46**



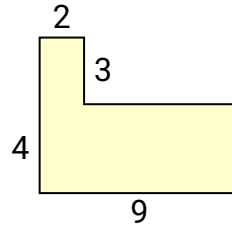
Calculez l'aire totale de chaque figure. Les mesures sont en millimètres (mm).

Réponses

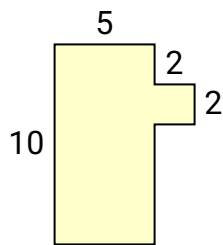
1)



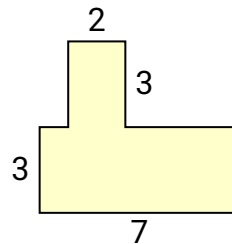
2)



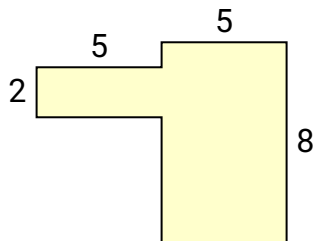
3)



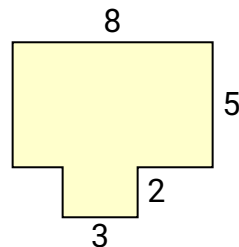
4)



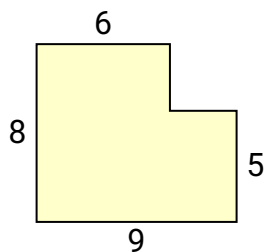
5)



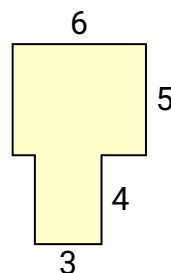
6)



7)



8)



1. _____
2. _____
3. _____
4. _____
5. _____
6. _____
7. _____
8. _____
9. _____
10. _____