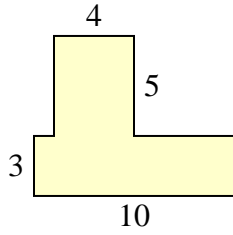




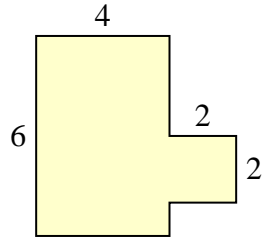
Calculez l'aire totale de chaque figure. Les mesures sont en millimètres (mm).

**Réponses**

1)



2)



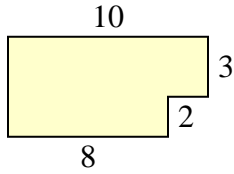
1. \_\_\_\_\_

2. \_\_\_\_\_

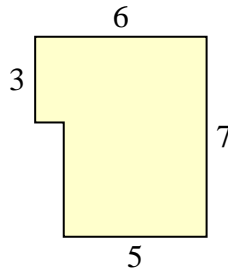
3. \_\_\_\_\_

4. \_\_\_\_\_

3)



4)



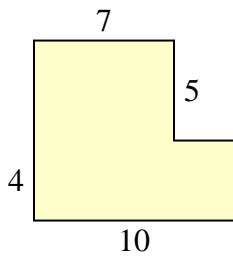
5. \_\_\_\_\_

6. \_\_\_\_\_

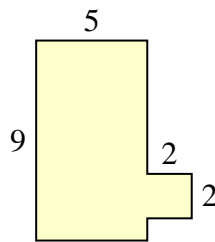
7. \_\_\_\_\_

8. \_\_\_\_\_

5)



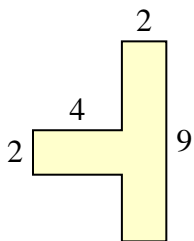
6)



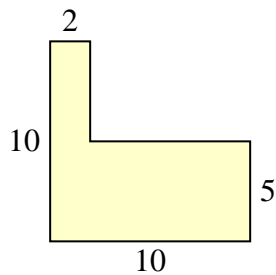
9. \_\_\_\_\_

10. \_\_\_\_\_

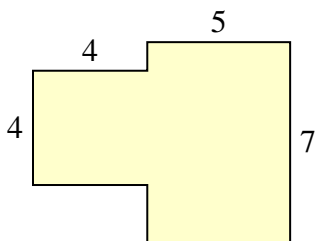
7)



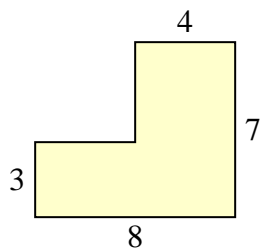
8)



9)



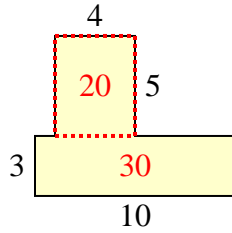
10)



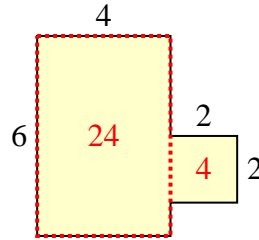


Calculez l'aire totale de chaque figure. Les mesures sont en millimètres (mm).

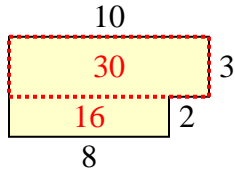
1)



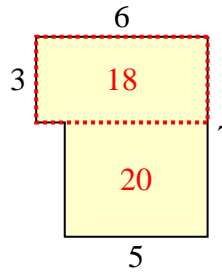
2)



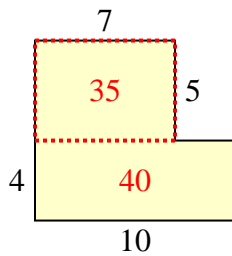
3)



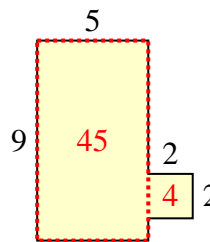
4)



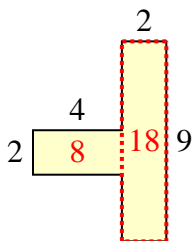
5)



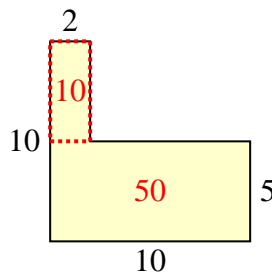
6)



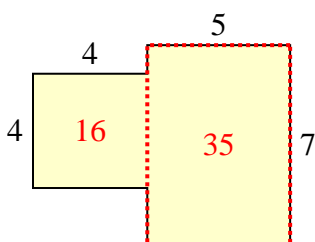
7)



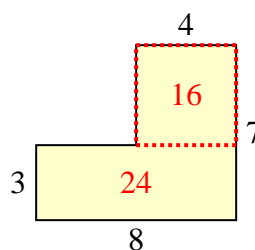
8)



9)



10)

**Réponses**

1. 50 mm<sup>2</sup>
2. 28 mm<sup>2</sup>
3. 46 mm<sup>2</sup>
4. 38 mm<sup>2</sup>
5. 75 mm<sup>2</sup>
6. 49 mm<sup>2</sup>
7. 26 mm<sup>2</sup>
8. 60 mm<sup>2</sup>
9. 51 mm<sup>2</sup>
10. 40 mm<sup>2</sup>