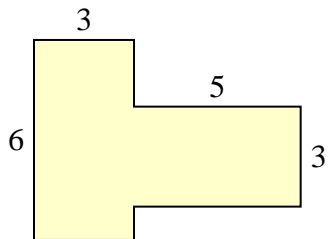


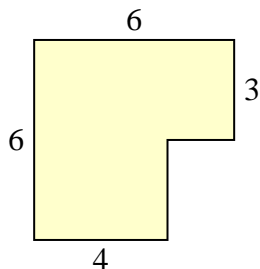


Calculez l'aire totale de chaque figure. Les mesures sont en millimètres (mm).

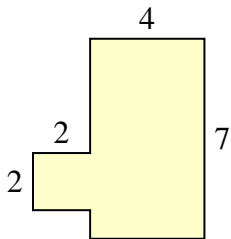
1)



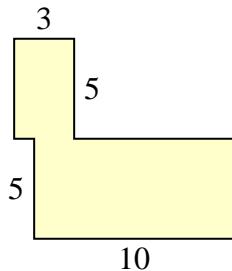
2)



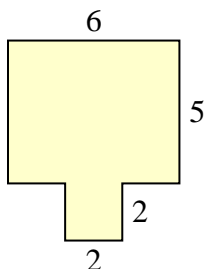
3)



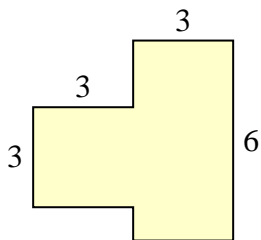
4)



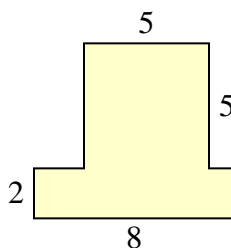
5)



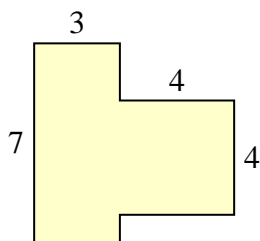
6)



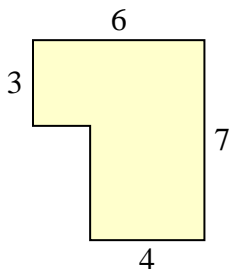
7)



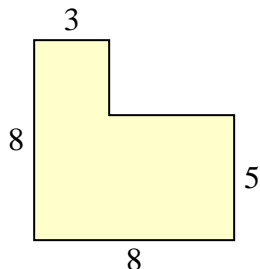
8)



9)



10)



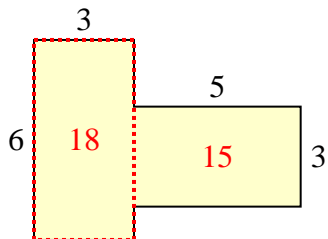
Réponses

- 1. _____
- 2. _____
- 3. _____
- 4. _____
- 5. _____
- 6. _____
- 7. _____
- 8. _____
- 9. _____
- 10. _____

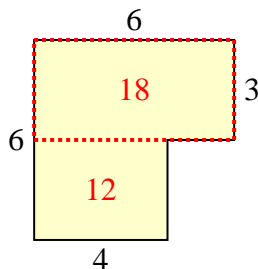


Calculez l'aire totale de chaque figure. Les mesures sont en millimètres (mm).

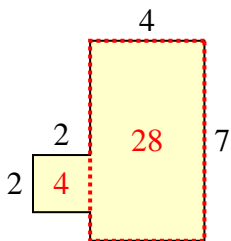
1)



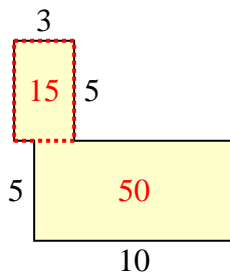
2)



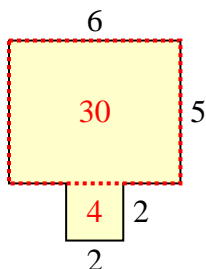
3)



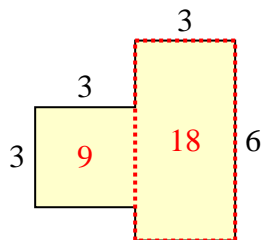
4)



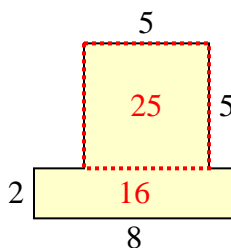
5)



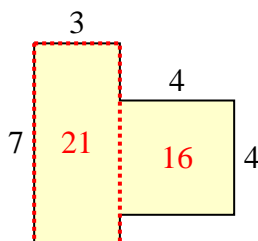
6)



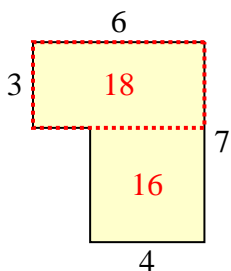
7)



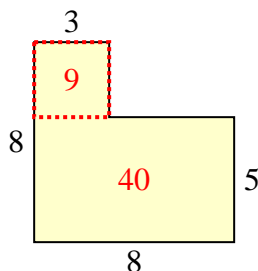
8)



9)



10)

**Réponses**

1. 33 mm²
2. 30 mm²
3. 32 mm²
4. 65 mm²
5. 34 mm²
6. 27 mm²
7. 41 mm²
8. 37 mm²
9. 34 mm²
10. 49 mm²