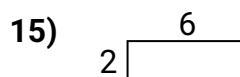
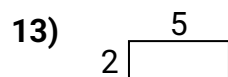
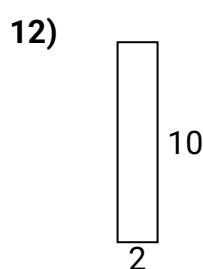
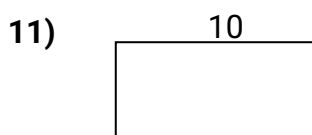
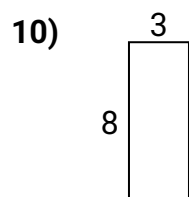
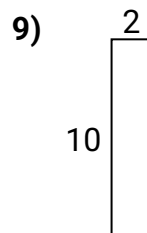
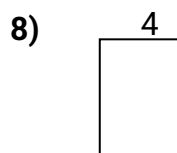
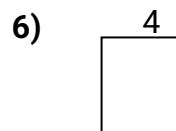
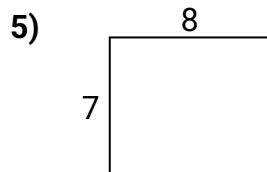
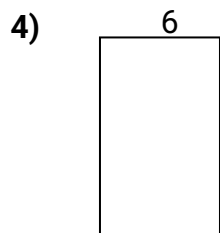
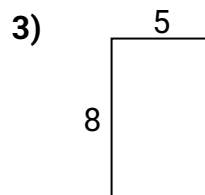
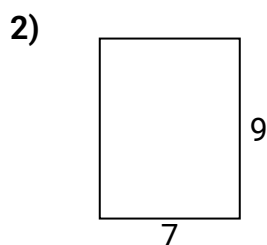
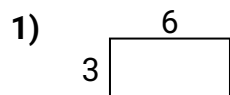




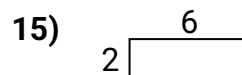
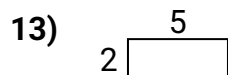
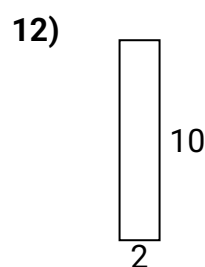
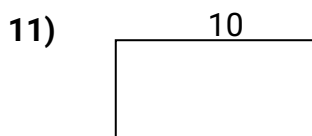
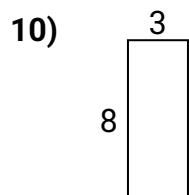
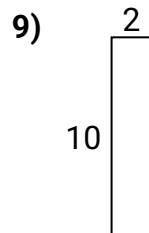
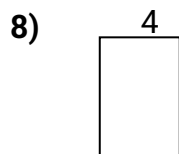
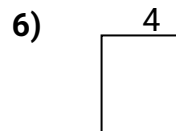
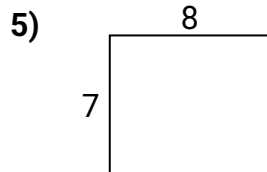
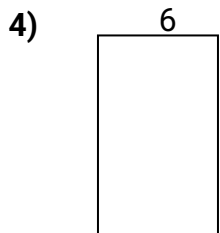
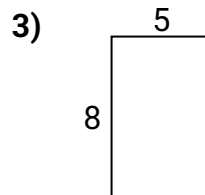
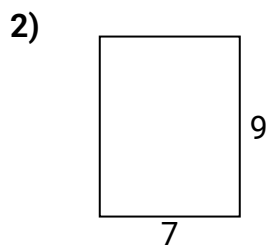
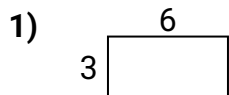
Calculez l'aire et le périmètre de chaque figure. Chaque mesure est en cm.

Réponses

1. _____
2. _____
3. _____
4. _____
5. _____
6. _____
7. _____
8. _____
9. _____
10. _____
11. _____
12. _____
13. _____
14. _____
15. _____



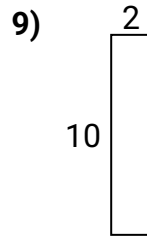
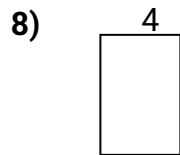

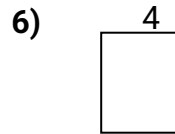
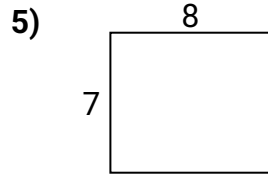
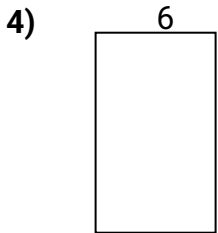
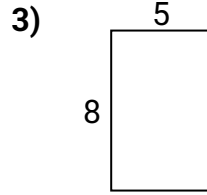
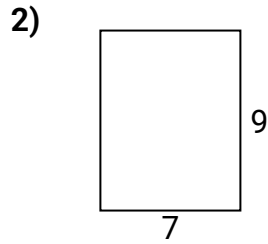
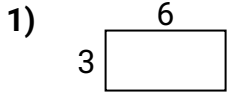
Calculez l'aire et le périmètre de chaque figure. Chaque mesure est en cm.

**Réponses**

1.	18	18
2.	32	63
3.	26	40
4.	32	60
5.	30	56
6.	18	20
7.	10	6
8.	20	24
9.	24	20
10.	22	24
11.	30	50
12.	24	20
13.	14	10
14.	14	10
15.	16	12



Calculez l'aire et le périmètre de chaque figure. Chaque mesure est en cm.



Réponses

1. _____
2. _____
3. _____
4. _____
5. _____
6. _____
7. _____
8. _____
9. _____
10. _____
11. _____
12. _____
13. _____
14. _____
15. _____