



Sélectionner le Graphique Correct

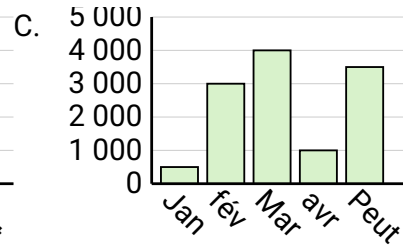
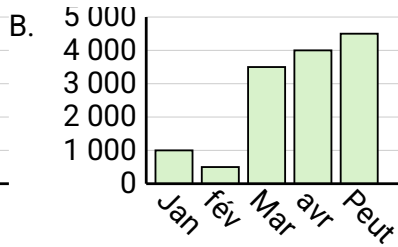
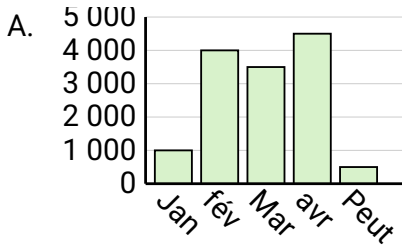
Nom: _____

Sélectionner quel diagramme (A, B ou C) représente les données du tableau.

Réponses

1)

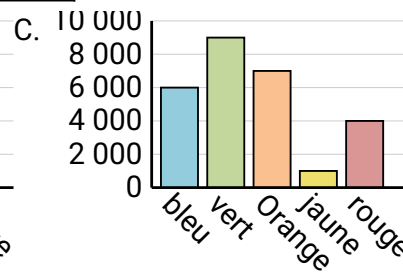
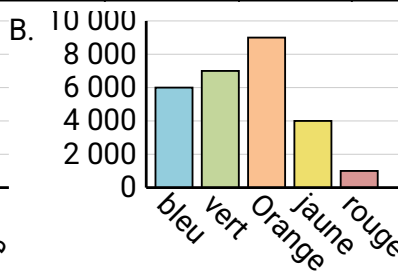
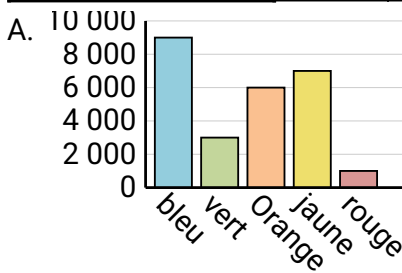
Ventes	Jan	fév	Mar	avr	Peut
Mois	500	3 000	4 000	1 000	3 500



1. _____
2. _____
3. _____
4. _____

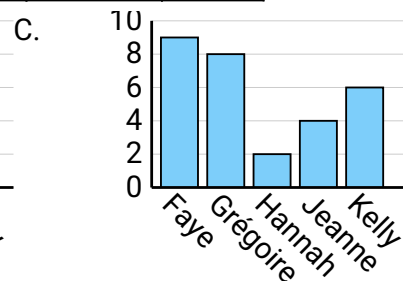
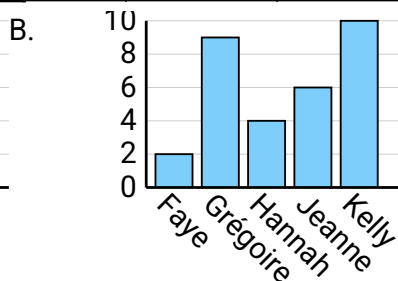
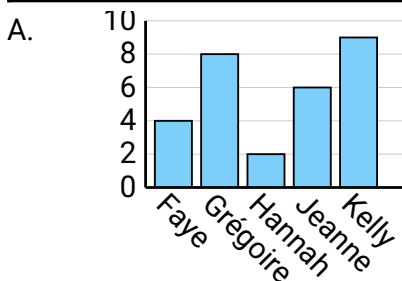
2)

Couleur préférée	bleu	vert	Orange	jaune	rouge
Personnes	9 000	3 000	6 000	7 000	1 000



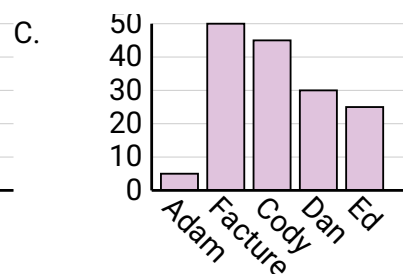
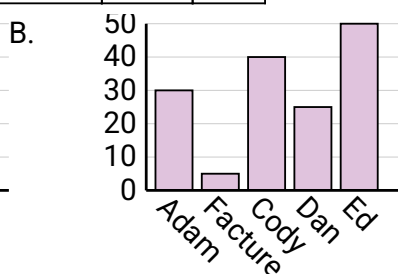
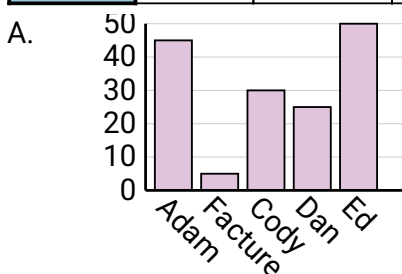
3)

Nom	Faye	Grégoire	Hannah	Jeanne	Kelly
États dans lesquels vivaient	2	9	4	6	10



4)

Nom	Adam	Facture	Cody	Dan	Ed
Points	5	50	45	30	25



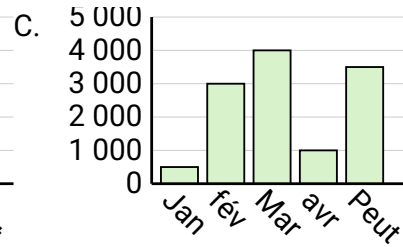
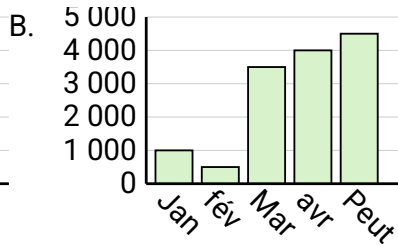
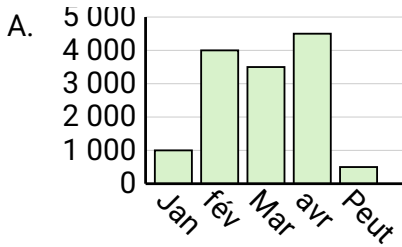


Sélectionner quel diagramme (A, B ou C) représente les données du tableau.

Réponses

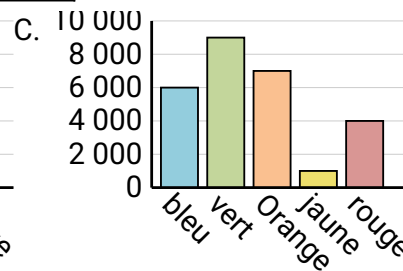
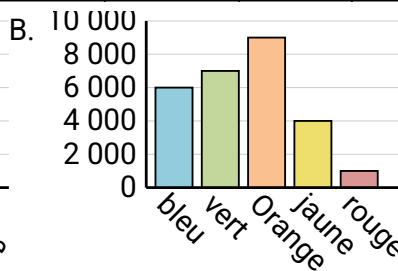
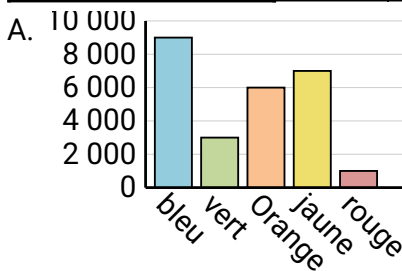
1)

Ventes	Jan	fév	Mar	avr	Peut
Mois	500	3 000	4 000	1 000	3 500

1. **C**2. **A**3. **B**4. **C**

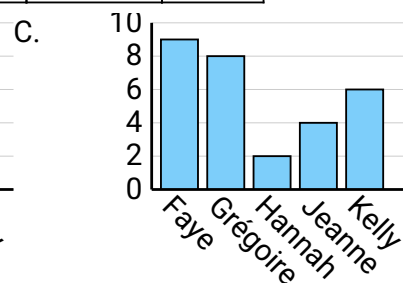
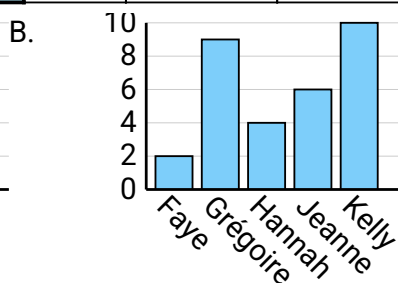
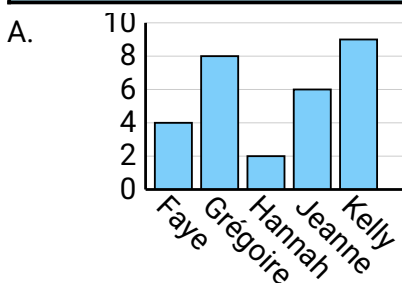
2)

Couleur préférée	bleu	vert	Orange	jaune	rouge
Personnes	9 000	3 000	6 000	7 000	1 000



3)

Nom	Faye	Grégoire	Hannah	Jeanne	Kelly
États dans lesquels vivaient	2	9	4	6	10



4)

Nom	Adam	Facture	Cody	Dan	Ed
Points	5	50	45	30	25

