

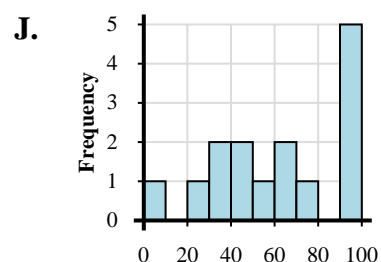
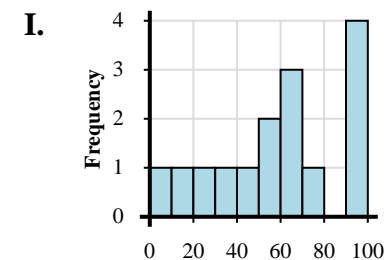
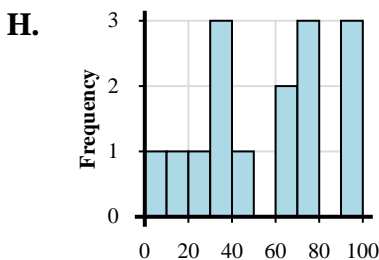
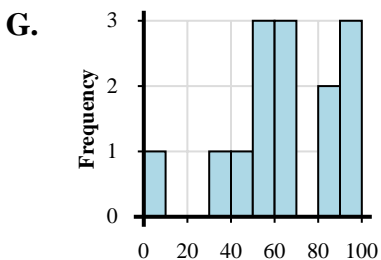
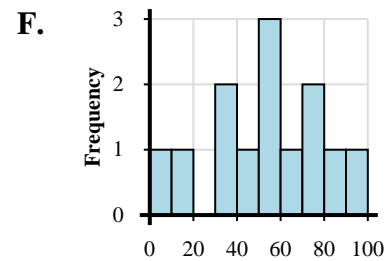
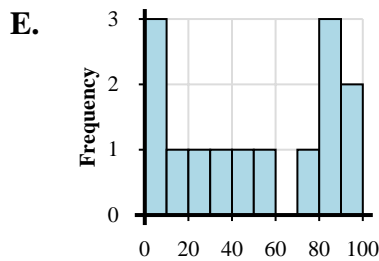
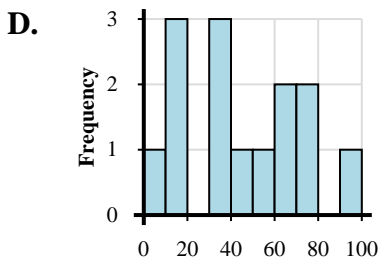
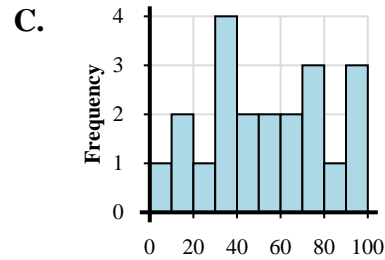
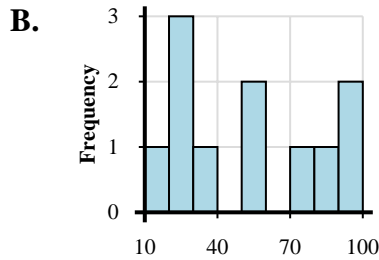
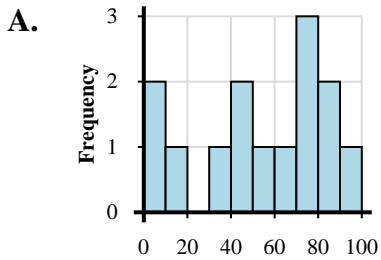


Faites correspondre chaque ensemble de données à son histogramme.

Réponses

- 1) 4, 10, 17, 35, 26, 35, 38, 36, 50, 40, 45, 50, 63, 78, 73, 64, 73, 96, 96, 83, 92
- 2) 6, 10, 13, 10, 35, 33, 35, 40, 55, 64, 72, 78, 63, 91
- 3) 4, 10, 23, 33, 34, 31, 49, 61, 74, 69, 76, 77, 99, 90, 95
- 4) 19, 1, 8, 33, 41, 58, 40, 77, 70, 74, 63, 97, 82, 82
- 5) 5, 18, 5, 9, 31, 23, 59, 42, 73, 82, 99, 85, 94, 89
- 6) 7, 21, 39, 39, 47, 56, 43, 72, 60, 67, 99, 98, 98, 92, 94
- 7) 14, 20, 27, 31, 29, 58, 54, 78, 80, 95, 93
- 8) 8, 38, 53, 54, 58, 48, 66, 68, 60, 92, 97, 81, 81, 97
- 9) 15, 2, 34, 33, 59, 46, 53, 50, 77, 60, 79, 87, 91
- 10) 1, 11, 21, 37, 40, 54, 53, 73, 61, 62, 63, 91, 92, 91, 99

1. _____
2. _____
3. _____
4. _____
5. _____
6. _____
7. _____
8. _____
9. _____
10. _____





Faites correspondre chaque ensemble de données à son histogramme.

Réponses

- 1) 4, 10, 17, 35, 26, 35, 38, 36, 50, 40, 45, 50, 63, 78, 73, 64, 73, 96, 96, 83, 92
- 2) 6, 10, 13, 10, 35, 33, 35, 40, 55, 64, 72, 78, 63, 91
- 3) 4, 10, 23, 33, 34, 31, 49, 61, 74, 69, 76, 77, 99, 90, 95
- 4) 19, 1, 8, 33, 41, 58, 40, 77, 70, 74, 63, 97, 82, 82
- 5) 5, 18, 5, 9, 31, 23, 59, 42, 73, 82, 99, 85, 94, 89
- 6) 7, 21, 39, 39, 47, 56, 43, 72, 60, 67, 99, 98, 98, 92, 94
- 7) 14, 20, 27, 31, 29, 58, 54, 78, 80, 95, 93
- 8) 8, 38, 53, 54, 58, 48, 66, 68, 60, 92, 97, 81, 81, 97
- 9) 15, 2, 34, 33, 59, 46, 53, 50, 77, 60, 79, 87, 91
- 10) 1, 11, 21, 37, 40, 54, 53, 73, 61, 62, 63, 91, 92, 91, 99

1. **C**
2. **D**
3. **H**
4. **A**
5. **E**
6. **J**
7. **B**
8. **G**
9. **F**
10. **I**

