



Déterminez quelle lettre représente le mieux le volume.

Réponses

Xícara

Una taza se refiere a la cantidad de leche que se obtiene de la cafetería.



Pinta

Uma pinta é aproximadamente a quantidade que você recebe em um copo grande.
1 pinta = 2 xícaras



Quarto

Um quarto é mais ou menos a quantidade que você consegue em um recipiente grande de leite.
1 cuarto = 2 pintas




Galón


Un galón es la cantidad que viene en un recipiente de plástico grande.
1 galón = 4 cuartos



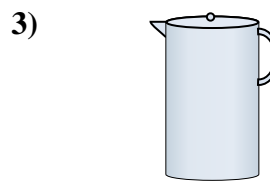
1. _____
2. _____
3. _____
4. _____
5. _____
6. _____
7. _____
8. _____
9. _____



Baignoire
A. 40 tasses
B. 8 quarts
C. 20 pints
D. 45 gallons



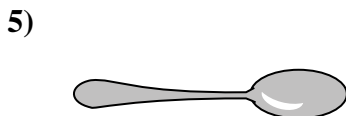
La pipette tient
A. 1 pint
B. 3 gallons
C. moins que 1 tasse
D. 1 tasse



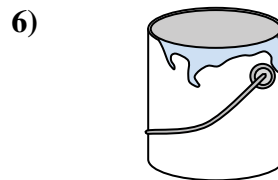
Liquide dans un pichet
A. 2 tasses
B. 1 pint
C. 2 quarts
D. 8 gallons



Bol de céréales
A. 0.5 gallons
B. 4 pints
C. 2 gallons
D. 1 pint



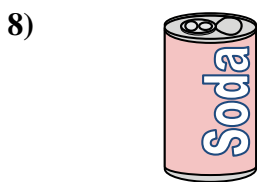
Liquide qu'une cuillère contient
A. Less than a cup
B. 1 tasse
C. 1 pint
D. 1 quart



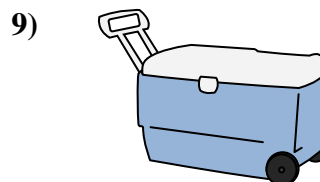
Peindre dans un pot
A. 3 fluid ounces
B. 1 gallon
C. 1 tasse
D. 0.5 pints



2 litre de soda
A. 0.5 gallons
B. 5 gallons
C. 1 pint
D. 2 tasses



Soda en canette
A. 4 tasses
B. 1.5 tasses
C. 4 pints
D. 1 gallon



Glacière
A. 100 quarts
B. 16 tasses
C. 5 gallons
D. 2 quarts



Déterminez quelle lettre représente le mieux le volume.

Réponses

Xícara

Una taza se refiere a la cantidad de leche que se obtiene de la cafetería.



Pinta

Uma pinta é aproximadamente a quantidade que você recebe em um copo grande.
1 pinta = 2 xícaras



Quarto

Um quarto é mais ou menos a quantidade que você consegue em um recipiente grande de leite.
1 cuarto = 2 pintas



Galón

Un galón es la cantidad que viene en un recipiente de plástico grande.
1 galón = 4 cuartos



1. **D**

2. **C**

3. **C**

4. **D**


5. **A**

6. **B**

7. **A**


8. **B**

9. **A**



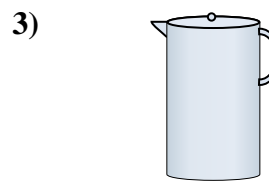
Baignoire

- A. 40 tasses
- B. 8 quarts
- C. 20 pintas
- D. 45 gallons



La pipette tient

- A. 1 pint
- B. 3 gallons
- C. moins que 1 tasse
- D. 1 tasse



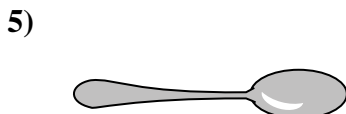
Liquide dans un pichet

- A. 2 tasses
- B. 1 pint
- C. 2 quarts
- D. 8 gallons



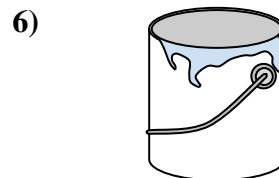
Bol de céréales

- A. 0.5 gallons
- B. 4 pintas
- C. 2 gallons
- D. 1 pint



Liquide qu'une cuillère contient

- A. Less than a cup
- B. 1 tasse
- C. 1 pint
- D. 1 quart



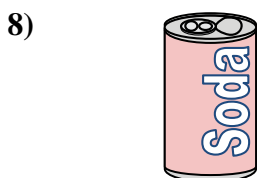
Peindre dans un pot

- A. 3 fluid ounces
- B. 1 gallon
- C. 1 tasse
- D. 0.5 pintas



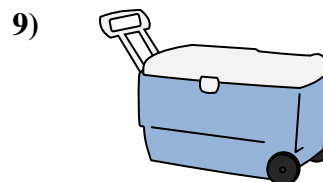
2 litre de soda

- A. 0.5 gallons
- B. 5 gallons
- C. 1 pint
- D. 2 tasses



Soda en canette

- A. 4 tasses
- B. 1.5 tasses
- C. 4 pintas
- D. 1 gallon



Glacière

- A. 100 quarts
- B. 16 tasses
- C. 5 gallons
- D. 2 quarts