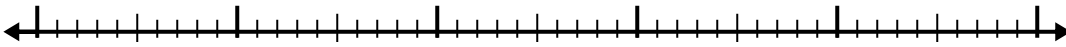


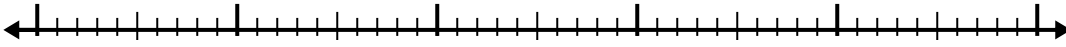


Utilisez la droite numérique pour résoudre chaque problème.

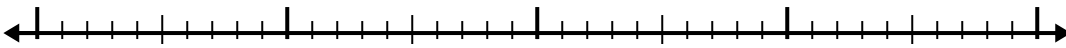
1) $2.6 + 3.6 =$



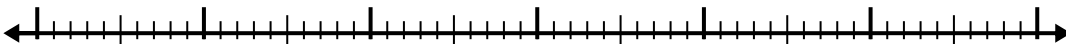
2) $3 + 2.2 =$



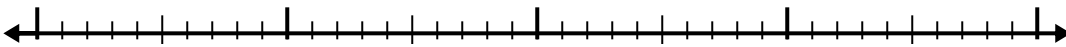
3) $1.1 + 2.2 =$



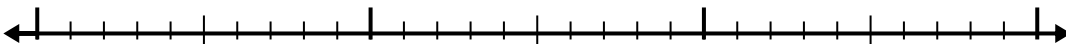
4) $3.7 + 3.9 =$



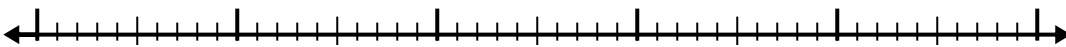
5) $8.2 + 2.2 =$



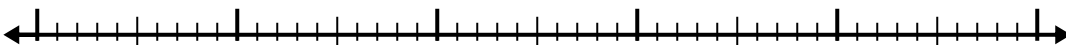
6) $5.4 + 1.8 =$



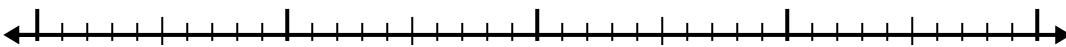
7) $2.2 + 3.6 =$



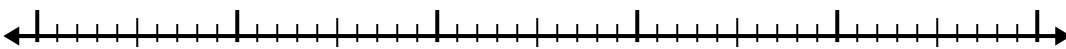
8) $5.4 + 2.8 =$



9) $3.5 + 2.2 =$



10) $1.9 + 2.2 =$

**Réponses**

1. _____

2. _____

3. _____

4. _____

5. _____

6. _____

7. _____

8. _____

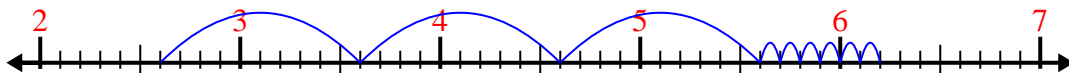
9. _____

10. _____

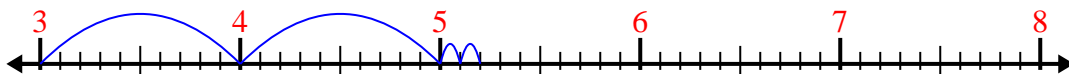


Utilisez la droite numérique pour résoudre chaque problème.

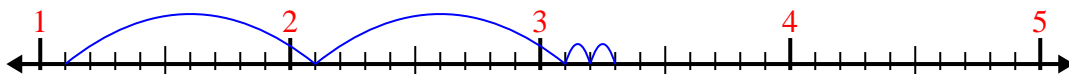
1) $2.6 + 3.6 =$



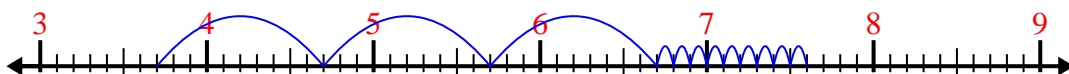
2) $3 + 2.2 =$



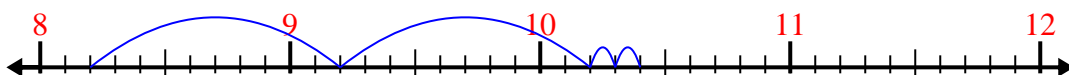
3) $1.1 + 2.2 =$



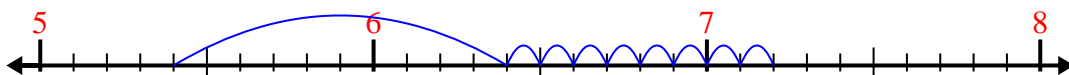
4) $3.7 + 3.9 =$



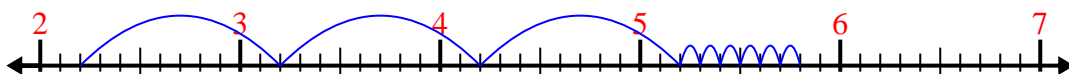
5) $8.2 + 2.2 =$



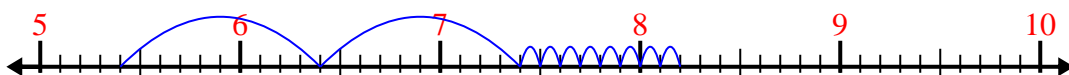
6) $5.4 + 1.8 =$



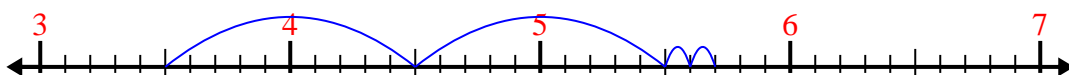
7) $2.2 + 3.6 =$




8) $5.4 + 2.8 =$



9) $3.5 + 2.2 =$



10) $1.9 + 2.2 =$

**Réponses**1. 6,22. 5,23. 3,34. 7,65. 10,46. 7,27. 5,88. 8,29. 5,710. 4,1