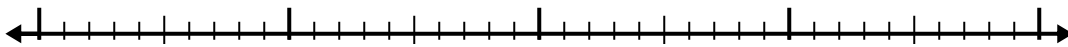


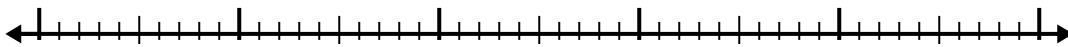


Utilisez la droite numérique pour résoudre chaque problème.

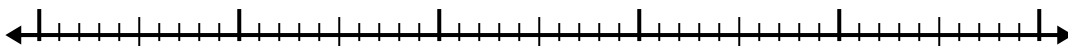
1)  $1.2 + 1.1 =$




2)  $5.4 + 2.1 =$




3)  $4.7 + 2.7 =$



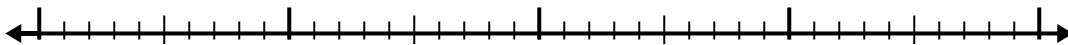
4)  $4 + 3.4 =$



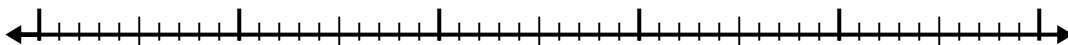
5)  $3.7 + 1.7 =$




6)  $8.4 + 2.2 =$



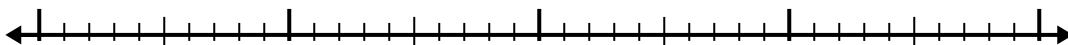
7)  $8.1 + 2.6 =$



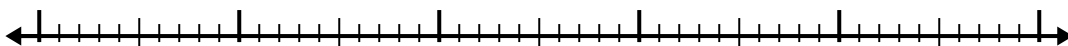
8)  $5.9 + 3.7 =$



9)  $5.1 + 1.3 =$



10)  $2.8 + 2.5 =$

**Réponses**

1. \_\_\_\_\_

2. \_\_\_\_\_

3. \_\_\_\_\_

4. \_\_\_\_\_

5. \_\_\_\_\_

6. \_\_\_\_\_

7. \_\_\_\_\_

8. \_\_\_\_\_

9. \_\_\_\_\_

10. \_\_\_\_\_




Utilisez la droite numérique pour résoudre chaque problème.

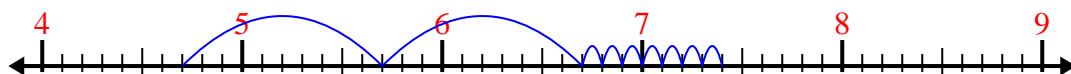
1)  $1.2 + 1.1 =$



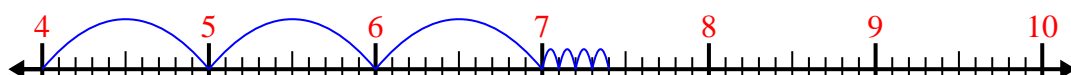
2)  $5.4 + 2.1 =$



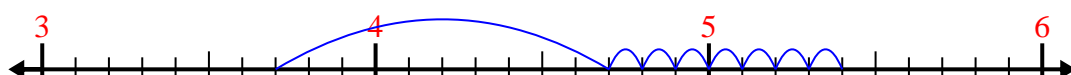
3)  $4.7 + 2.7 =$



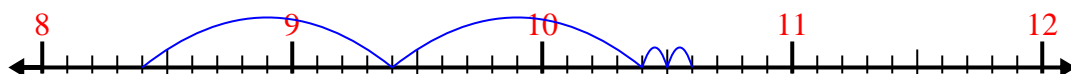
4)  $4 + 3.4 =$



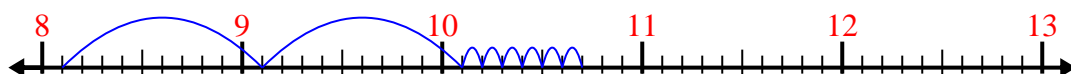
5)  $3.7 + 1.7 =$



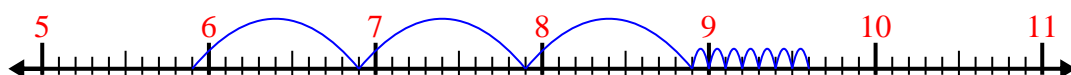
6)  $8.4 + 2.2 =$



7)  $8.1 + 2.6 =$



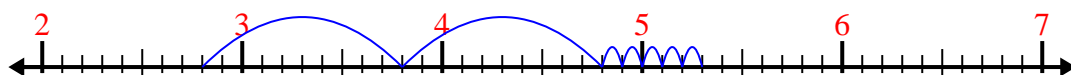
8)  $5.9 + 3.7 =$



9)  $5.1 + 1.3 =$



10)  $2.8 + 2.5 =$

**Réponses**1. 2,32. 7,53. 7,44. 7,45. 5,46. 10,67. 10,78. 9,69. 6,410. 5,3