



Utilisez le bloc de gauche pour trouver la valeur de l'ensemble de blocs de droite.

**Réponses**

1) = 1

1. \_\_\_\_\_

2) = 1

2. \_\_\_\_\_

3) = 1

3. \_\_\_\_\_

4) = 1

4. \_\_\_\_\_

5) = 1

5. \_\_\_\_\_

6) = 1

6. \_\_\_\_\_

7) = 1

7. \_\_\_\_\_

8) = 1

8. \_\_\_\_\_

9) = 1

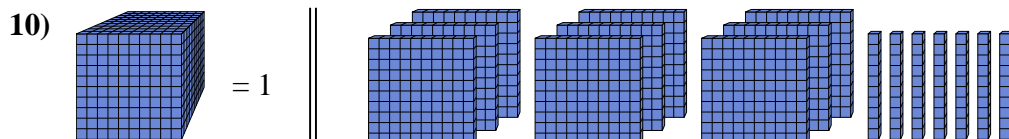
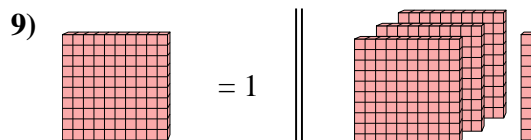
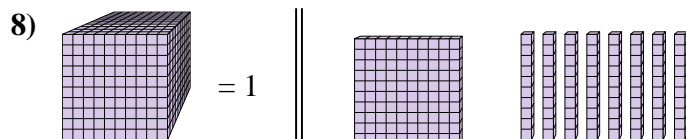
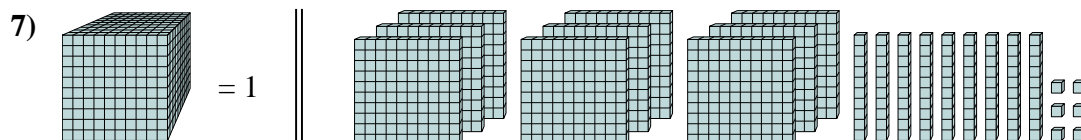
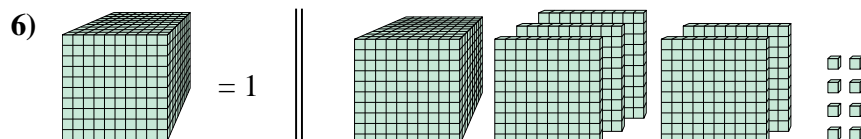
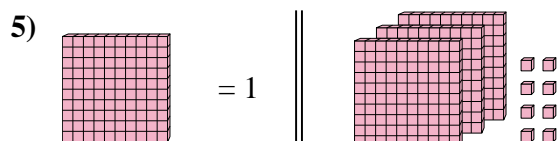
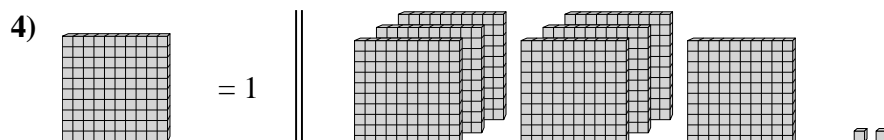
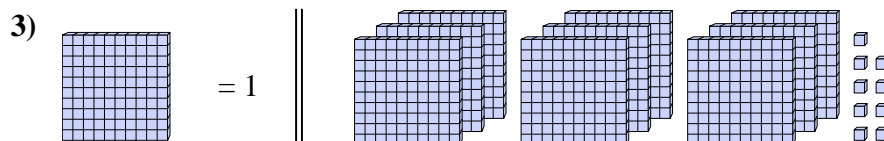
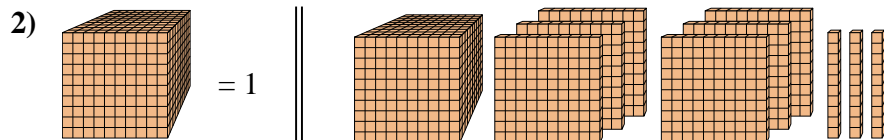
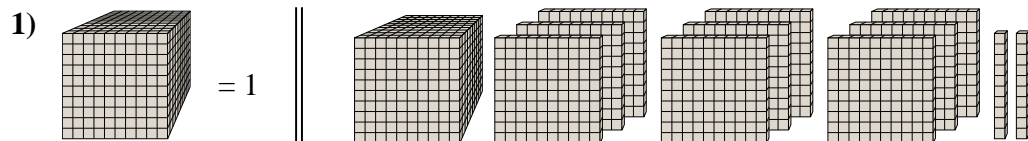
9. \_\_\_\_\_

10) = 1

10. \_\_\_\_\_



Utilisez le bloc de gauche pour trouver la valeur de l'ensemble de blocs de droite.

Réponses1. 1,922. 1,633. 9,094. 7,025. 3,086. 1,5087. 0,9968. 0,189. 3,110. 0,97