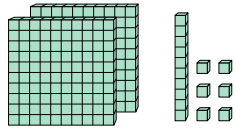
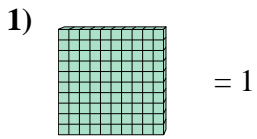


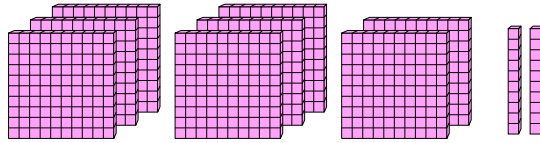
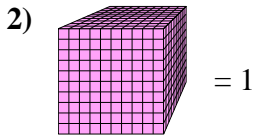


Utilisez le bloc de gauche pour trouver la valeur de l'ensemble de blocs de droite.

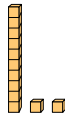
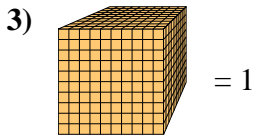
Réponses



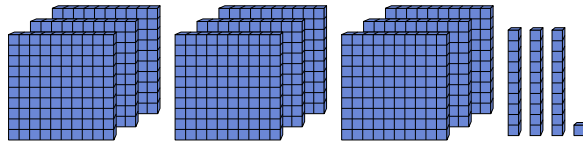
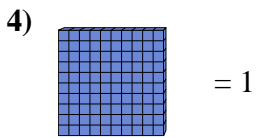
1. _____



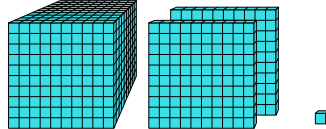
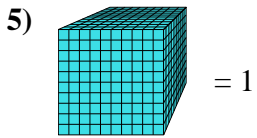
2. _____



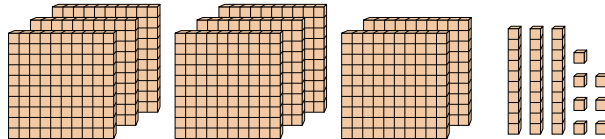
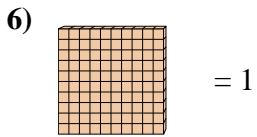
3. _____



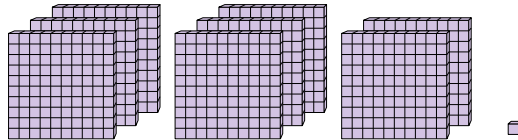
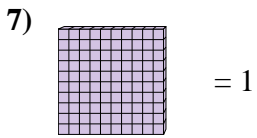
4. _____



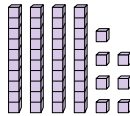
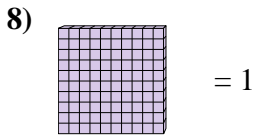
5. _____



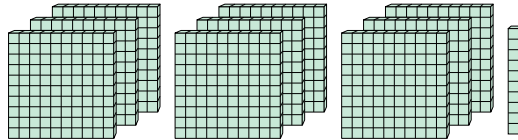
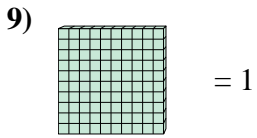
6. _____



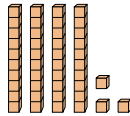
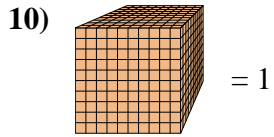
7. _____



8. _____



9. _____



10. _____



Utilisez le bloc de gauche pour trouver la valeur de l'ensemble de blocs de droite.

1) = 1

2) = 1

3) = 1

4) = 1

5) = 1

6) = 1

7) = 1

8) = 1

9) = 1

10) = 1

Réponses

1. 2,16
2. 0,82
3. 0,012
4. 9,31
5. 1,201
6. 8,37
7. 8,01
8. 0,47
9. 9,1
10. 0,043