





Utilisez la méthode visuelle pour résoudre chaque exercice.


1)  $0,6 \times 0,9 =$




2)  $0,6 \times 0,3 =$




3)  $0,5 \times 0,9 =$




4)  $0,1 \times 0,7 =$




5)  $0,5 \times 0,2 =$




6)  $0,1 \times 0,5 =$




7)  $0,1 \times 0,4 =$




8)  $0,6 \times 0,4 =$




9)  $0,4 \times 0,4 =$




10)  $0,8 \times 0,8 =$




11)  $0,7 \times 0,2 =$




12)  $0,9 \times 0,4 =$




13)  $0,2 \times 0,9 =$



14)  $0,6 \times 0,6 =$



15)  $0,5 \times 0,4 =$

**Réponses**

1. \_\_\_\_\_

2. \_\_\_\_\_

3. \_\_\_\_\_

4. \_\_\_\_\_

5. \_\_\_\_\_

6. \_\_\_\_\_

7. \_\_\_\_\_

8. \_\_\_\_\_

9. \_\_\_\_\_

10. \_\_\_\_\_

11. \_\_\_\_\_

12. \_\_\_\_\_

13. \_\_\_\_\_

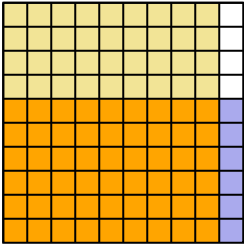
14. \_\_\_\_\_

15. \_\_\_\_\_

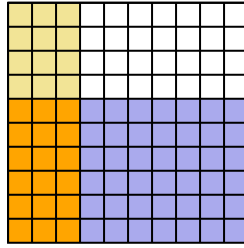


Utilisez la méthode visuelle pour résoudre chaque exercice.

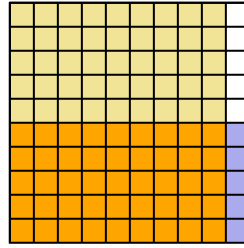
1)  $0,6 \times 0,9 =$



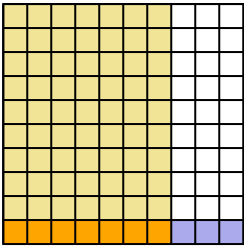
2)  $0,6 \times 0,3 =$



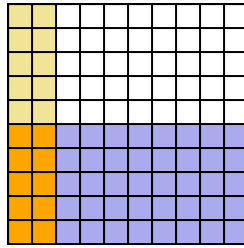
3)  $0,5 \times 0,9 =$



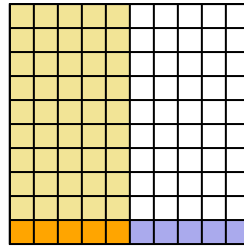
4)  $0,1 \times 0,7 =$



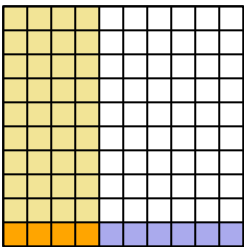
5)  $0,5 \times 0,2 =$



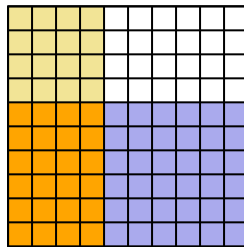
6)  $0,1 \times 0,5 =$



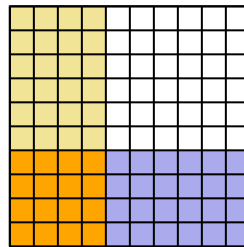
7)  $0,1 \times 0,4 =$



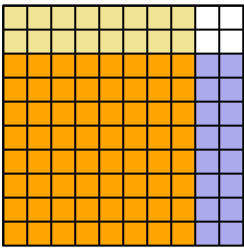
8)  $0,6 \times 0,4 =$



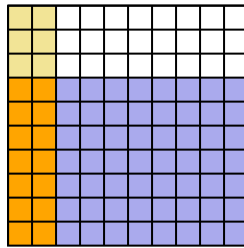
9)  $0,4 \times 0,4 =$



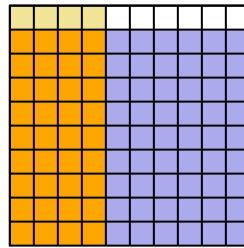
10)  $0,8 \times 0,8 =$



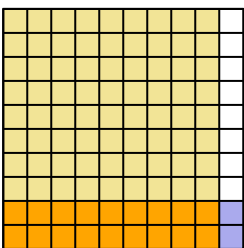
11)  $0,7 \times 0,2 =$



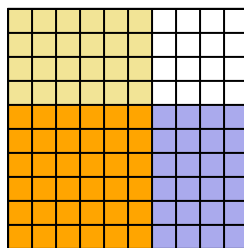
12)  $0,9 \times 0,4 =$



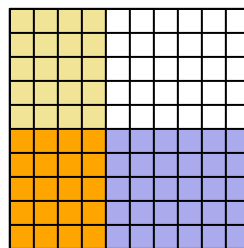
13)  $0,2 \times 0,9 =$



14)  $0,6 \times 0,6 =$



15)  $0,5 \times 0,4 =$



**Réponses**

1.  $\frac{54}{100} = 0,54$

2.  $\frac{18}{100} = 0,18$

3.  $\frac{45}{100} = 0,45$

4.  $\frac{7}{100} = 0,07$

5.  $\frac{10}{100} = 0,1$

6.  $\frac{5}{100} = 0,05$

7.  $\frac{4}{100} = 0,04$

8.  $\frac{24}{100} = 0,24$

9.  $\frac{16}{100} = 0,16$

10.  $\frac{64}{100} = 0,64$

11.  $\frac{14}{100} = 0,14$

12.  $\frac{36}{100} = 0,36$

13.  $\frac{18}{100} = 0,18$

14.  $\frac{36}{100} = 0,36$

15.  $\frac{20}{100} = 0,2$