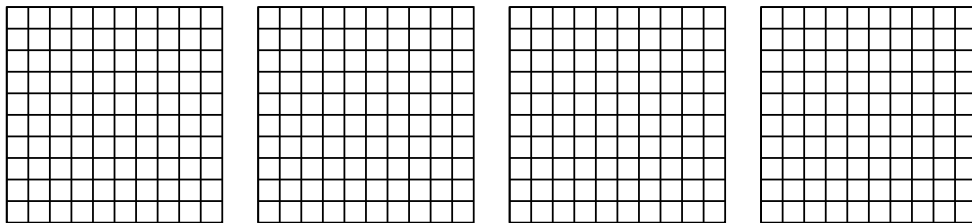


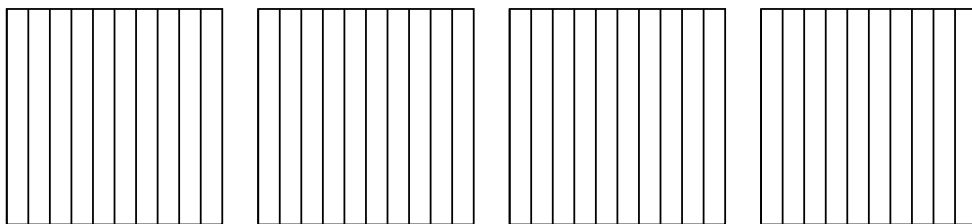


Utilisez la méthode visuelle pour résoudre chaque exercice.

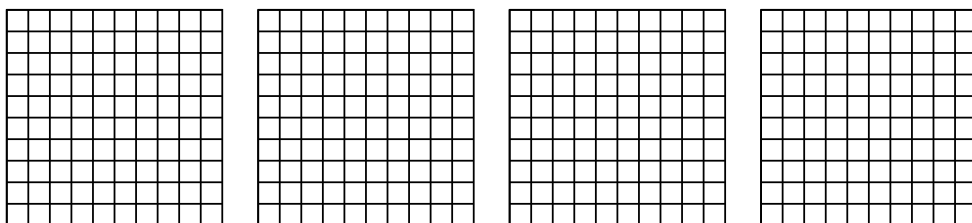
1) $4 \times 0,51 =$



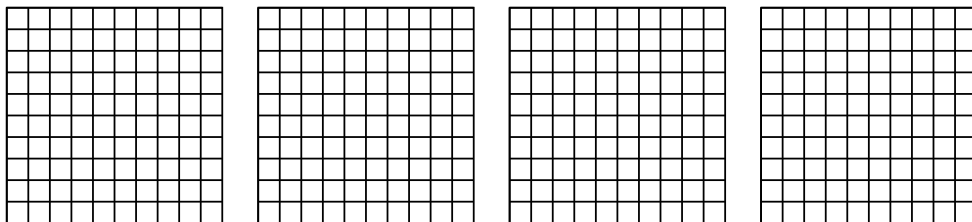
2) $4 \times 0,2 =$



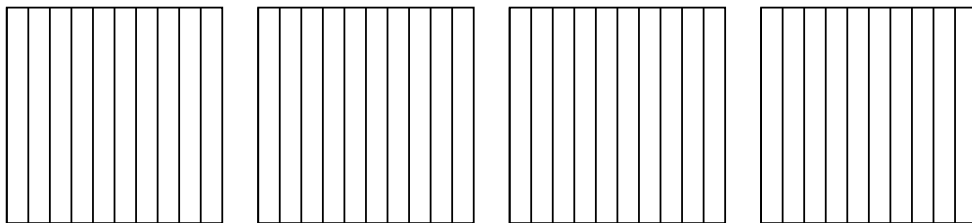
3) $4 \times 0,74 =$



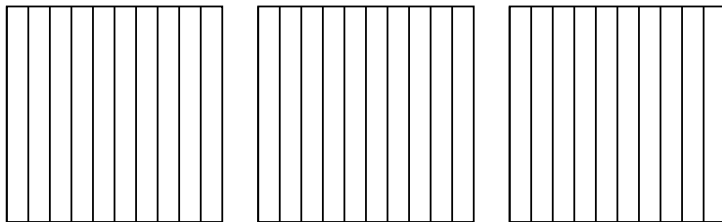
4) $4 \times 0,68 =$



5) $4 \times 0,6 =$



6) $3 \times 0,3 =$

**Réponses**

1. _____

2. _____

3. _____

4. _____

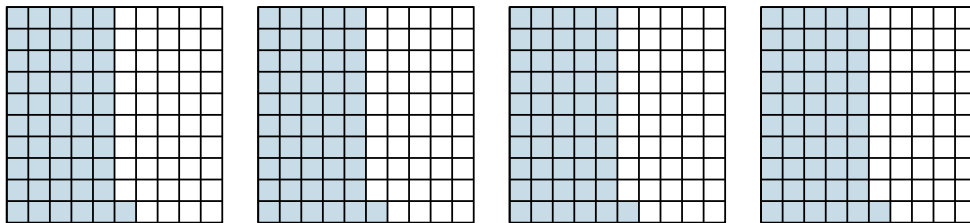
5. _____

6. _____

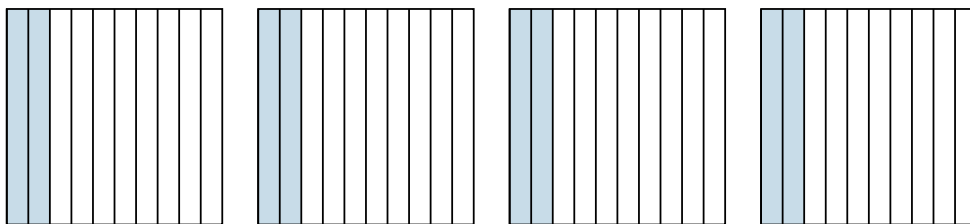


Utilisez la méthode visuelle pour résoudre chaque exercice.

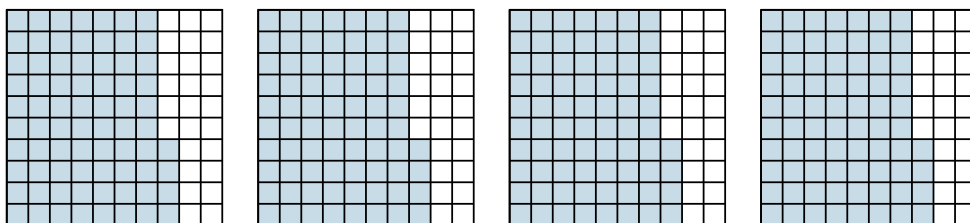
1) $4 \times 0,51 =$



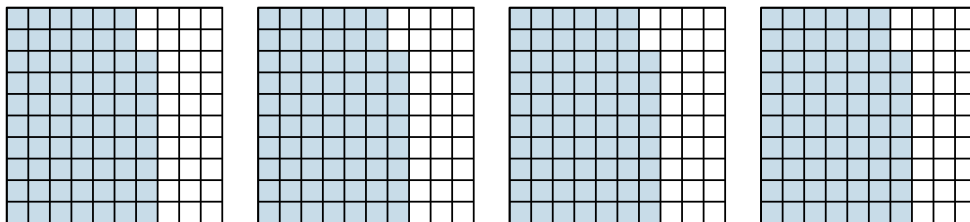
2) $4 \times 0,2 =$



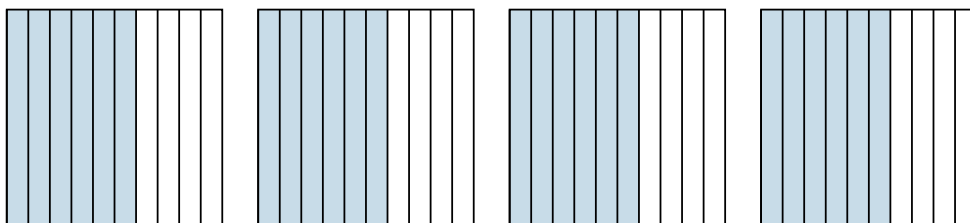
3) $4 \times 0,74 =$




4) $4 \times 0,68 =$



5) $4 \times 0,6 =$



6) $3 \times 0,3 =$



Réponses

1. $\frac{204}{100} = 2,04$

2. $\frac{8}{10} = 0,8$

3. $\frac{296}{100} = 2,96$

4. $\frac{272}{100} = 2,72$

5. $\frac{24}{10} = 2,4$

6. $\frac{9}{10} = 0,9$