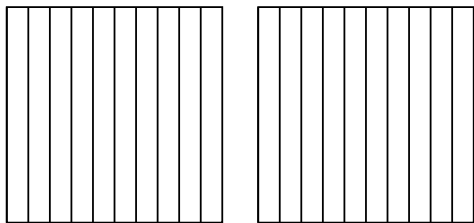


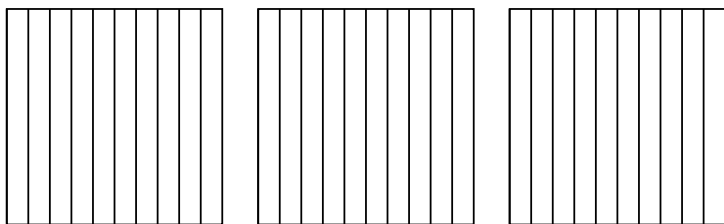


Utilisez la méthode visuelle pour résoudre chaque exercice.

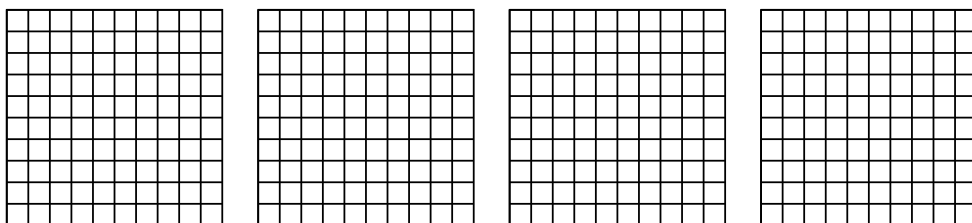
1)  $2 \times 0,7 =$




2)  $3 \times 0,5 =$



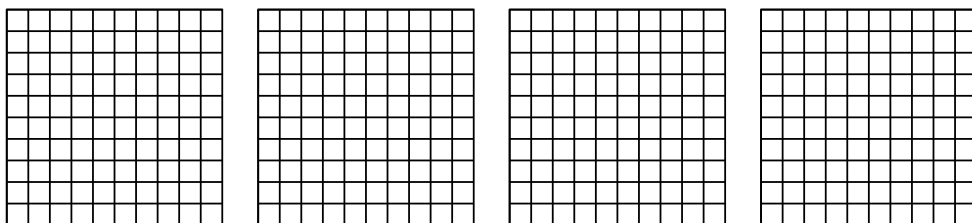
3)  $4 \times 0,92 =$



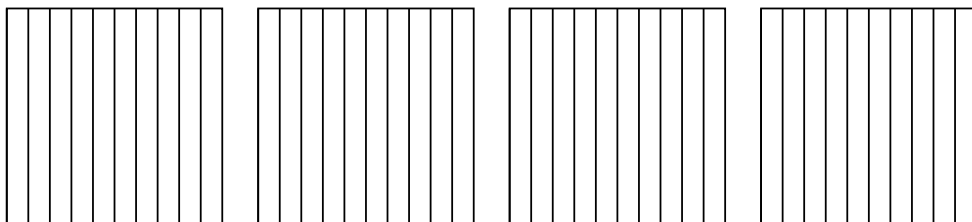
4)  $3 \times 0,73 =$



5)  $4 \times 0,20 =$



6)  $4 \times 0,7 =$



**Réponses**

1. \_\_\_\_\_

2. \_\_\_\_\_

3. \_\_\_\_\_

4. \_\_\_\_\_

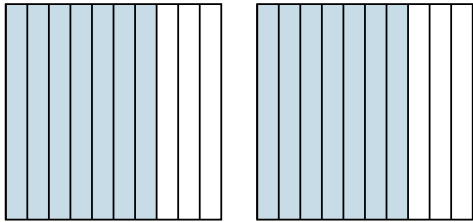
5. \_\_\_\_\_

6. \_\_\_\_\_

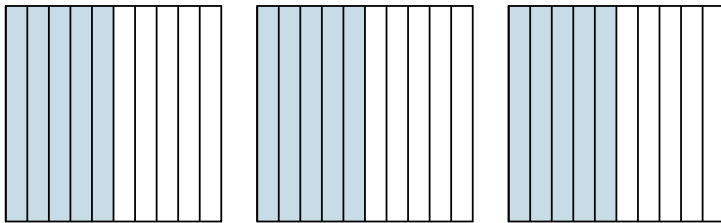


Utilisez la méthode visuelle pour résoudre chaque exercice.

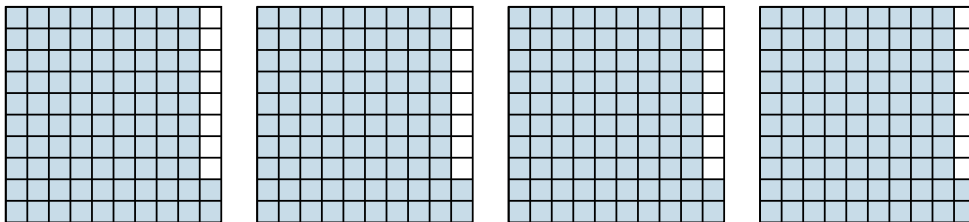
1)  $2 \times 0,7 =$




2)  $3 \times 0,5 =$



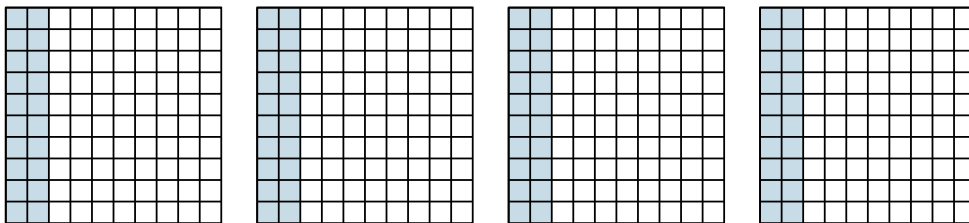
3)  $4 \times 0,92 =$



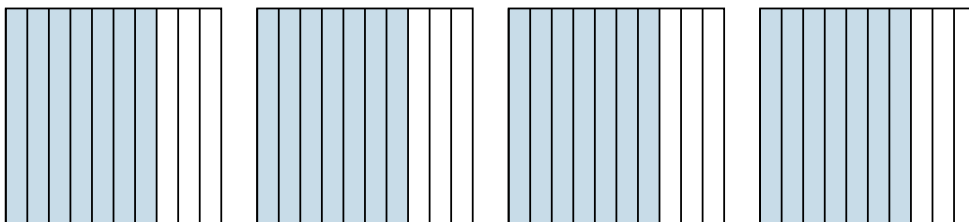
4)  $3 \times 0,73 =$



5)  $4 \times 0,20 =$



6)  $4 \times 0,7 =$



**Réponses**

1.  $\frac{14}{10} = 1,4$

2.  $\frac{15}{10} = 1,5$

3.  $\frac{368}{100} = 3,68$

4.  $\frac{219}{100} = 2,19$

5.  $\frac{80}{100} = 0,8$

6.  $\frac{28}{10} = 2,8$