


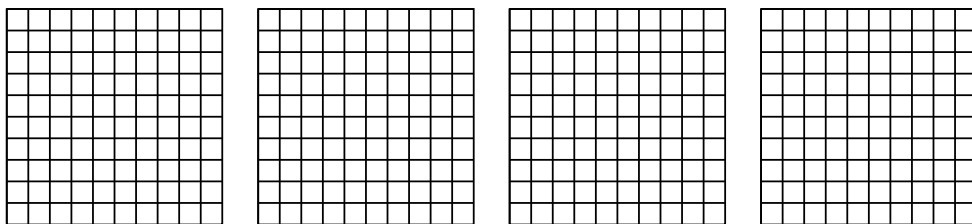


Utilisez la méthode visuelle pour résoudre chaque exercice.


1)  $3 \times 0,15 =$



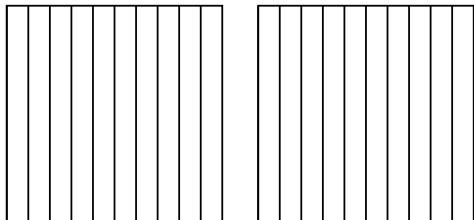
2)  $4 \times 0,84 =$



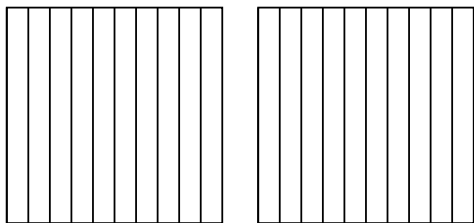
3)  $3 \times 0,81 =$



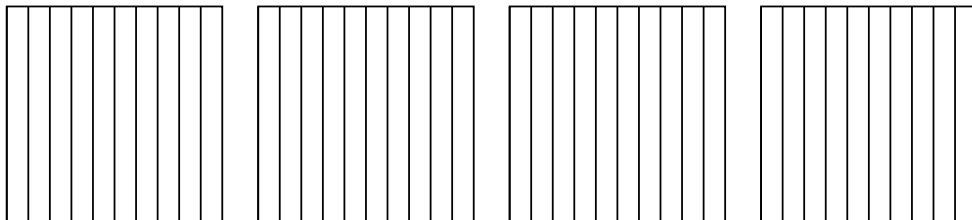
4)  $2 \times 0,5 =$



5)  $2 \times 0,8 =$



6)  $4 \times 0,3 =$



**Réponses**

1. \_\_\_\_\_

2. \_\_\_\_\_

3. \_\_\_\_\_

4. \_\_\_\_\_

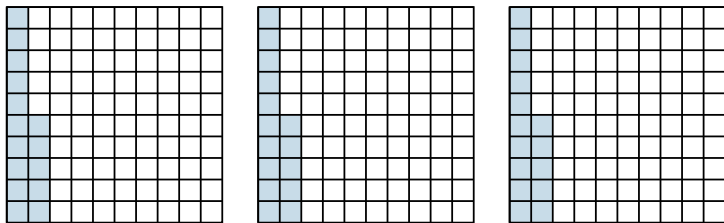
5. \_\_\_\_\_

6. \_\_\_\_\_

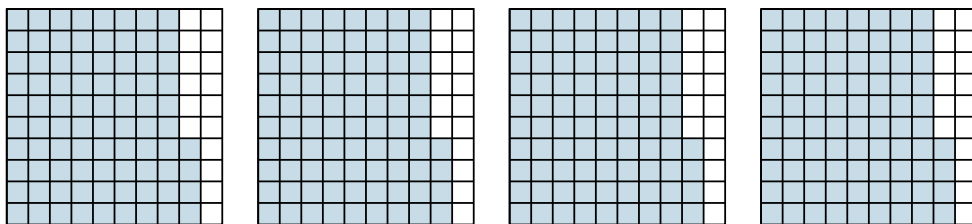


Utilisez la méthode visuelle pour résoudre chaque exercice.

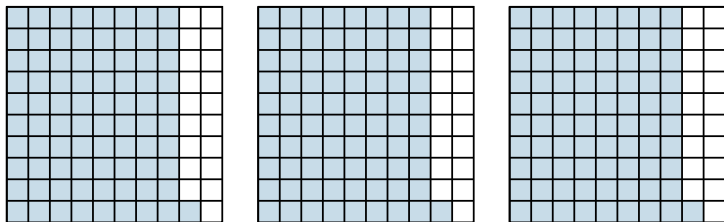
1)  $3 \times 0,15 =$



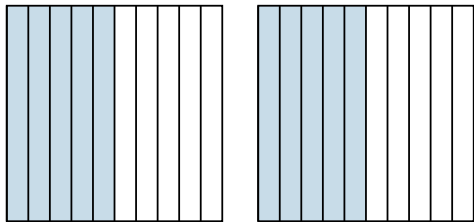
2)  $4 \times 0,84 =$



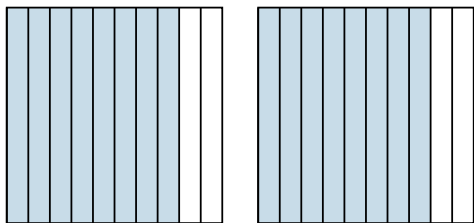
3)  $3 \times 0,81 =$



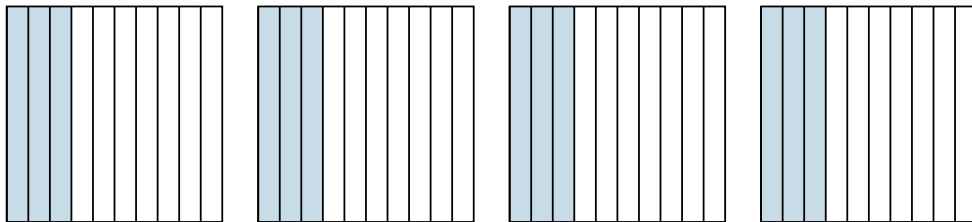
4)  $2 \times 0,5 =$



5)  $2 \times 0,8 =$



6)  $4 \times 0,3 =$



**Réponses**

1.  $\frac{45}{100} = 0,45$

2.  $\frac{336}{100} = 3,36$

3.  $\frac{243}{100} = 2,43$

4.  $\frac{10}{10} = 1$

5.  $\frac{16}{10} = 1,6$

6.  $\frac{12}{10} = 1,2$