
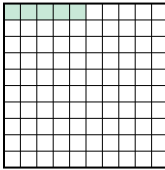






Classer les grilles, en fonction des zones colorées, de la plus petite à la plus grande.

Réponses

Ex) A  B  C  D 

petite 0.05 - B
0.57 - D
0.62 - C
grande 0.9 - A

Ex. **B,D,C,A**

1. _____

2. _____

3. _____

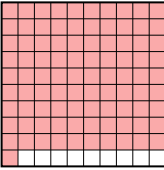

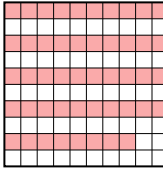

4. _____

5. _____

6. _____

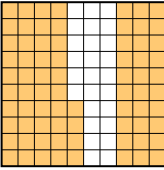
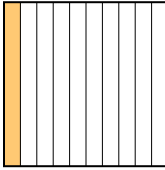
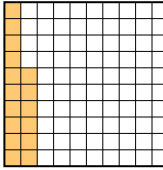
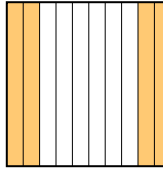
7. _____

8. _____

1) A  B  C  D 

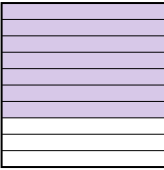
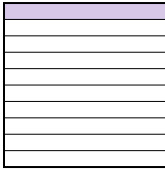
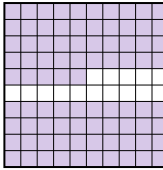
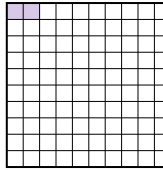
petite _____

grande _____

2) A  B  C  D 

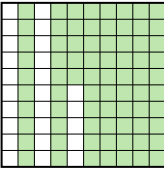
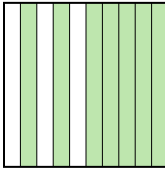

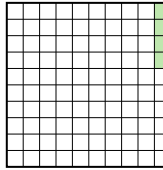
petite _____

grande _____

3) A  B  C  D 



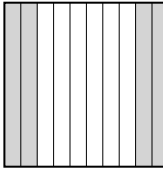

petite _____

grande _____

4) A  B  C  D 


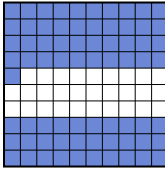


petite _____

grande _____

5) A  B  C  D 

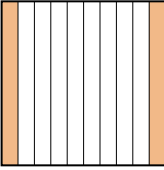
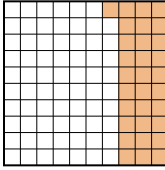
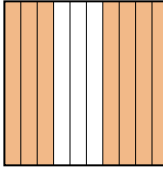
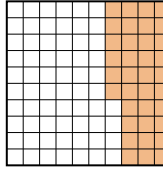
petite _____

grande _____

6) A  B  C  D 




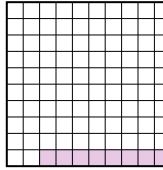
petite _____

grande _____

7) A  B  C  D 

petite _____

grande _____

8) A  B  C  D 

petite _____

grande _____



Classer les grilles, en fonction des zones colorées, de la plus petite à la plus grande.

| | | | | | |
|-----|---|---|---|---|---|
| Ex) | A | B | C | D | petite <u>0.05 - B</u> <u>0.57 - D</u> <u>0.62 - C</u> grande <u>0.9 - A</u> |
| 1) | A | B | C | D | petite <u>0.48 - C</u> <u>0.5 - B</u> <u>0.6 - D</u> grande <u>0.91 - A</u> |
| 2) | A | B | C | D | petite <u>0.1 - B</u> <u>0.16 - C</u> <u>0.4 - D</u> grande <u>0.74 - A</u> |
| 3) | A | B | C | D | petite <u>0.02 - D</u> <u>0.1 - B</u> <u>0.7 - A</u> grande <u>0.85 - C</u> |
| 4) | A | B | C | D | petite <u>0.04 - D</u> <u>0.7 - B</u> <u>0.75 - A</u> grande <u>0.8 - C</u> |
| 5) | A | B | C | D | petite <u>0.03 - B</u> <u>0.4 - C</u> <u>0.8 - A</u> grande <u>0.94 - D</u> |
| 6) | A | B | C | D | petite <u>0.06 - A</u> <u>0.6 - C</u> <u>0.7 - D</u> grande <u>0.71 - B</u> |
| 7) | A | B | C | D | petite <u>0.2 - A</u> <u>0.31 - B</u> <u>0.36 - D</u> grande <u>0.7 - C</u> |
| 8) | A | B | C | D | petite <u>0.08 - D</u> <u>0.3 - C</u> <u>0.4 - B</u> grande <u>0.9 - A</u> |

Réponses

- Ex. **B,D,C,A**
1. **C,B,D,A**
2. **B,C,D,A**
3. **D,B,A,C**
4. **D,B,A,C**
5. **B,C,A,D**
6. **A,C,D,B**
7. **A,B,D,C**
8. **D,C,B,A**