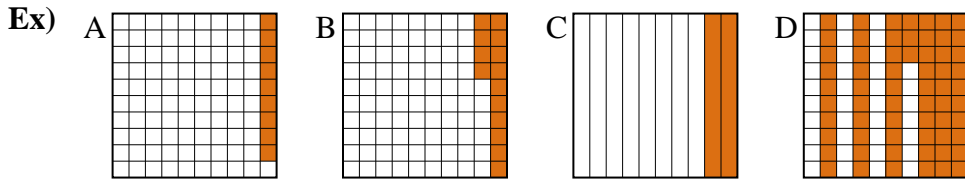




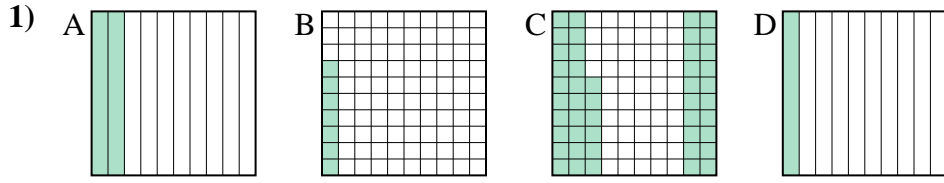
Classer les grilles, en fonction des zones colorées, de la plus petite à la plus grande.

Réponses



petite 0.09 - A
0.14 - B
0.2 - C
grande 0.63 - D

Ex. A,B,C,D



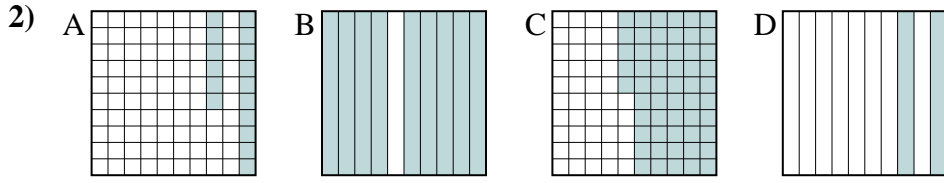
petite _____

grande _____

1. _____

2. _____

3. _____

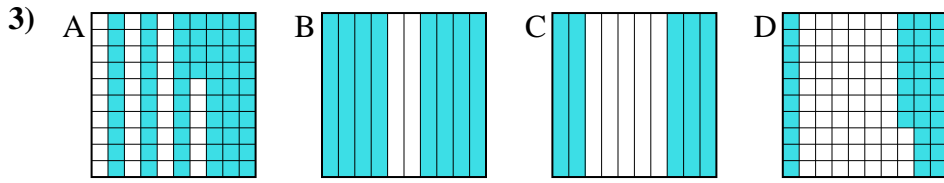


petite _____

grande _____

4. _____

5. _____



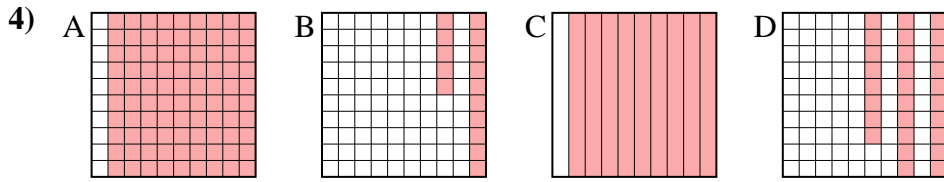
petite _____

grande _____

6. _____

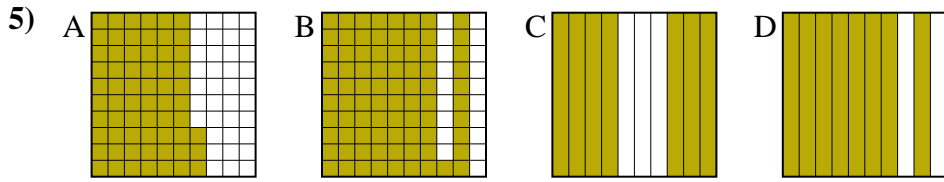
7. _____

8. _____



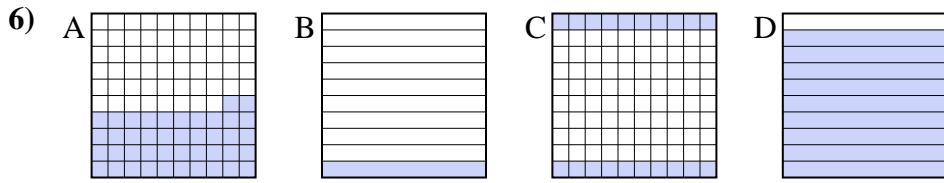
petite _____

grande _____



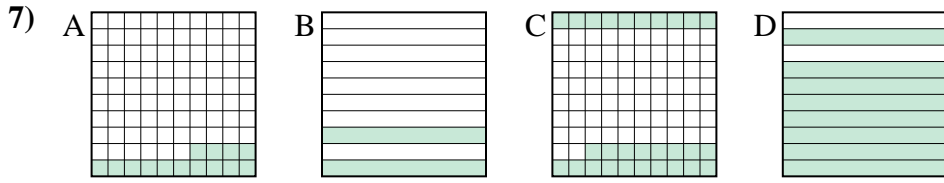
petite _____

grande _____



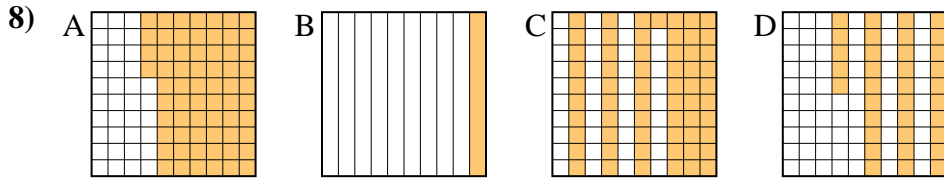
petite _____

grande _____



petite _____

grande _____



petite _____

grande _____



Classer les grilles, en fonction des zones colorées, de la plus petite à la plus grande.

Ex)	A	B	C	D	petite <u>0.09 - A</u> <u>0.14 - B</u> <u>0.2 - C</u>
					grande <u>0.63 - D</u>
1)	A	B	C	D	petite <u>0.07 - B</u> <u>0.1 - D</u> <u>0.2 - A</u>
					grande <u>0.46 - C</u>
2)	A	B	C	D	petite <u>0.16 - A</u> <u>0.2 - D</u> <u>0.55 - C</u>
					grande <u>0.9 - B</u>
3)	A	B	C	D	petite <u>0.37 - D</u> <u>0.5 - C</u> <u>0.64 - A</u>
					grande <u>0.8 - B</u>
4)	A	B	C	D	petite <u>0.15 - B</u> <u>0.28 - D</u> <u>0.9 - A</u>
					grande <u>0.9 - A</u>
5)	A	B	C	D	petite <u>0.63 - A</u> <u>0.7 - C</u> <u>0.8 - D</u>
					grande <u>0.81 - B</u>
6)	A	B	C	D	petite <u>0.1 - B</u> <u>0.2 - C</u> <u>0.42 - A</u>
					grande <u>0.9 - D</u>
7)	A	B	C	D	petite <u>0.14 - A</u> <u>0.2 - B</u> <u>0.28 - C</u>
					grande <u>0.8 - D</u>
8)	A	B	C	D	petite <u>0.1 - B</u> <u>0.35 - D</u> <u>0.61 - C</u>
					grande <u>0.64 - A</u>

Réponses

- Ex. A,B,C,D
1. B,D,A,C
2. A,D,C,B
3. D,C,A,B
4. B,D,A,A
5. A,C,D,B
6. B,C,A,D
7. A,B,C,D
8. B,D,C,A