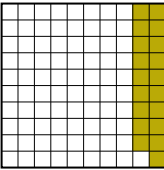


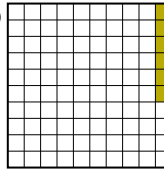




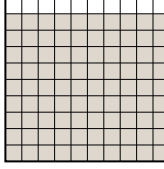



Classer les grilles, en fonction des zones colorées, de la plus petite à la plus grande.

Ex) A  B  C  D 

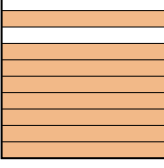
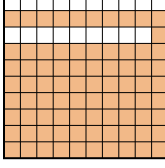

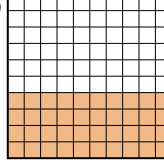
petite 0.06 - D
0.19 - A
0.2 - B
grande 0.4 - C

Réponses
 Ex. D,A,B,C

1) A  B  C  D 

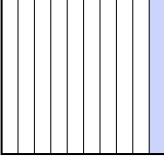

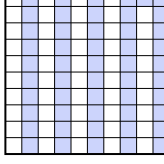
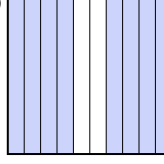
petite _____

 grande _____

2) A  B  C  D 

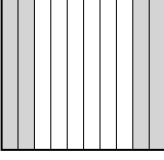
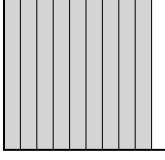


petite _____

 grande _____

3) A  B  C  D 

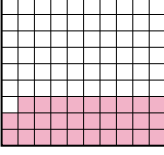


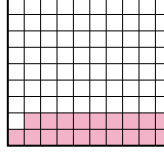
petite _____

 grande _____

4) A  B  C  D 


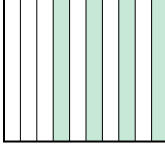
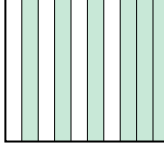

petite _____

 grande _____

5) A  B  C  D 

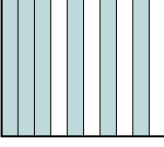


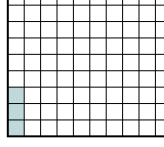
petite _____

 grande _____

6) A  B  C  D 



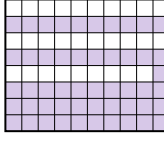

petite _____

 grande _____

7) A  B  C  D 

petite _____

 grande _____

8) A  B  C  D 

petite _____

 grande _____

1. _____
 2. _____
 3. _____
 4. _____
 5. _____
 6. _____
 7. _____
 8. _____



Classer les grilles, en fonction des zones colorées, de la plus petite à la plus grande.

Ex)	A	B	C	D	petite <u>0.06 - D</u> <u>0.19 - A</u> <u>0.2 - B</u>
					grande <u>0.4 - C</u>
1)	A	B	C	D	petite <u>0.2 - D</u> <u>0.5 - B</u> <u>0.9 - C</u>
					grande <u>0.96 - A</u>
2)	A	B	C	D	petite <u>0.1 - C</u> <u>0.4 - D</u> <u>0.8 - A</u>
					grande <u>0.81 - B</u>
3)	A	B	C	D	petite <u>0.1 - A</u> <u>0.51 - C</u> <u>0.6 - B</u>
					grande <u>0.8 - D</u>
4)	A	B	C	D	petite <u>0.36 - D</u> <u>0.4 - A</u> <u>0.9 - B</u>
					grande <u>0.93 - C</u>
5)	A	B	C	D	petite <u>0.19 - D</u> <u>0.29 - A</u> <u>0.6 - B</u>
					grande <u>0.8 - C</u>
6)	A	B	C	D	petite <u>0.4 - B</u> <u>0.6 - C</u> <u>0.67 - A</u>
					grande <u>0.89 - D</u>
7)	A	B	C	D	petite <u>0.03 - D</u> <u>0.17 - B</u> <u>0.36 - C</u>
					grande <u>0.6 - A</u>
8)	A	B	C	D	petite <u>0.2 - A</u> <u>0.5 - D</u> <u>0.61 - C</u>
					grande <u>0.92 - B</u>

Réponses

- Ex. D,A,B,C
1. D,B,C,A
2. C,D,A,B
3. A,C,B,D
4. D,A,B,C
5. D,A,B,C
6. B,C,A,D
7. D,B,C,A
8. A,D,C,B