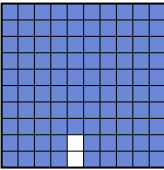
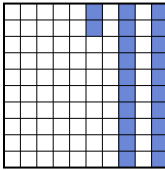
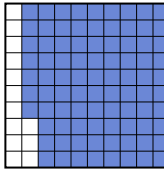



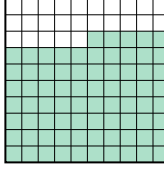
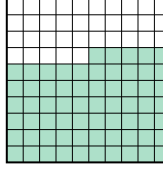



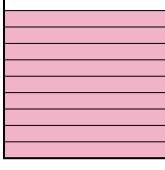
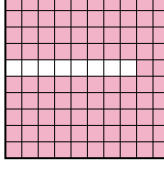




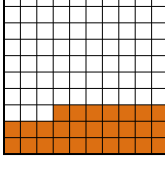
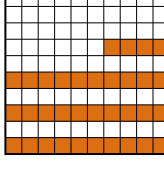

Classer les grilles, en fonction des zones colorées, de la plus petite à la plus grande.


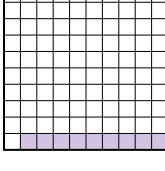

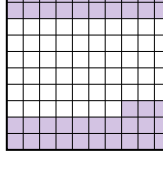
Réponses



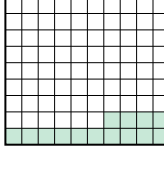

Ex) A  B  C  D  petite 0.1 - D
0.22 - B
0.87 - C
grande 0.98 - A





1) A  B  C  D  petite _____
_____ grande _____




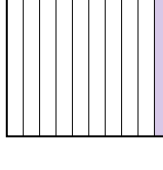
2) A  B  C  D  petite _____
_____ grande _____

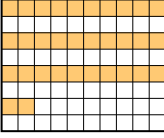


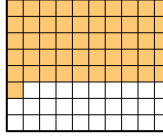
3) A  B  C  D  petite _____
_____ grande _____

4) A  B  C  D  petite _____
_____ grande _____

5) A  B  C  D  petite _____
_____ grande _____

6) A  B  C  D  petite _____
_____ grande _____

7) A  B  C  D  petite _____
_____ grande _____

8) A  B  C  D  petite _____
_____ grande _____

Ex. D,B,C,A

1. _____

2. _____

3. _____

4. _____

5. _____

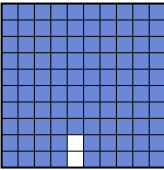
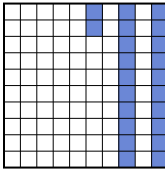
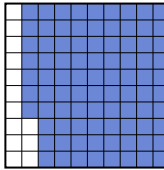

6. _____



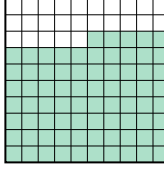
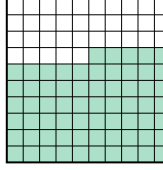
7. _____


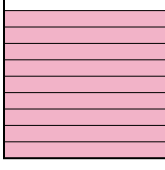
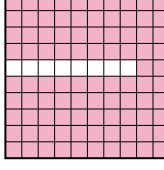

8. _____


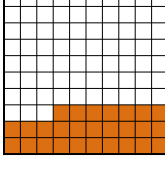
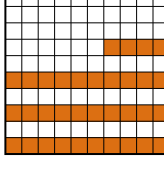




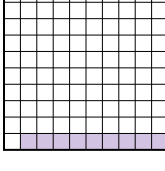

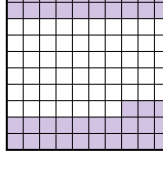
Classer les grilles, en fonction des zones colorées, de la plus petite à la plus grande.



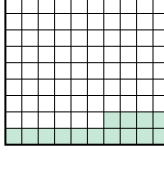

Ex) A  B  C  D  petite 0.1 - D
0.22 - B
0.87 - C
grande 0.98 - A





1) A  B  C  D  petite 0.2 - A
0.65 - D
0.75 - C
grande 0.9 - B




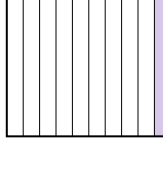
2) A  B  C  D  petite 0.4 - D
0.8 - A
0.9 - B
grande 0.92 - C

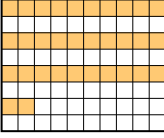


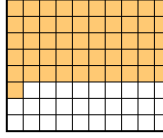
3) A  B  C  D  petite 0.2 - D
0.27 - B
0.34 - C
grande 0.5 - A

4) A  B  C  D  petite 0.09 - B
0.3 - C
0.43 - D
grande 0.8 - A

5) A  B  C  D  petite 0.14 - C
0.2 - B
0.3 - D
grande 0.95 - A

6) A  B  C  D  petite 0.18 - C
0.4 - A
0.4 - A
grande 0.6 - B

7) A  B  C  D  petite 0.1 - D
0.78 - C
0.9 - A
grande 0.9 - A

8) A  B  C  D  petite 0.4 - B
0.42 - A
0.6 - C
grande 0.71 - D

Réponses

- Ex. D,B,C,A
1. A,D,C,B
2. D,A,B,C
3. D,B,C,A
4. B,C,D,A
5. C,B,D,A
6. C,A,A,B
7. D,C,A,A
8. B,A,C,D