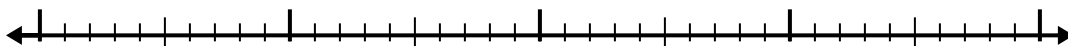


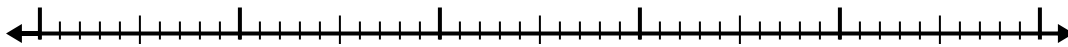


Utilisez la droite numérique pour résoudre chaque problème.

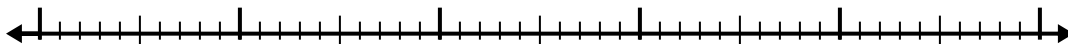
1) $9,6 - 2,2 =$



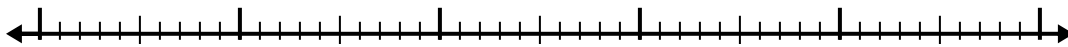
2) $7,7 - 2,3 =$



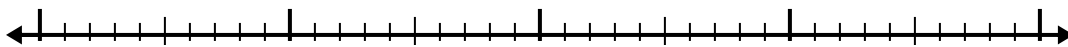
3) $7,6 - 2,9 =$



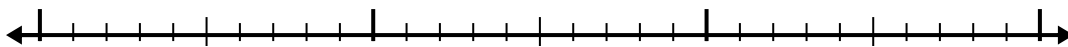
4) $8,1 - 3,7 =$




5) $4,5 - 2,3 =$




6) $5,2 - 1,3 =$



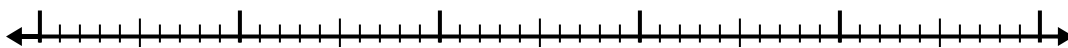
7) $4,9 - 3,9 =$




8) $7,9 - 2,1 =$



9) $8,6 - 2,3 =$



10) $10,2 - 2,9 =$



Réponses

1. _____

2. _____

3. _____

4. _____

5. _____

6. _____

7. _____

8. _____

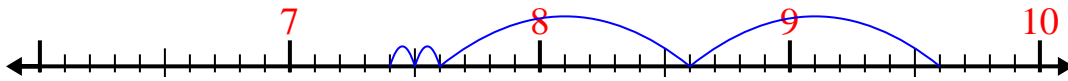
9. _____

10. _____

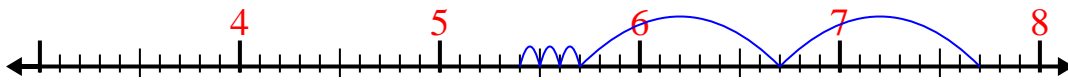


Utilisez la droite numérique pour résoudre chaque problème.

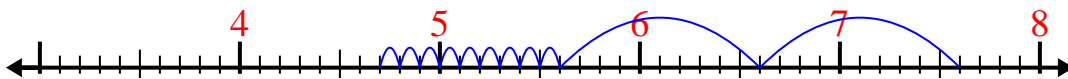
1) $9,6 - 2,2 =$



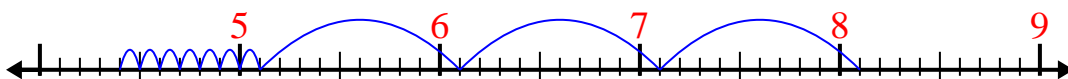
2) $7,7 - 2,3 =$



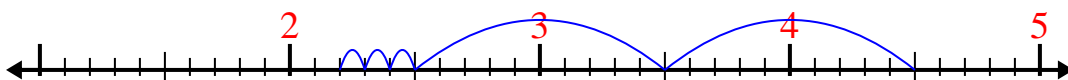
3) $7,6 - 2,9 =$



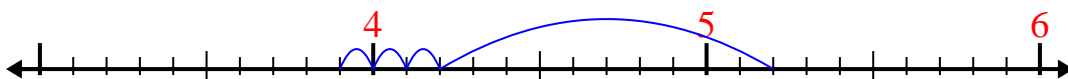
4) $8,1 - 3,7 =$



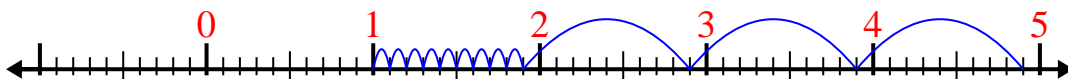
5) $4,5 - 2,3 =$



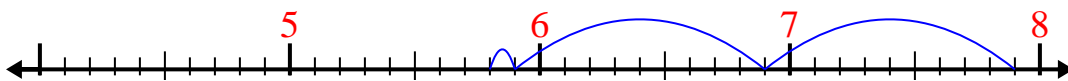
6) $5,2 - 1,3 =$



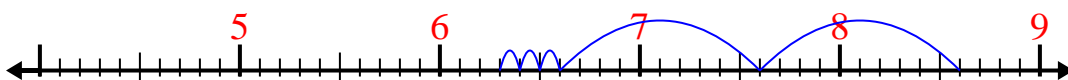
7) $4,9 - 3,9 =$



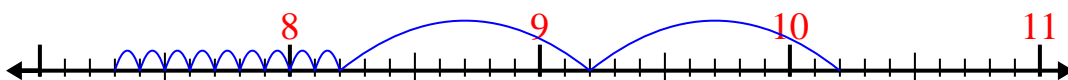
8) $7,9 - 2,1 =$



9) $8,6 - 2,3 =$



10) $10,2 - 2,9 =$

**Réponses**1. 7,42. 5,43. 4,74. 4,45. 2,26. 3,97. 18. 5,89. 6,310. 7,3