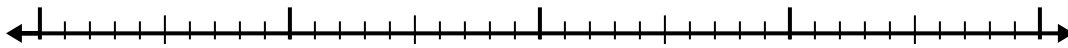


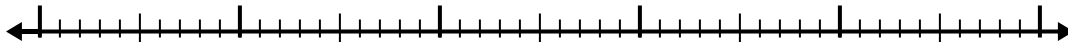


Utilisez la droite numérique pour résoudre chaque problème.

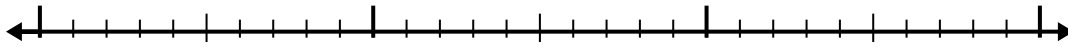
1)  $7 - 2,6 =$



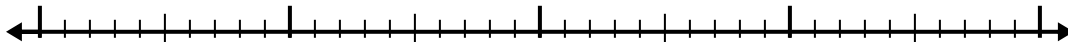
2)  $6,2 - 2,7 =$



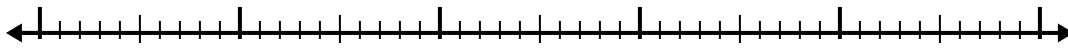
3)  $2,5 - 1,2 =$



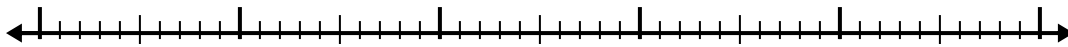
4)  $5,2 - 1,9 =$



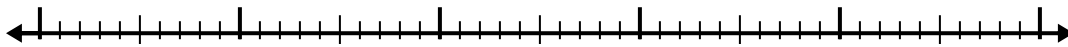
5)  $12,3 - 3,4 =$




6)  $11 - 2,7 =$



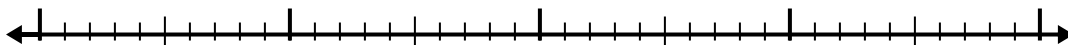
7)  $8 - 2,7 =$



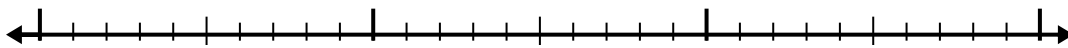
8)  $5 - 3,1 =$



9)  $10,9 - 2,3 =$



10)  $5,1 - 1,1 =$



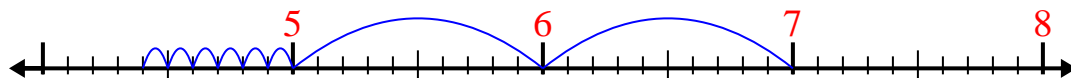
**Réponses**

- 1. \_\_\_\_\_
- 2. \_\_\_\_\_
- 3. \_\_\_\_\_
- 4. \_\_\_\_\_
- 5. \_\_\_\_\_
- 6. \_\_\_\_\_
- 7. \_\_\_\_\_
- 8. \_\_\_\_\_
- 9. \_\_\_\_\_
- 10. \_\_\_\_\_

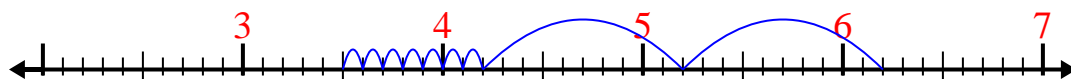


Utilisez la droite numérique pour résoudre chaque problème.

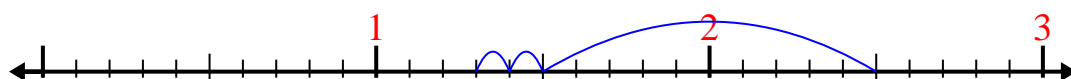
1)  $7 - 2,6 =$



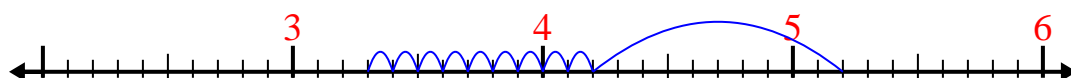
2)  $6,2 - 2,7 =$



3)  $2,5 - 1,2 =$



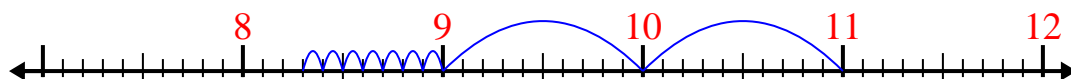
4)  $5,2 - 1,9 =$



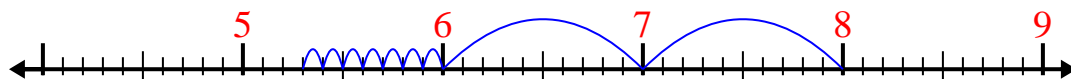
5)  $12,3 - 3,4 =$



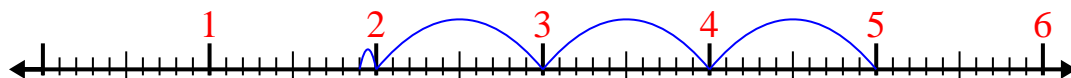
6)  $11 - 2,7 =$



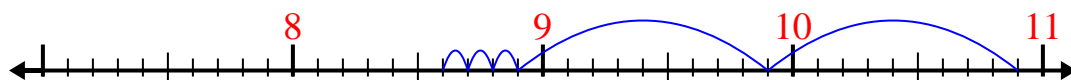
7)  $8 - 2,7 =$



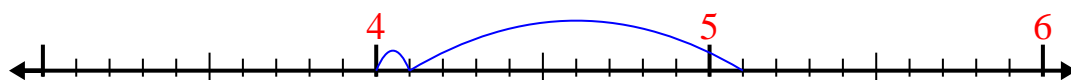
8)  $5 - 3,1 =$



9)  $10,9 - 2,3 =$



10)  $5,1 - 1,1 =$

Réponses1. 4,42. 3,53. 1,34. 3,35. 8,96. 8,37. 5,38. 1,99. 8,610. 4