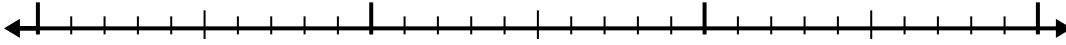


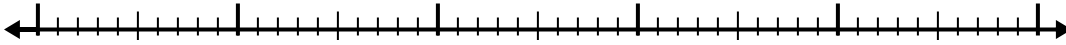


Utilisez la droite numérique pour résoudre chaque problème.

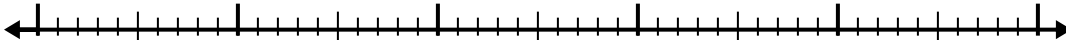
1) $6,8 - 1,1 =$



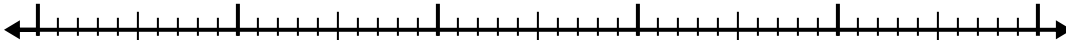
2) $10,2 - 2,4 =$



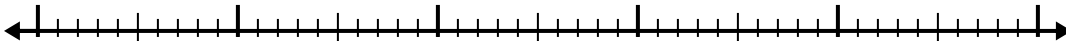
3) $11,5 - 2,9 =$



4) $5,4 - 2,6 =$



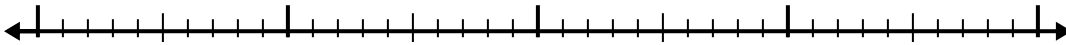
5) $5,4 - 2,4 =$




6) $7,7 - 1,5 =$




7) $5,2 - 1,1 =$



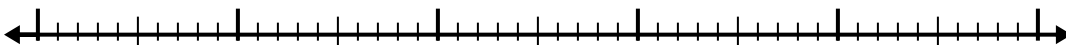
8) $7,4 - 1,8 =$



9) $11,8 - 2,9 =$



10) $8,8 - 2,5 =$



Réponses

1. _____

2. _____

3. _____

4. _____

5. _____

6. _____

7. _____

8. _____

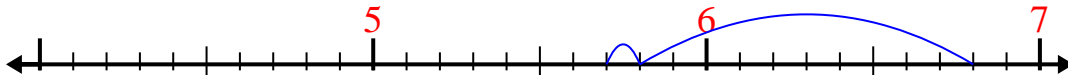
9. _____

10. _____

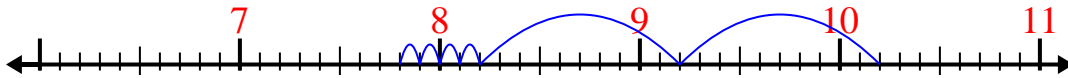


Utilisez la droite numérique pour résoudre chaque problème.

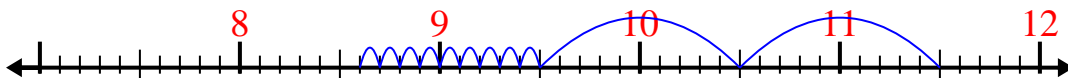
1) $6,8 - 1,1 =$



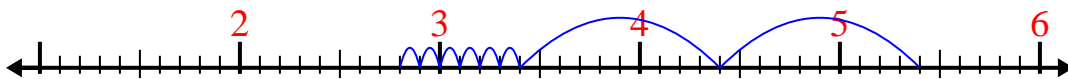
2) $10,2 - 2,4 =$



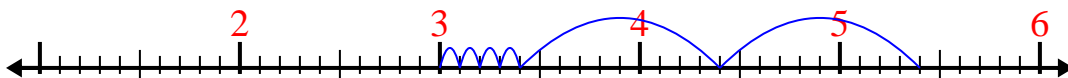
3) $11,5 - 2,9 =$



4) $5,4 - 2,6 =$



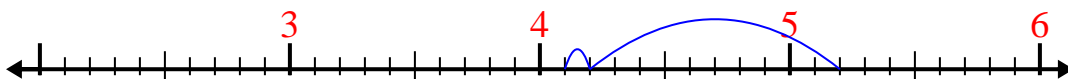
5) $5,4 - 2,4 =$



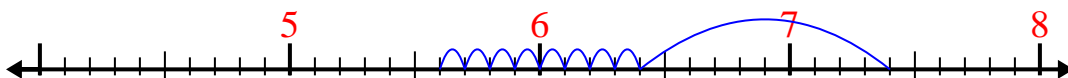
6) $7,7 - 1,5 =$



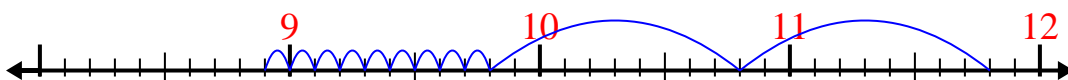
7) $5,2 - 1,1 =$



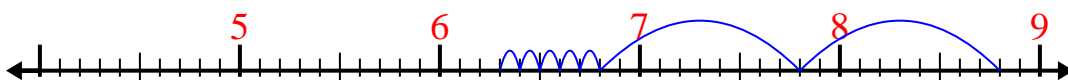
8) $7,4 - 1,8 =$



9) $11,8 - 2,9 =$



10) $8,8 - 2,5 =$

**Réponses**1. 5,72. 7,83. 8,64. 2,85. 36. 6,27. 4,18. 5,69. 8,910. 6,3