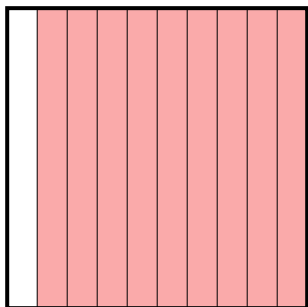




Déterminez quelle lettre représente le mieux la valeur colorée relative à la figure.

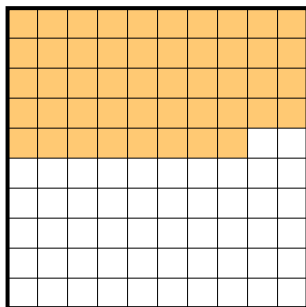
Réponses

1)



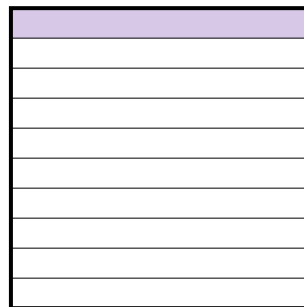
- A. 900,00
B. 900,0
C. 90
D. 0,9

2)



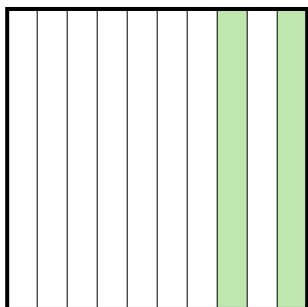
- A. 0,48
B. 48
C. 480,00
D. 4,8

3)




- A. 0,1
B. 100,00
C. 10
D. 1

4)



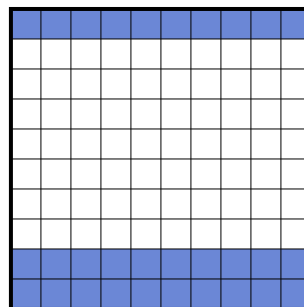
- A. 200,0
B. 0,2
C. 20
D. 200,00

5)



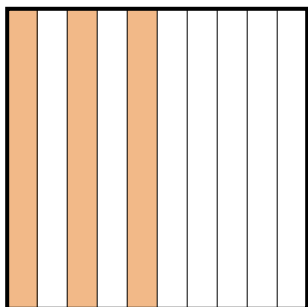
- A. 870,0
B. 0,087
C. 0,87
D. 870,00

6)



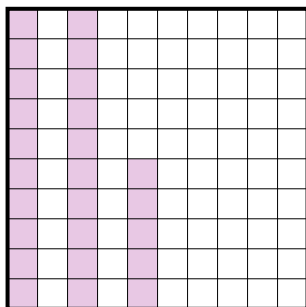
- A. 3
B. 30
C. 300,00
D. 0,3

7)




- A. 3
B. 30
C. 300,0
D. 0,3

8)



- A. 2,5
B. 0,025
C. 250,0
D. 0,25

9)



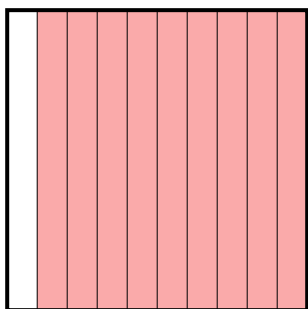
- A. 0,06
B. 0,6
C. 600,0
D. 60

1. _____
2. _____
3. _____
4. _____
5. _____
6. _____
7. _____
8. _____
9. _____




Déterminez quelle lettre représente le mieux la valeur colorée relative à la figure.

1)



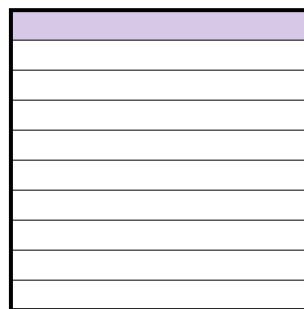
- A. 900,00
B. 900,0
C. 90
D. 0,9

2)



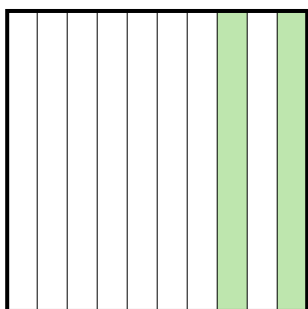
- A. 0,48
B. 48
C. 480,00
D. 4,8

3)




- A. 0,1
B. 100,00
C. 10
D. 1

4)



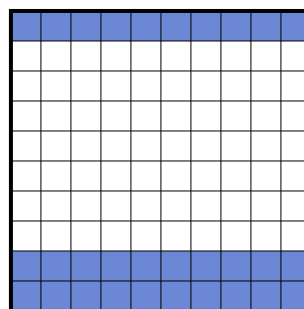
- A. 200,0
B. 0,2
C. 20
D. 200,00

5)



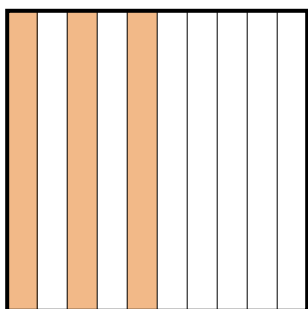
- A. 870,0
B. 0,087
C. 0,87
D. 870,00

6)



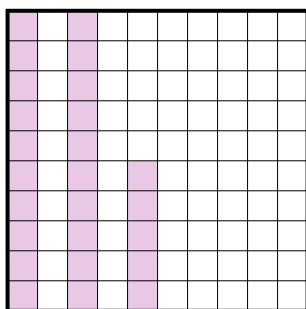
- A. 3
B. 30
C. 300,00
D. 0,3

7)




- A. 3
B. 30
C. 300,0
D. 0,3

8)



- A. 2,5
B. 0,025
C. 250,0
D. 0,25

9)



- A. 0,06
B. 0,6
C. 600,0
D. 60

Réponses

1. **D**
2. **A**
3. **A**
4. **B**
5. **C**
6. **D**
7. **D**
8. **D**
9. **B**