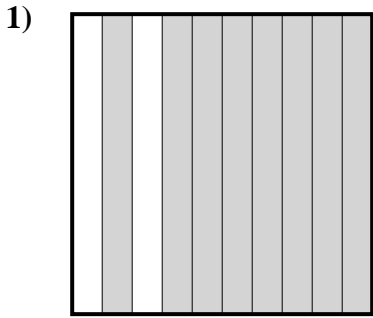


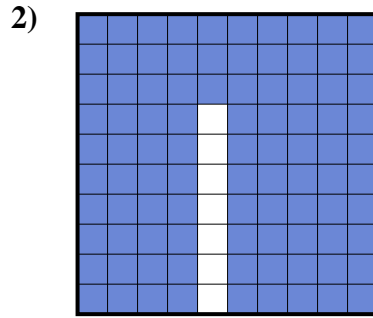


Déterminez quelle lettre représente le mieux la valeur colorée relative à la figure.

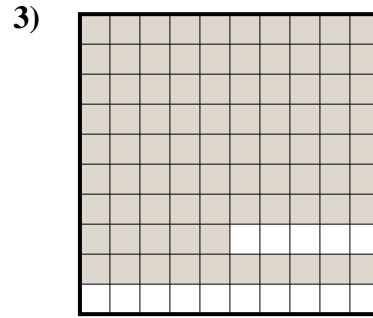
Réponses



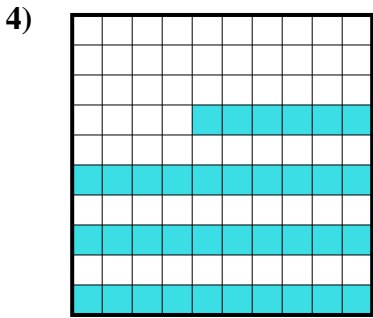
- A. 800,00
- B. 80
- C. 0,8
- D. 8



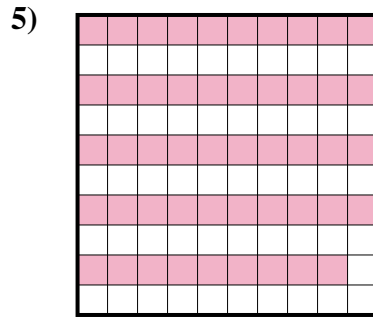
- A. 0,093
- B. 930,0
- C. 93
- D. 0,93




- A. 0,85
- B. 0,085
- C. 85
- D. 8,5



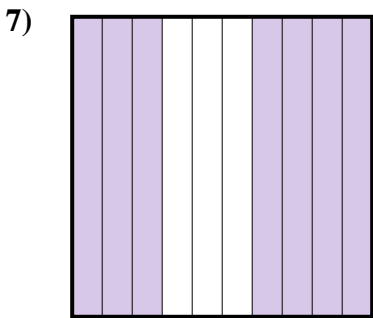
- A. 0,36
- B. 3,6
- C. 360,0
- D. 360,00



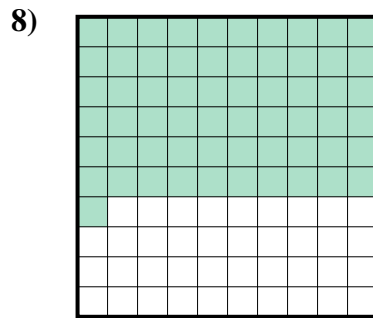
- A. 0,49
- B. 49
- C. 490,0
- D. 490,00



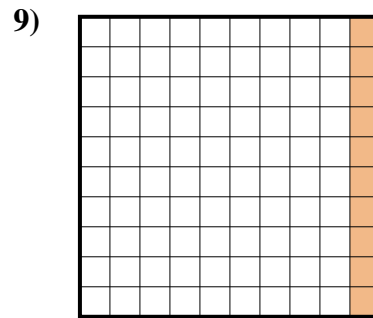
- A. 200,0
- B. 0,02
- C. 200,00
- D. 0,2



- A. 7
- B. 0,7
- C. 700,0
- D. 700,00



- A. 0,61
- B. 610,0
- C. 6,1
- D. 61



- A. 10
- B. 0,01
- C. 1
- D. 0,1

1. _____

2. _____

3. _____

4. _____

5. _____

6. _____

7. _____

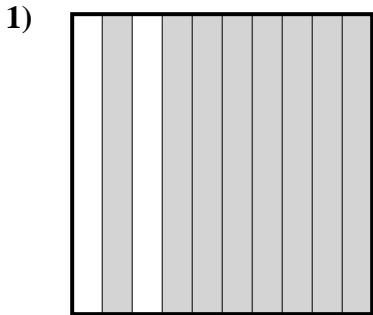
8. _____

9. _____

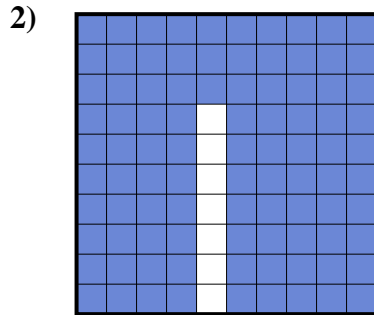


Déterminez quelle lettre représente le mieux la valeur colorée relative à la figure.

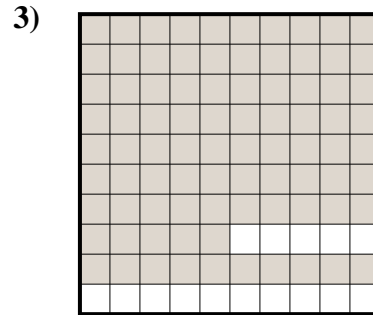
Réponses



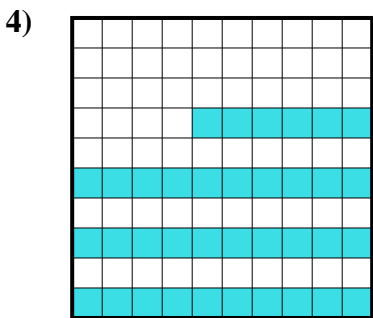
- A. 800,00
- B. 80
- C. 0,8
- D. 8



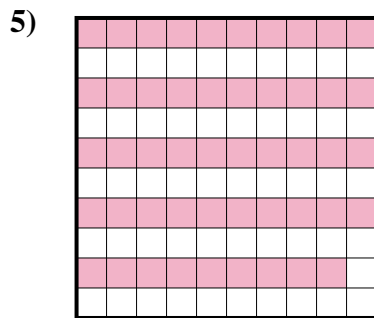
- A. 0,093
- B. 930,0
- C. 93
- D. 0,93




- A. 0,85
- B. 0,085
- C. 85
- D. 8,5



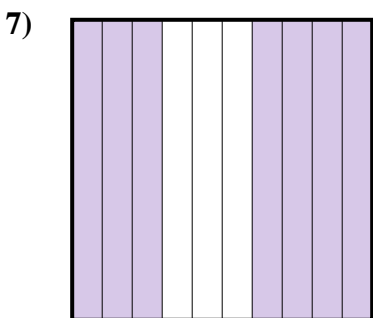
- A. 0,36
- B. 3,6
- C. 360,0
- D. 360,00



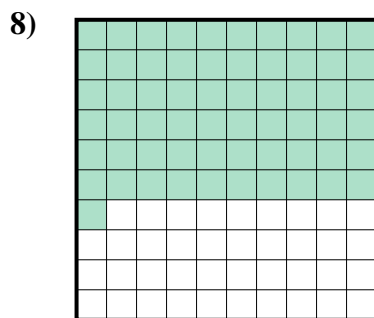
- A. 0,49
- B. 49
- C. 490,0
- D. 490,00



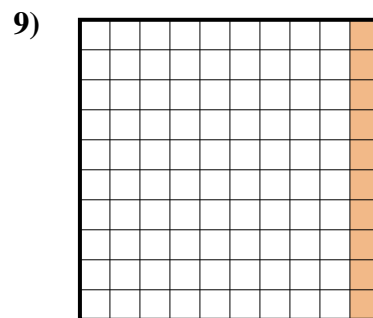
- A. 200,0
- B. 0,02
- C. 200,00
- D. 0,2



- A. 7
- B. 0,7
- C. 700,0
- D. 700,00



- A. 0,61
- B. 610,0
- C. 6,1
- D. 61



- A. 10
- B. 0,01
- C. 1
- D. 0,1

- 1. **C**
- 2. **D**
- 3. **A**
- 4. **A**
- 5. **A**
- 6. **D**
- 7. **B**
- 8. **A**
- 9. **D**