




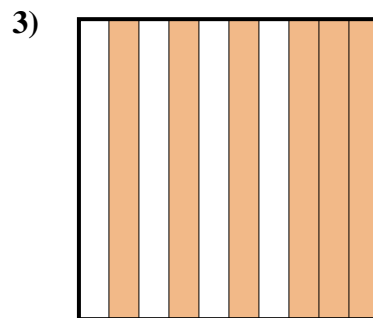
Déterminez quelle lettre représente le mieux la valeur colorée relative à la figure.

**Réponses**


- A. 0,3  
B. 30  
C. 0,03  
D. 300,0



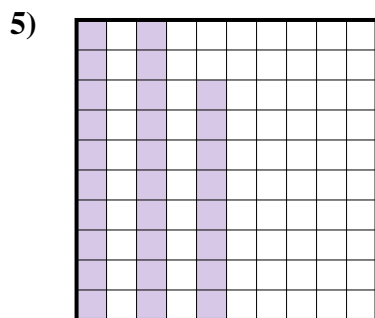
- A. 0,8  
B. 8  
C. 800,00  
D. 80



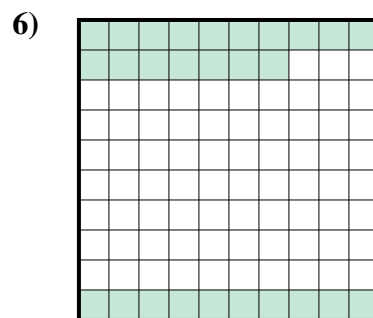
- A. 6  
B. 600,0  
C. 600,00  
D. 0,6



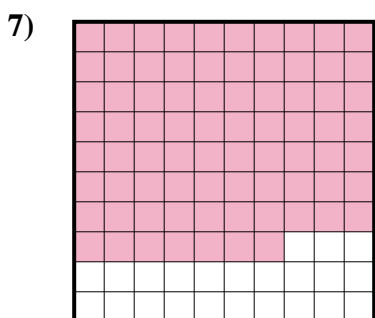
- A. 20  
B. 0,02  
C. 0,2  
D. 200,00



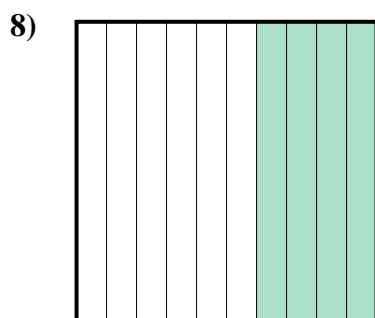
- A. 0,28  
B. 0,028  
C. 280,0  
D. 280,00



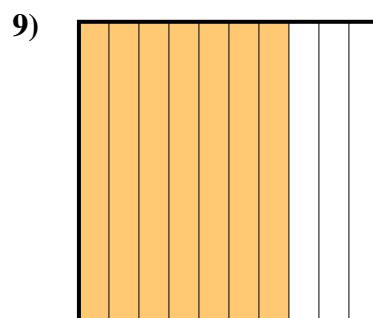
- A. 0,27  
B. 270,0  
C. 2,7  
D. 0,027



- A. 0,77  
B. 77  
C. 7,7  
D. 0,077



- A. 0,4  
B. 40  
C. 400,0  
D. 4



- A. 700,00  
B. 70  
C. 700,0  
D. 0,7

1. \_\_\_\_\_  
2. \_\_\_\_\_  
3. \_\_\_\_\_  
4. \_\_\_\_\_  
5. \_\_\_\_\_  
6. \_\_\_\_\_  
7. \_\_\_\_\_  
8. \_\_\_\_\_  
9. \_\_\_\_\_




Déterminez quelle lettre représente le mieux la valeur colorée relative à la figure.

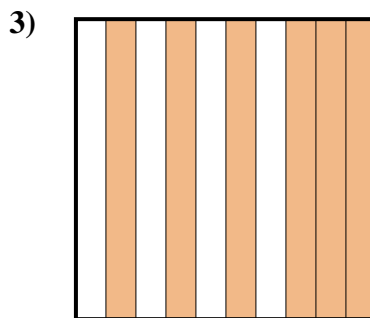
**Réponses**




- A. 0,3
- B. 30
- C. 0,03
- D. 300,0



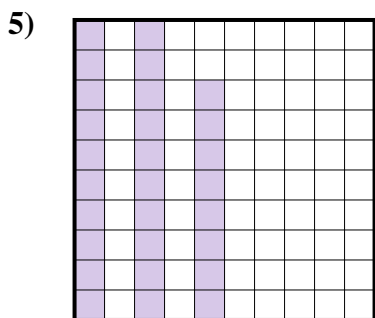
- A. 0,8
- B. 8
- C. 800,00
- D. 80



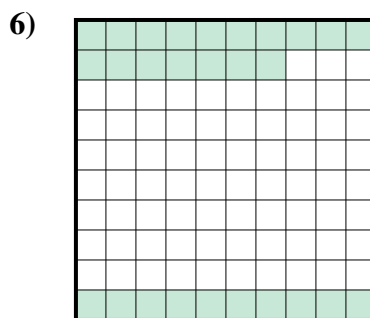
- A. 6
- B. 600,0
- C. 600,00
- D. 0,6



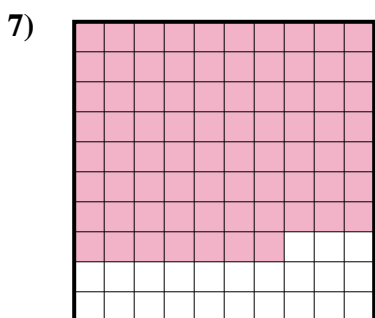
- A. 20
- B. 0,02
- C. 0,2
- D. 200,00



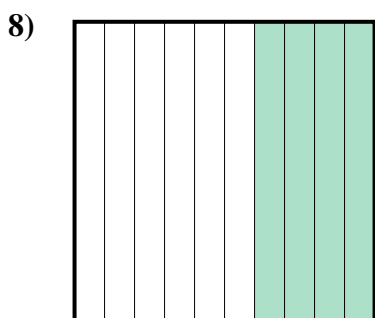
- A. 0,28
- B. 0,028
- C. 280,0
- D. 280,00



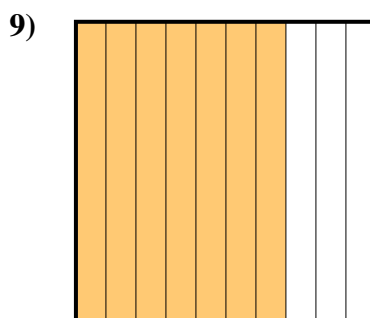
- A. 0,27
- B. 270,0
- C. 2,7
- D. 0,027



- A. 0,77
- B. 77
- C. 7,7
- D. 0,077



- A. 0,4
- B. 40
- C. 400,0
- D. 4



- A. 700,00
- B. 70
- C. 700,0
- D. 0,7

- 1. **A**
- 2. **A**
- 3. **D**
- 4. **C**
- 5. **A**
- 6. **A**
- 7. **A**
- 8. **A**
- 9. **D**