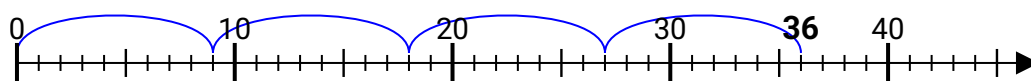




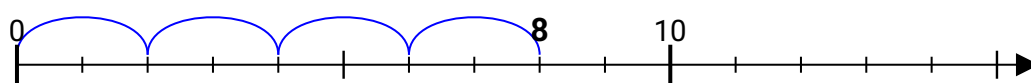
**Utilisez la droite numérique pour résoudre chaque problème.**

## Réponses

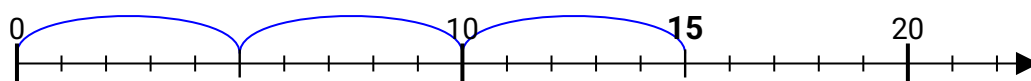
1)  $36 \div 9 =$



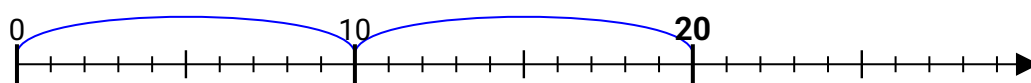
2)  $8 \div 2 =$



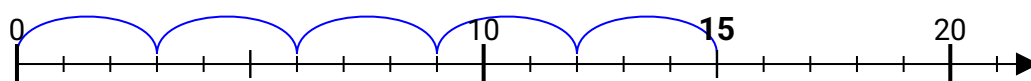
3)  $15 \div 5 =$



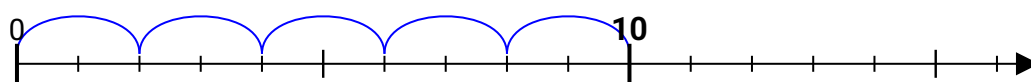
4)  $20 \div 10 =$



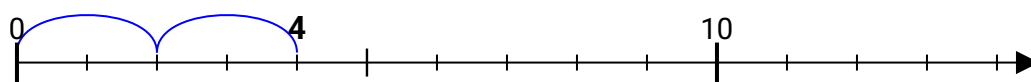
5)  $15 \div 3 =$



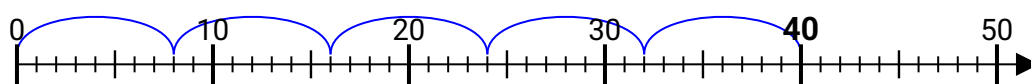
6)  $10 \div 2 =$



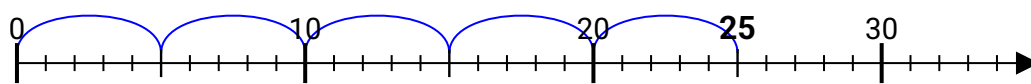
7)  $4 \div 2 =$



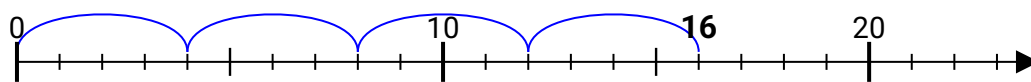
8)  $40 \div 8 =$



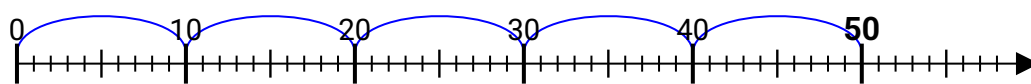
9)  $25 \div 5 =$



10)  $16 \div 4 =$



11)  $50 \div 10 =$



1. **4**

2. **4**

3. **3**

4. **2**

5. **5**

6. **5**

7. **2**

8 5

9 5

10 **4**

11 **5**