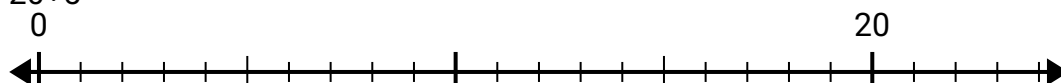




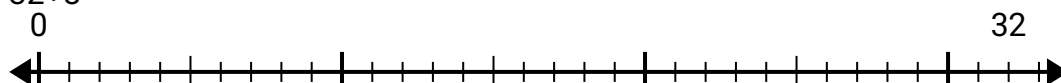
Utilisez la droite numérique pour résoudre le problème de division.

## Réponses

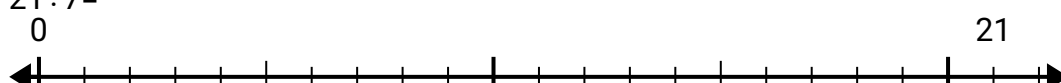
1)  $20 \div 5 =$   
0



2)  $32 \div 8 =$   
0



3)  $21 \div 7 =$   
0



4)  $40 \div 5 =$   
0




5)  $28 \div 7 =$   
0



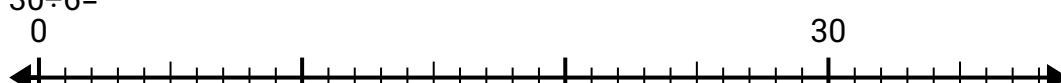
6)  $48 \div 8 =$   
0



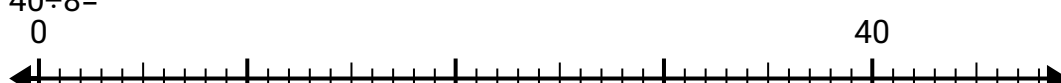
7)  $42 \div 7 =$   
0



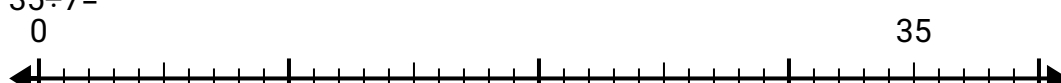
8)  $30 \div 6 =$   
0



9)  $40 \div 8 =$   
0



10)  $35 \div 7 =$   
0



1. \_\_\_\_\_

2. \_\_\_\_\_

3. \_\_\_\_\_

4. \_\_\_\_\_

5. \_\_\_\_\_

6. \_\_\_\_\_

7. \_\_\_\_\_

8. \_\_\_\_\_

9. \_\_\_\_\_

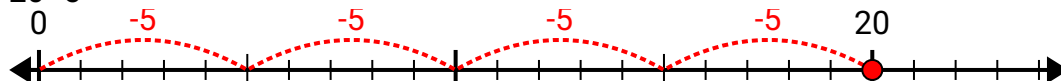
10. \_\_\_\_\_



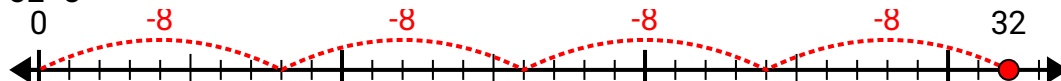
Utilisez la droite numérique pour résoudre le problème de division.

## Réponses

1)  $20 \div 5 =$

1. 4

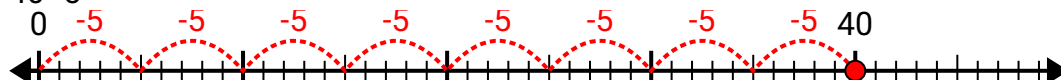
2)  $32 \div 8 =$

2. 4

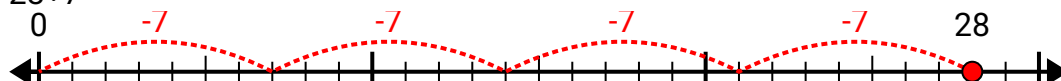
3)  $21 \div 7 =$

3. 3

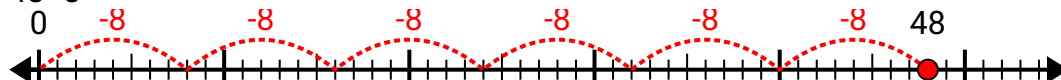
4)  $40 \div 5 =$

4. 8

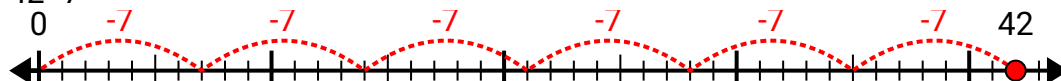
5)  $28 \div 7 =$

5. 4

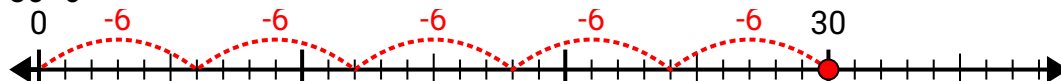
6)  $48 \div 8 =$

6. 6

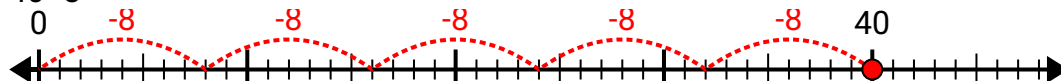
7)  $42 \div 7 =$

7. 6

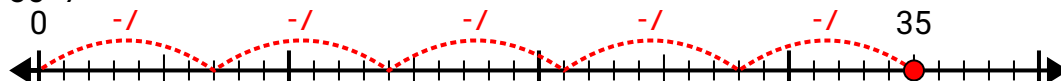
8)  $30 \div 6 =$

8. 5

9)  $40 \div 8 =$

9. 5

10)  $35 \div 7 =$

10. 5