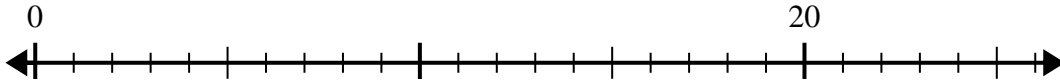




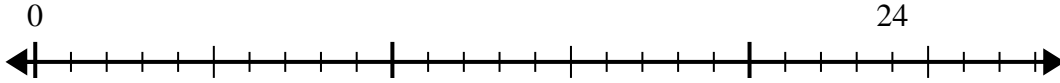
Utilisez la droite numérique pour résoudre le problème de division.

Réponses

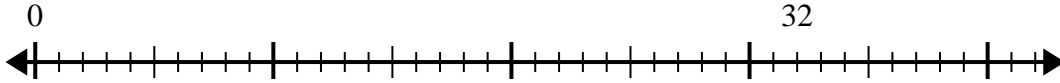
1) $20 \div 5 =$
0



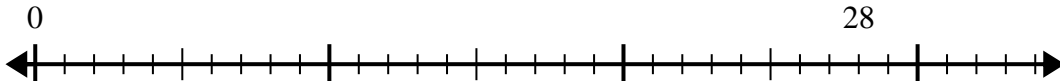
2) $24 \div 6 =$
0



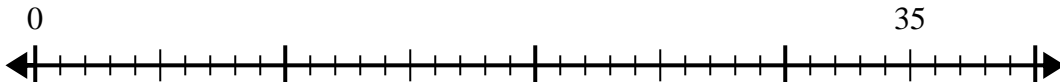
3) $32 \div 8 =$
0



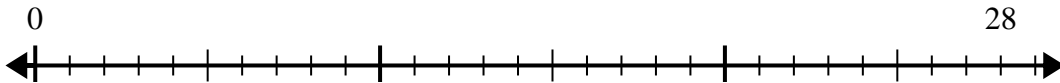
4) $28 \div 7 =$
0



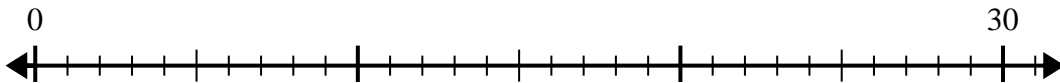
5) $35 \div 5 =$
0



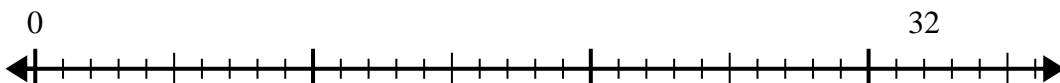
6) $28 \div 4 =$
0



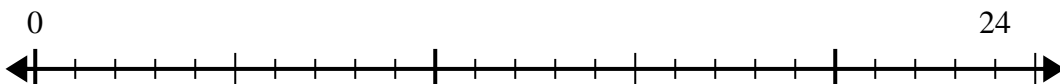
7) $30 \div 6 =$
0



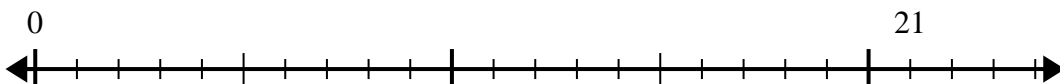
8) $32 \div 4 =$
0



9) $24 \div 4 =$
0



10) $21 \div 7 =$
0



- 1. _____
- 2. _____
- 3. _____
- 4. _____
- 5. _____
- 6. _____
- 7. _____
- 8. _____
- 9. _____
- 10. _____

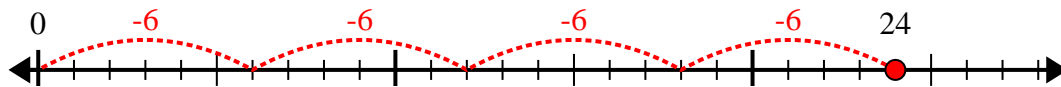


Utilisez la droite numérique pour résoudre le problème de division.

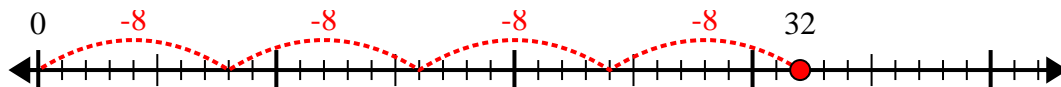
1) $20 \div 5 =$



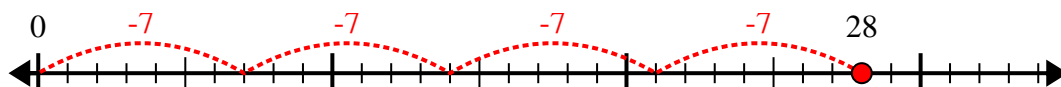
2) $24 \div 6 =$



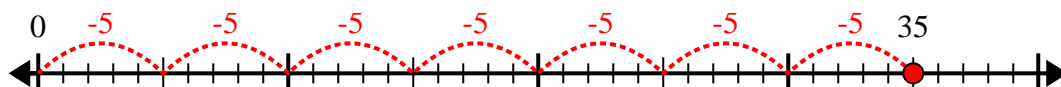
3) $32 \div 8 =$



4) $28 \div 7 =$



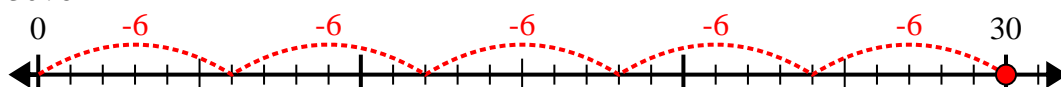
5) $35 \div 5 =$



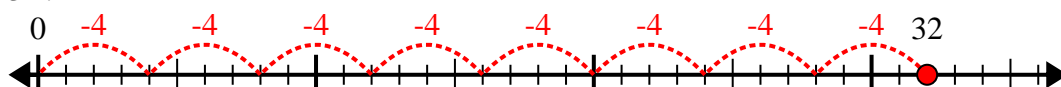
6) $28 \div 4 =$



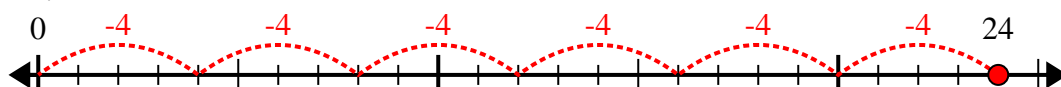
7) $30 \div 6 =$



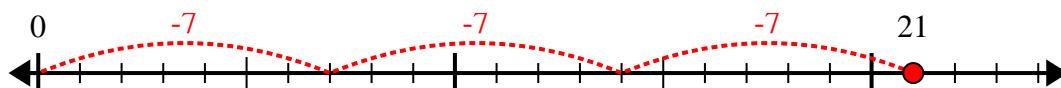
8) $32 \div 4 =$



9) $24 \div 4 =$



10) $21 \div 7 =$



Réponses

1. 4

2. 4

3. 4

4. 4

5. 7

6. 7

7. 5

8. 8

9. 6

10. 3