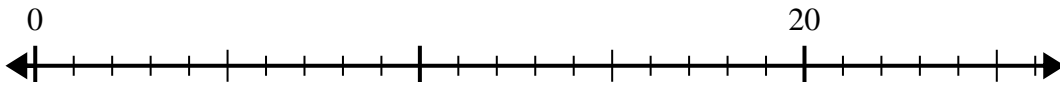




Utilisez la droite numérique pour résoudre le problème de division.

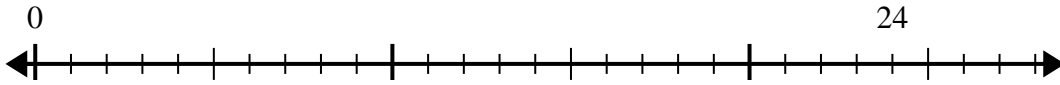
Réponses

1) $20 \div 5 =$



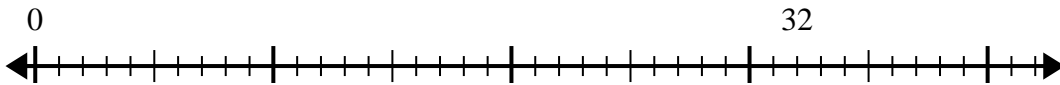
1. _____

2) $24 \div 6 =$



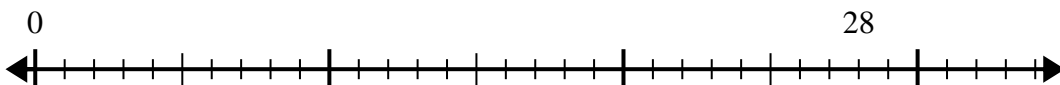
2. _____

3) $32 \div 8 =$



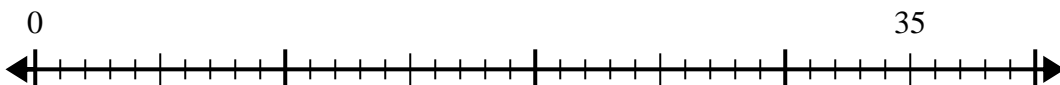
3. _____

4) $28 \div 7 =$



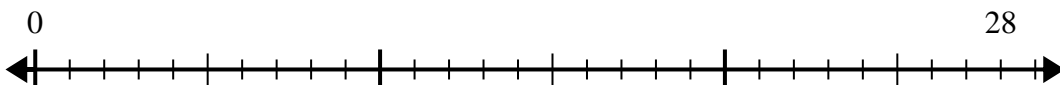
4. _____

5) $35 \div 5 =$



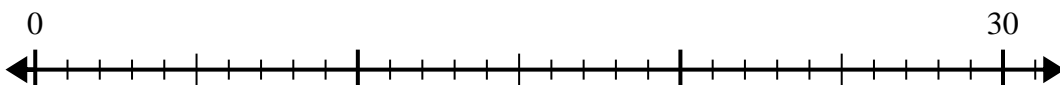
5. _____

6) $28 \div 4 =$



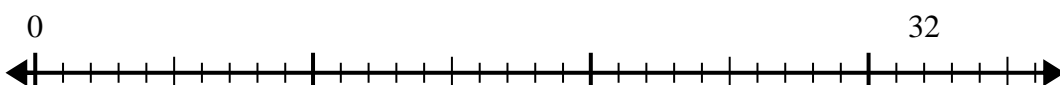
6. _____

7) $30 \div 6 =$



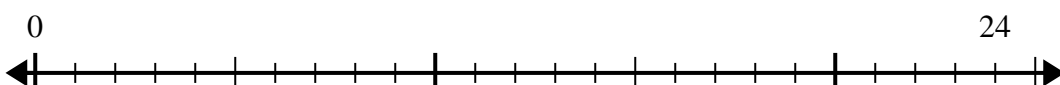
7. _____

8) $32 \div 4 =$



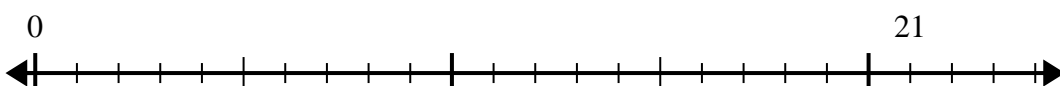
8. _____

9) $24 \div 4 =$



9. _____

10) $21 \div 7 =$



10. _____

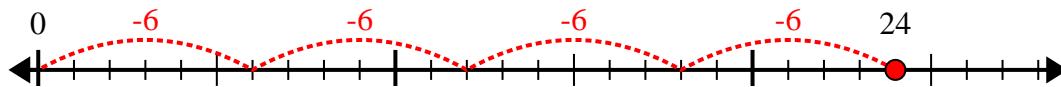


Utilisez la droite numérique pour résoudre le problème de division.

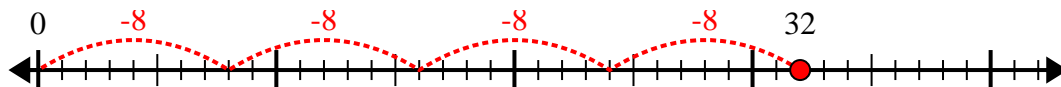
1) $20 \div 5 =$



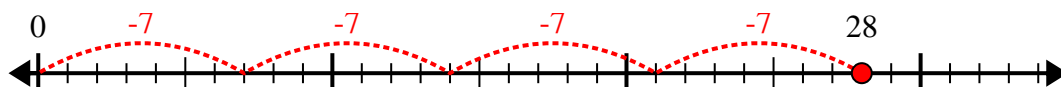
2) $24 \div 6 =$



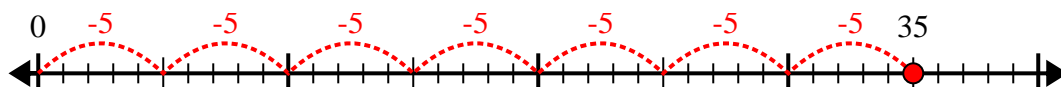
3) $32 \div 8 =$



4) $28 \div 7 =$



5) $35 \div 5 =$



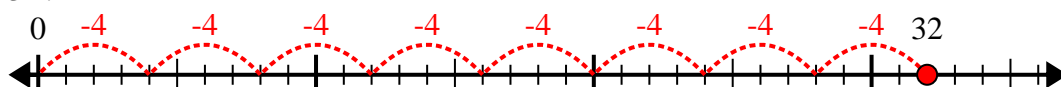
6) $28 \div 4 =$



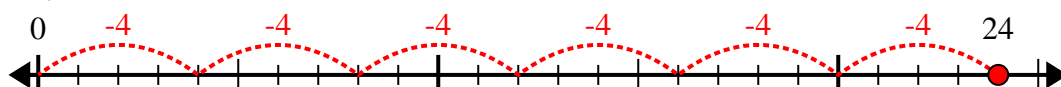
7) $30 \div 6 =$



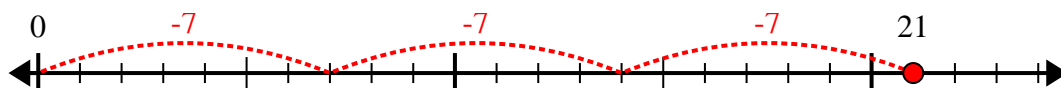
8) $32 \div 4 =$



9) $24 \div 4 =$



10) $21 \div 7 =$



Réponses

1. 4

2. 4

3. 4

4. 4

5. 7

6. 7

7. 5

8. 8

9. 6

10. 3