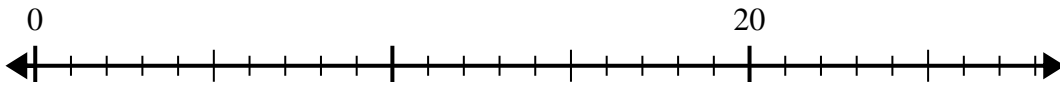




Utilisez la droite numérique pour résoudre le problème de division.

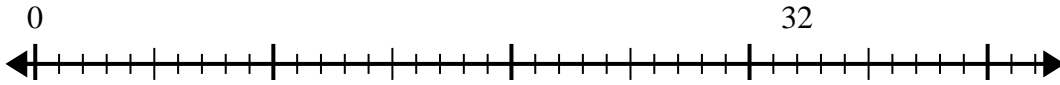
Réponses

1) $20 \div 4 =$



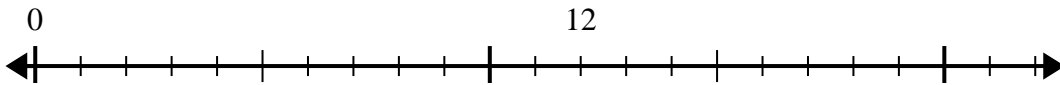
1. _____

2) $32 \div 8 =$



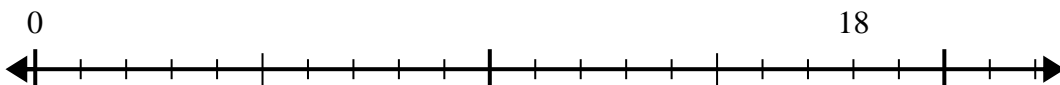
2. _____

3) $12 \div 4 =$



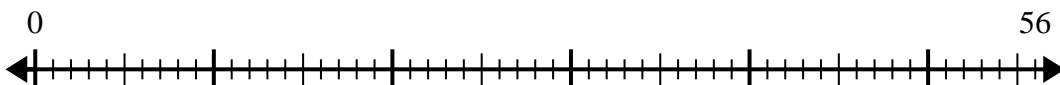
3. _____

4) $18 \div 6 =$



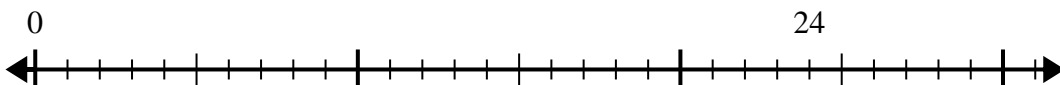
4. _____

5) $56 \div 8 =$



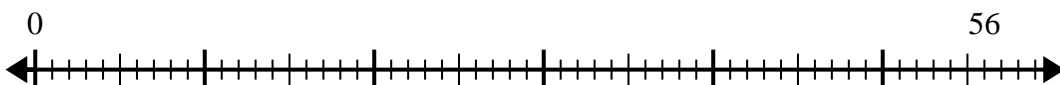
5. _____

6) $24 \div 8 =$



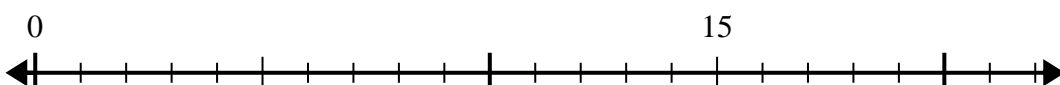
6. _____

7) $56 \div 7 =$



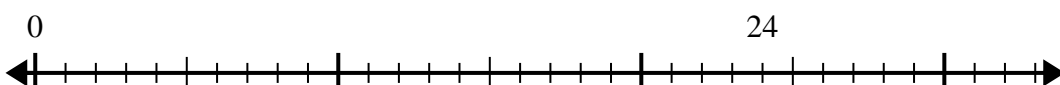
7. _____

8) $15 \div 5 =$



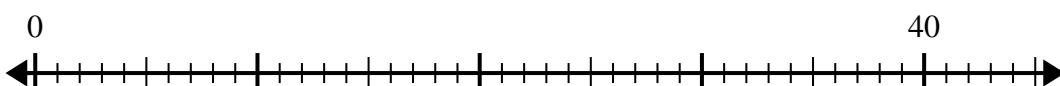
8. _____

9) $24 \div 4 =$



9. _____

10) $40 \div 5 =$

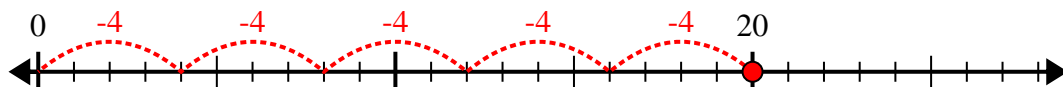


10. _____

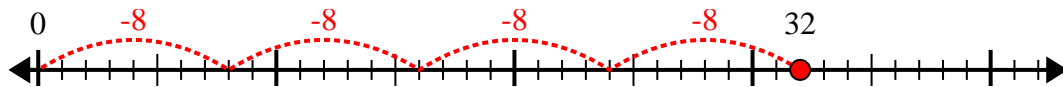


Utilisez la droite numérique pour résoudre le problème de division.

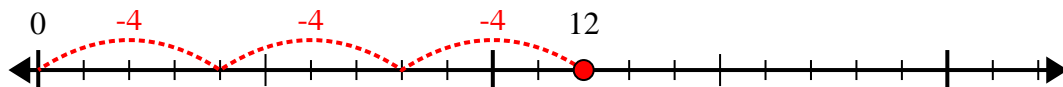
1) $20 \div 4 =$



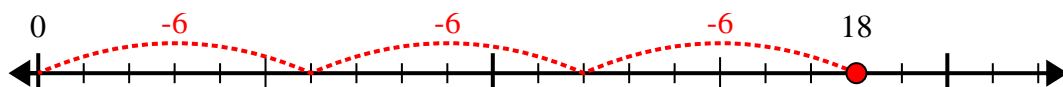
2) $32 \div 8 =$



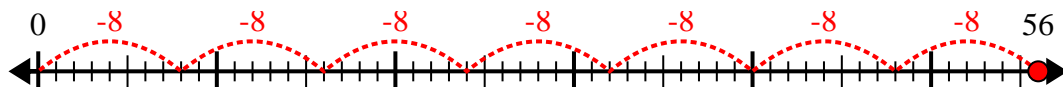
3) $12 \div 4 =$



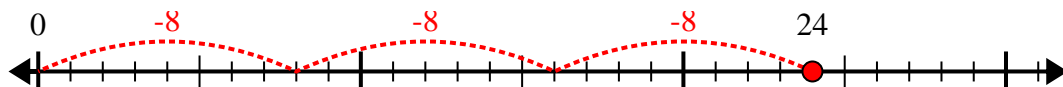
4) $18 \div 6 =$



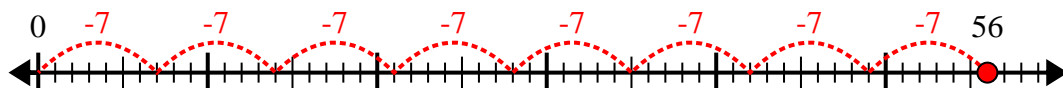
5) $56 \div 8 =$



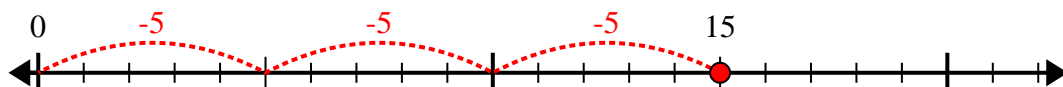
6) $24 \div 8 =$



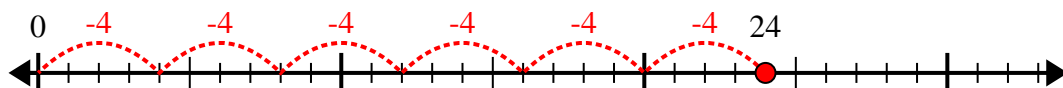
7) $56 \div 7 =$



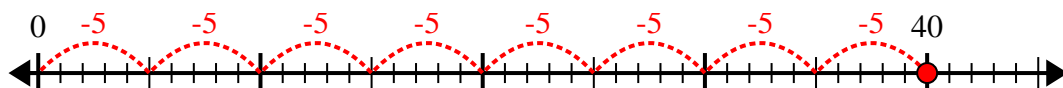
8) $15 \div 5 =$



9) $24 \div 4 =$



10) $40 \div 5 =$



Réponses

1. 5

2. 4

3. 3

4. 3

5. 7

6. 3

7. 8

8. 3

9. 6

10. 8