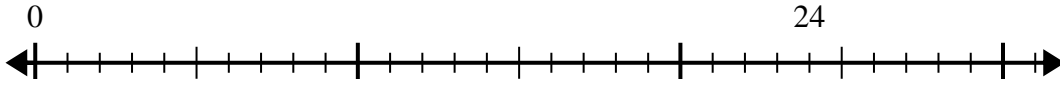




Utilisez la droite numérique pour résoudre le problème de division.

**Réponses**

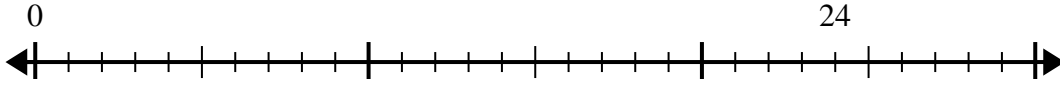
1)  $24 \div 8 =$   
0



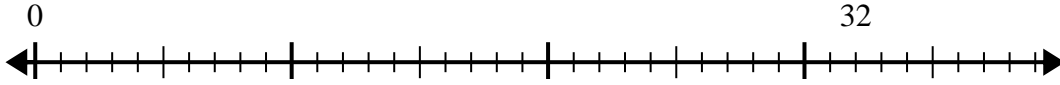
2)  $56 \div 8 =$   
0



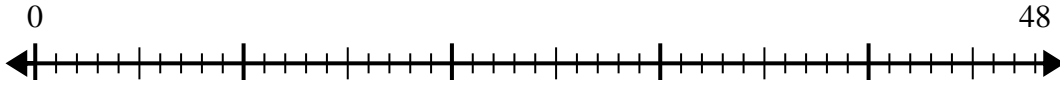
3)  $24 \div 4 =$   
0



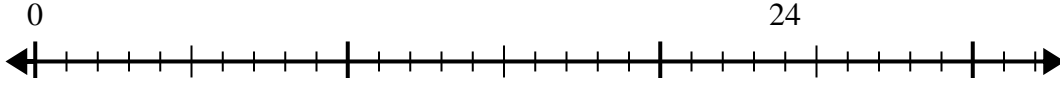
4)  $32 \div 4 =$   
0



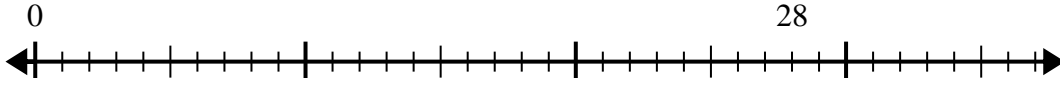
5)  $48 \div 8 =$   
0



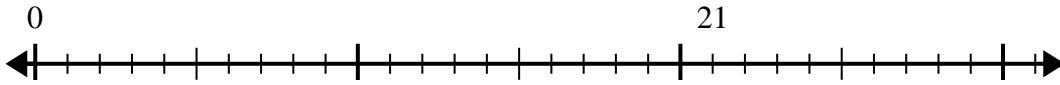
6)  $24 \div 6 =$   
0



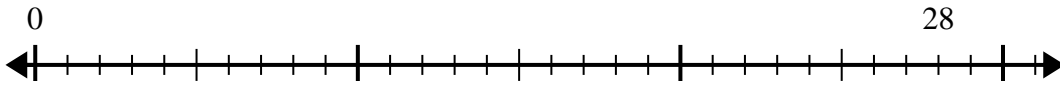
7)  $28 \div 4 =$   
0



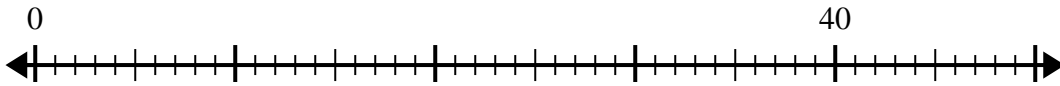
8)  $21 \div 7 =$   
0



9)  $28 \div 7 =$   
0



10)  $40 \div 5 =$   
0

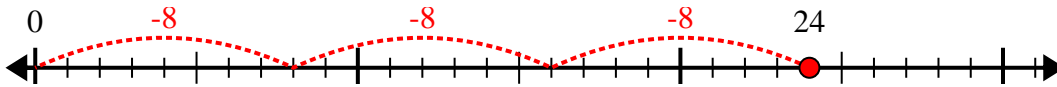


1. \_\_\_\_\_
2. \_\_\_\_\_
3. \_\_\_\_\_
4. \_\_\_\_\_
5. \_\_\_\_\_
6. \_\_\_\_\_
7. \_\_\_\_\_
8. \_\_\_\_\_
9. \_\_\_\_\_
10. \_\_\_\_\_

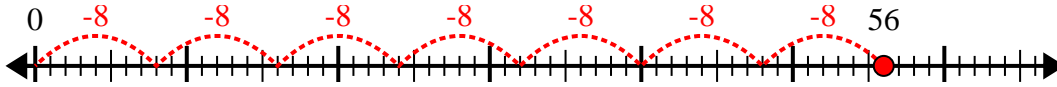


Utilisez la droite numérique pour résoudre le problème de division.

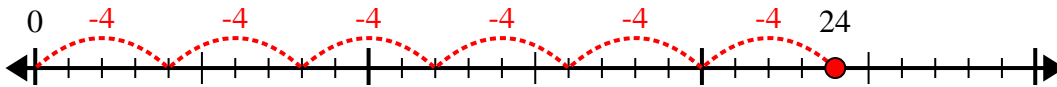
1)  $24 \div 8 =$



2)  $56 \div 8 =$



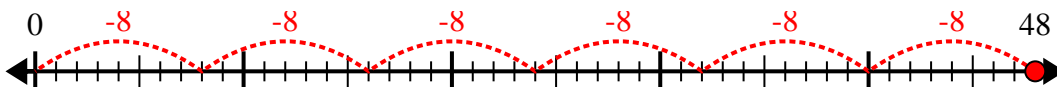
3)  $24 \div 4 =$



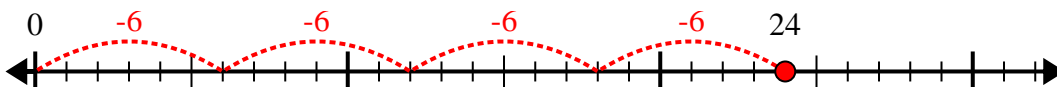
4)  $32 \div 4 =$



5)  $48 \div 8 =$



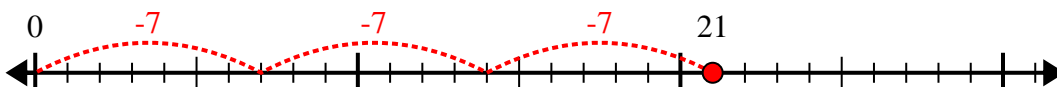
6)  $24 \div 6 =$



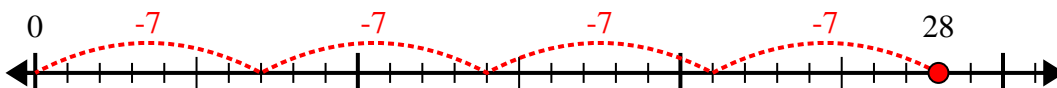
7)  $28 \div 4 =$



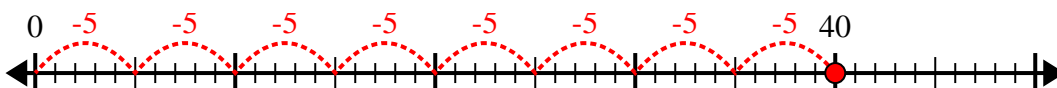
8)  $21 \div 7 =$



9)  $28 \div 7 =$



10)  $40 \div 5 =$



**Réponses**

1. 3

2. 7

3. 6

4. 8

5. 6

6. 4

7. 7

8. 3

9. 4

10. 8