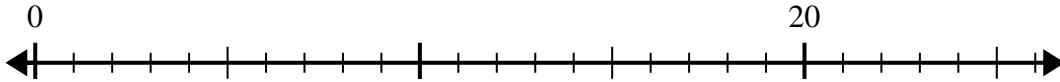




Utilisez la droite numérique pour résoudre le problème de division.

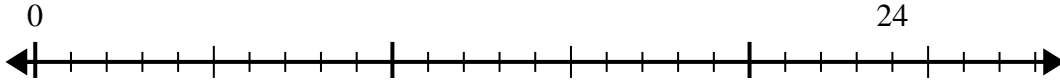
Réponses

1) $20 \div 5 =$
0



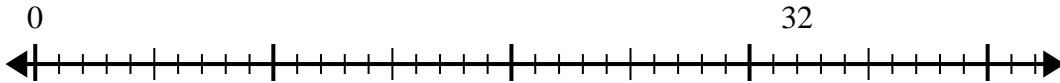
1. _____

2) $24 \div 6 =$
0



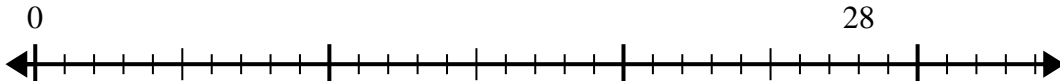
2. _____

3) $32 \div 8 =$
0



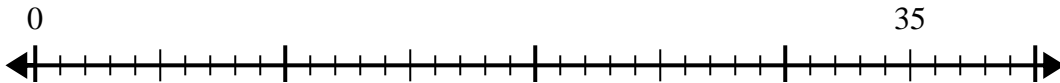
3. _____

4) $28 \div 7 =$
0



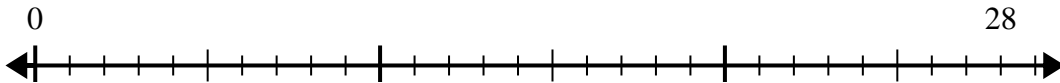
4. _____

5) $35 \div 5 =$
0



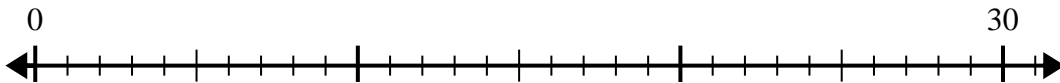
5. _____

6) $28 \div 4 =$
0



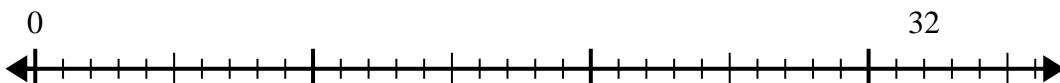
6. _____

7) $30 \div 6 =$
0



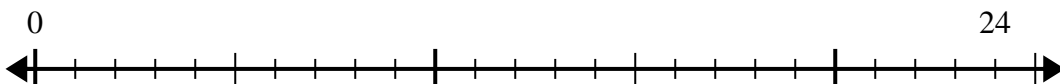
7. _____

8) $32 \div 4 =$
0



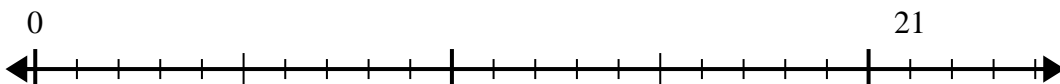
8. _____

9) $24 \div 4 =$
0



9. _____

10) $21 \div 7 =$
0

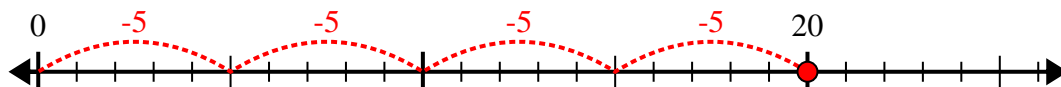


10. _____

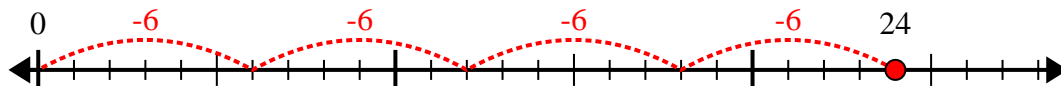


Utilisez la droite numérique pour résoudre le problème de division.

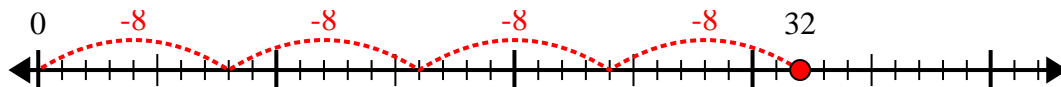
1) $20 \div 5 =$



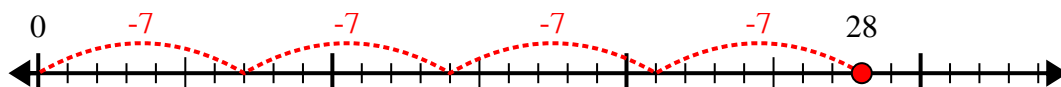
2) $24 \div 6 =$



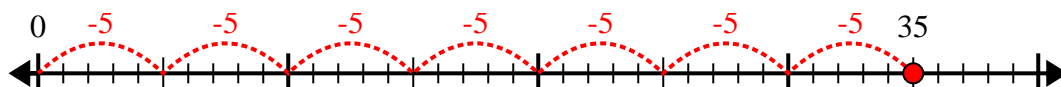
3) $32 \div 8 =$



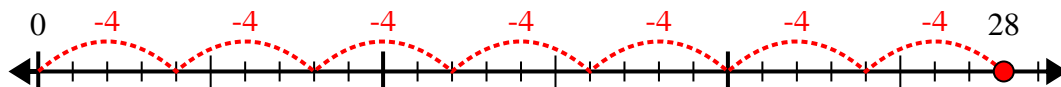
4) $28 \div 7 =$



5) $35 \div 5 =$



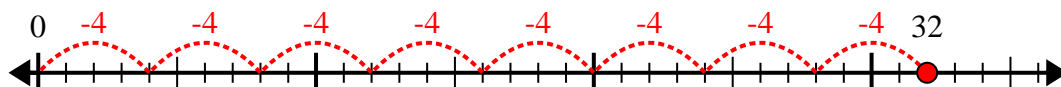
6) $28 \div 4 =$



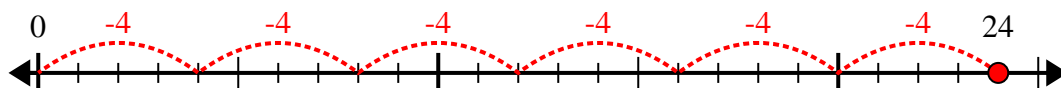
7) $30 \div 6 =$



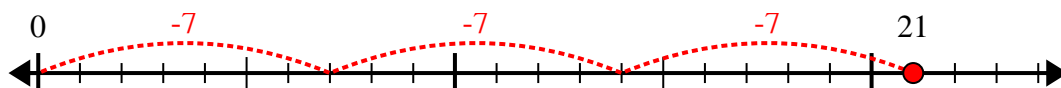
8) $32 \div 4 =$



9) $24 \div 4 =$



10) $21 \div 7 =$



Réponses

1. 4

2. 4

3. 4

4. 4

5. 7

6. 7

7. 5

8. 8

9. 6

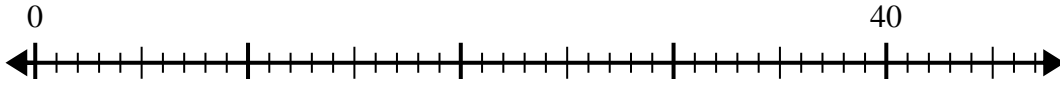
10. 3



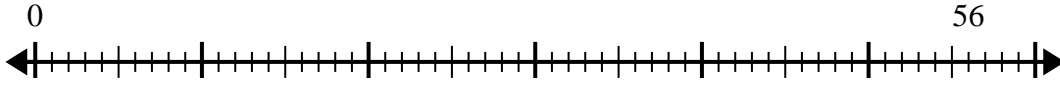
Utilisez la droite numérique pour résoudre le problème de division.

Réponses

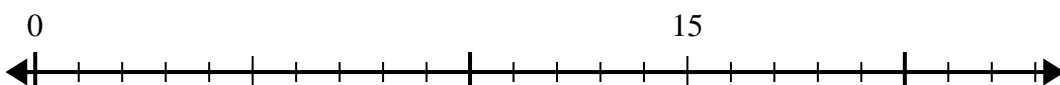
1) $40 \div 5 =$
0



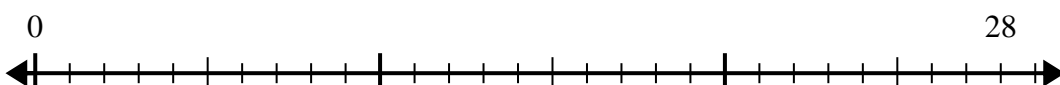
2) $56 \div 7 =$
0



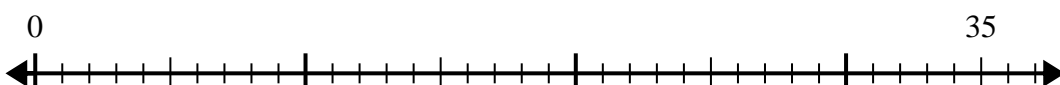
3) $15 \div 5 =$
0



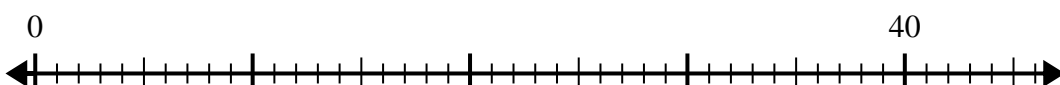
4) $28 \div 4 =$
0



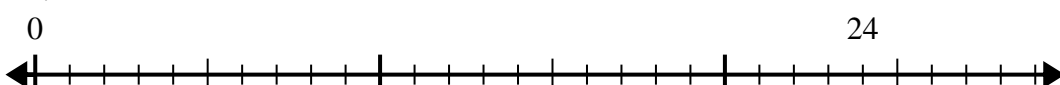
5) $35 \div 7 =$
0



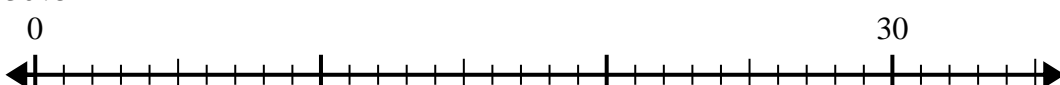
6) $40 \div 8 =$
0



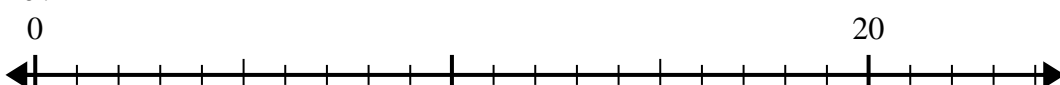
7) $24 \div 4 =$
0



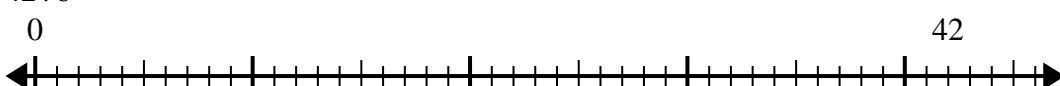
8) $30 \div 5 =$
0



9) $20 \div 4 =$
0



10) $42 \div 6 =$
0

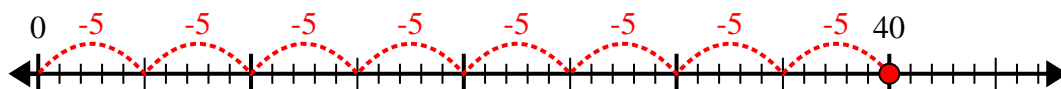


- 1. _____
- 2. _____
- 3. _____
- 4. _____
- 5. _____
- 6. _____
- 7. _____
- 8. _____
- 9. _____
- 10. _____

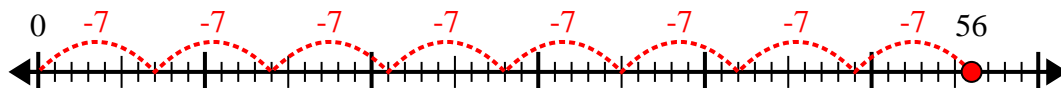


Utilisez la droite numérique pour résoudre le problème de division.

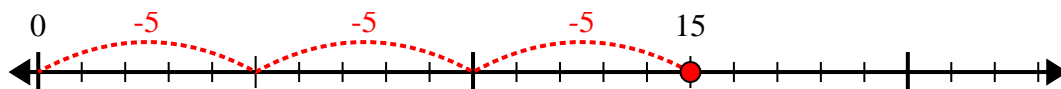
1) $40 \div 5 =$



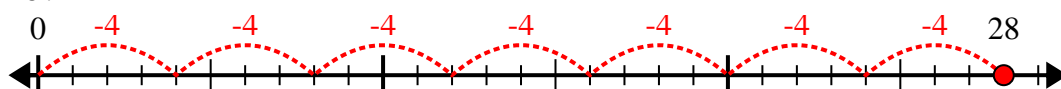
2) $56 \div 7 =$



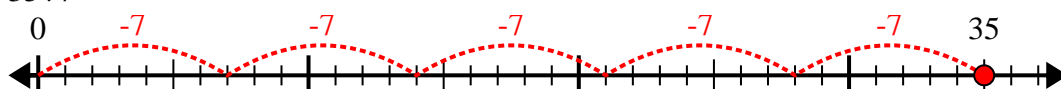
3) $15 \div 5 =$



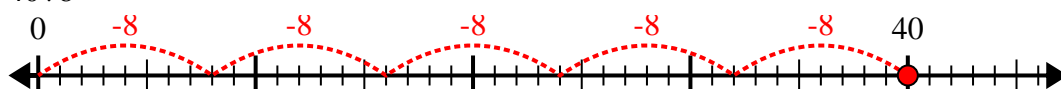
4) $28 \div 4 =$



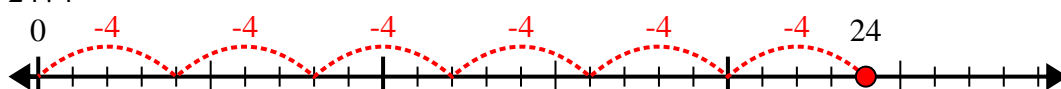
5) $35 \div 7 =$



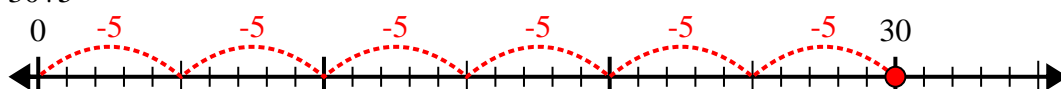
6) $40 \div 8 =$



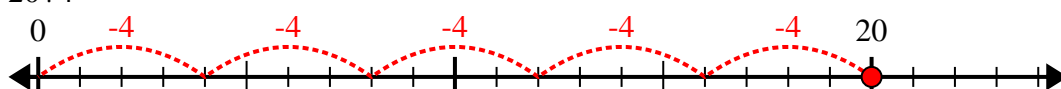
7) $24 \div 4 =$



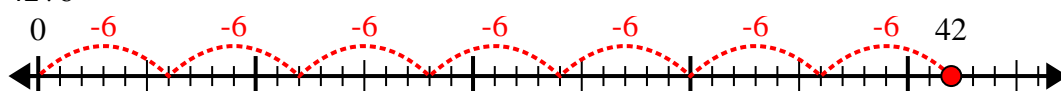
8) $30 \div 5 =$



9) $20 \div 4 =$



10) $42 \div 6 =$



Réponses

1. 8

2. 8

3. 3

4. 7

5. 5

6. 5

7. 6

8. 6

9. 5

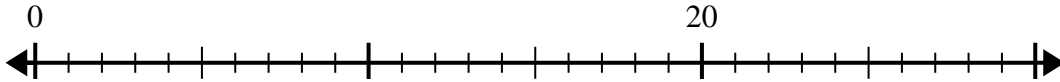
10. 7



Utilisez la droite numérique pour résoudre le problème de division.

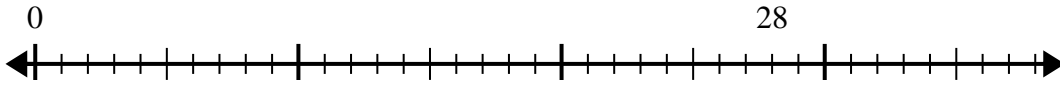
Réponses

1) $20 \div 5 =$



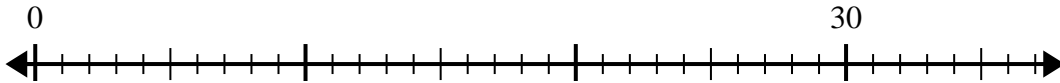
1. _____

2) $28 \div 4 =$



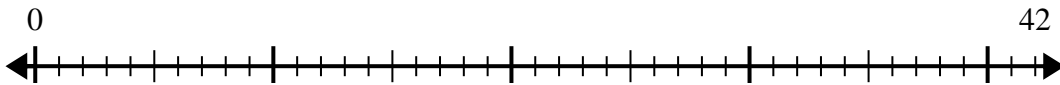
2. _____

3) $30 \div 6 =$



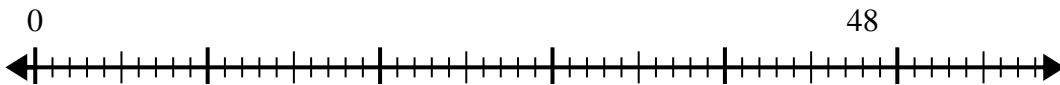
3. _____

4) $42 \div 6 =$



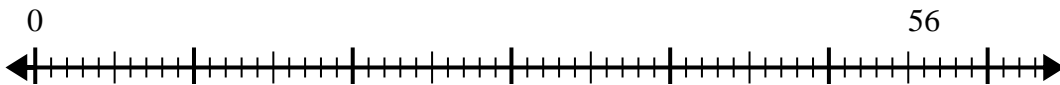
4. _____

5) $48 \div 6 =$



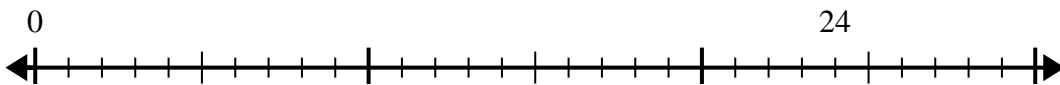
5. _____

6) $56 \div 8 =$



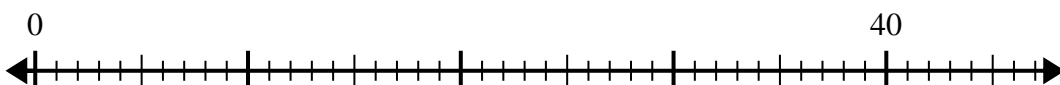
6. _____

7) $24 \div 6 =$



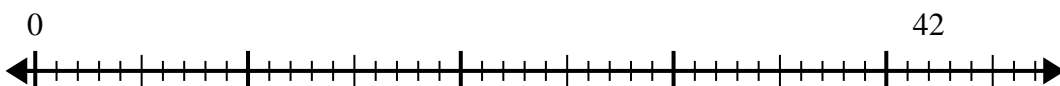
7. _____

8) $40 \div 8 =$



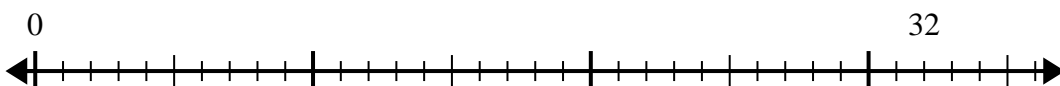
8. _____

9) $42 \div 7 =$



9. _____

10) $32 \div 4 =$

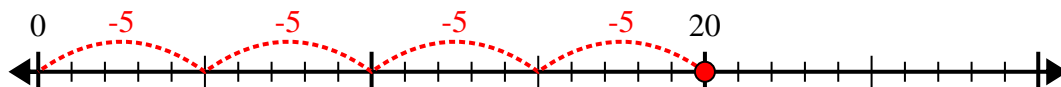


10. _____

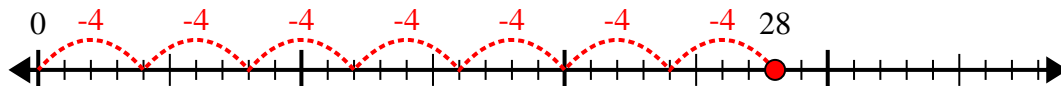


Utilisez la droite numérique pour résoudre le problème de division.

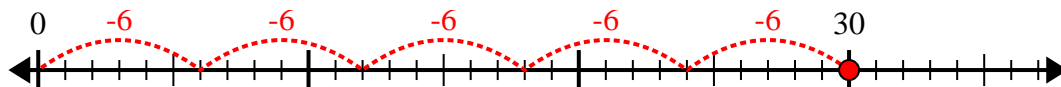
1) $20 \div 5 =$



2) $28 \div 4 =$



3) $30 \div 6 =$



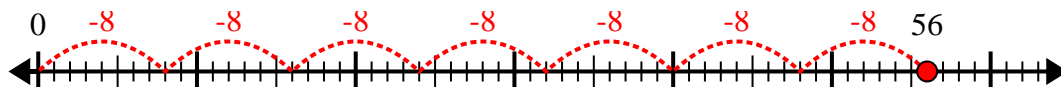
4) $42 \div 6 =$



5) $48 \div 6 =$



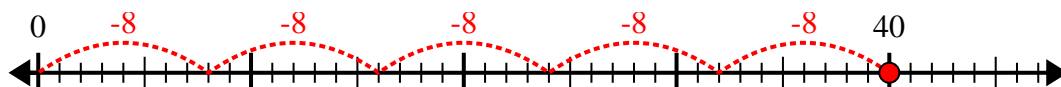
6) $56 \div 8 =$



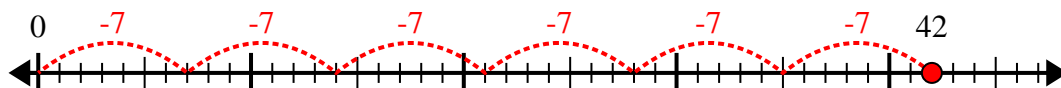
7) $24 \div 6 =$



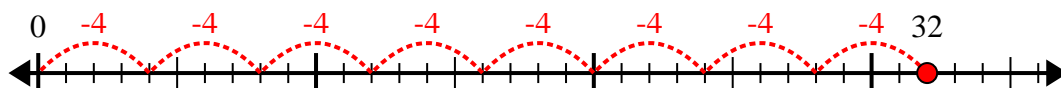
8) $40 \div 8 =$



9) $42 \div 7 =$



10) $32 \div 4 =$



Réponses

1. 4

2. 7

3. 5

4. 7

5. 8

6. 7

7. 4

8. 5

9. 6

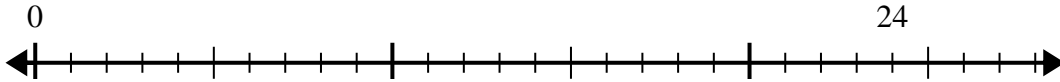
10. 8



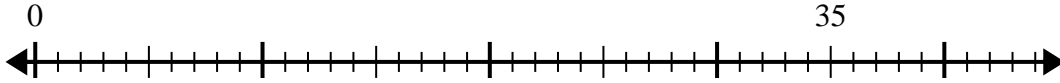
Utilisez la droite numérique pour résoudre le problème de division.

Réponses

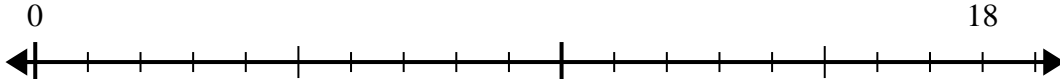
1) $24 \div 6 =$
0



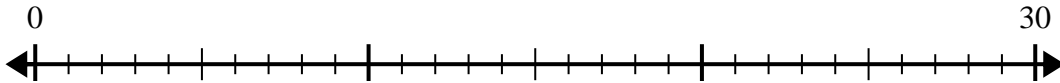
2) $35 \div 7 =$
0



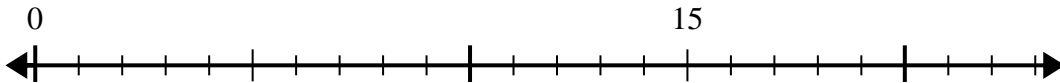
3) $18 \div 6 =$
0



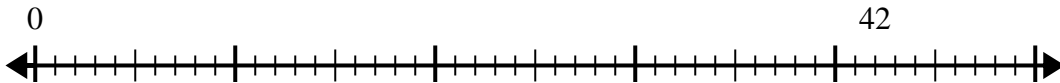
4) $30 \div 6 =$
0



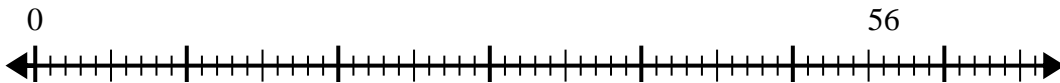
5) $15 \div 5 =$
0



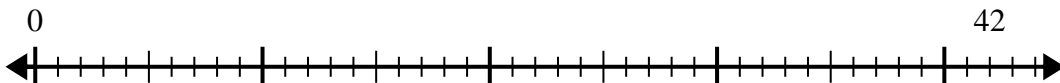
6) $42 \div 6 =$
0



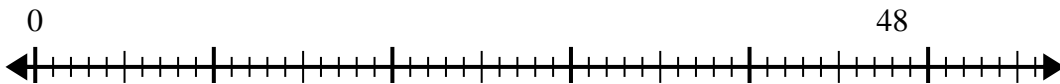
7) $56 \div 8 =$
0



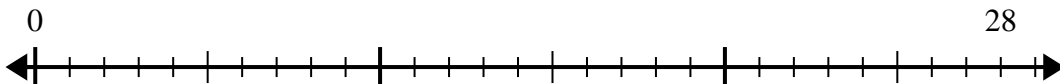
8) $42 \div 7 =$
0



9) $48 \div 8 =$
0



10) $28 \div 4 =$
0

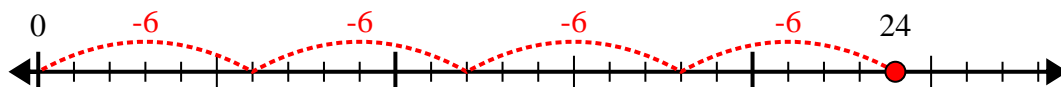


- 1. _____
- 2. _____
- 3. _____
- 4. _____
- 5. _____
- 6. _____
- 7. _____
- 8. _____
- 9. _____
- 10. _____

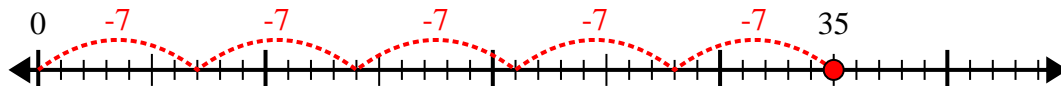


Utilisez la droite numérique pour résoudre le problème de division.

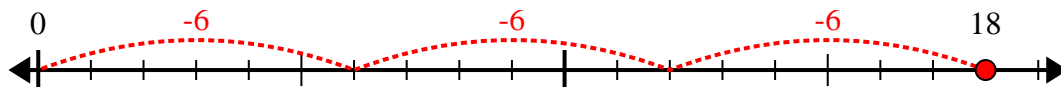
1) $24 \div 6 =$



2) $35 \div 7 =$



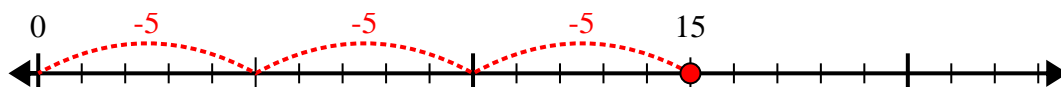
3) $18 \div 6 =$



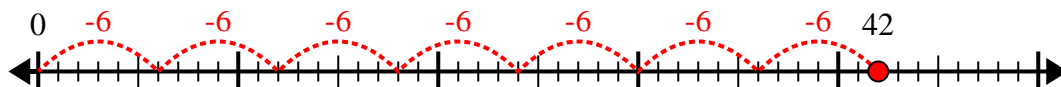
4) $30 \div 6 =$



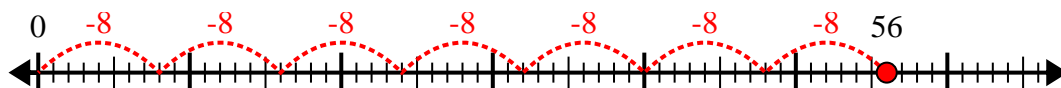
5) $15 \div 5 =$



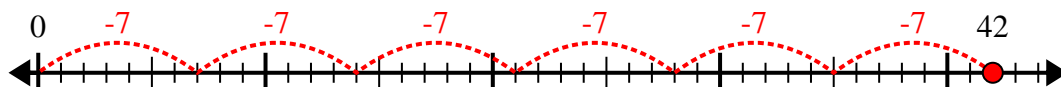
6) $42 \div 6 =$



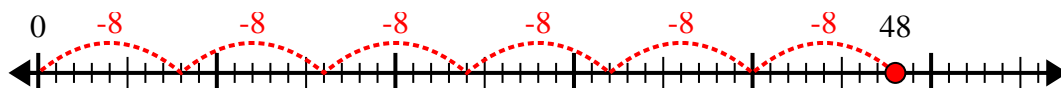
7) $56 \div 8 =$



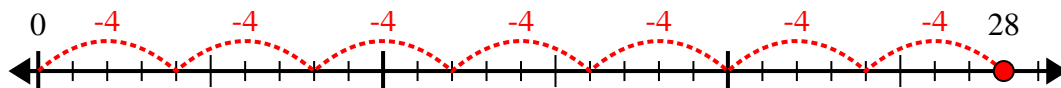
8) $42 \div 7 =$



9) $48 \div 8 =$



10) $28 \div 4 =$



Réponses

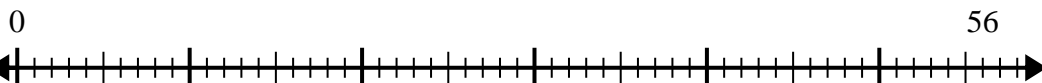
1. 4
2. 5
3. 3
4. 5
5. 3
6. 7
7. 7
8. 6
9. 6
10. 7



Utilisez la droite numérique pour résoudre le problème de division.

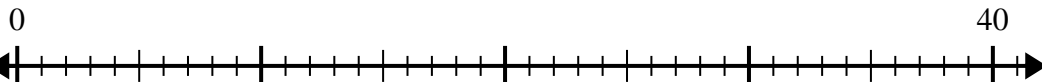
Réponses

1) $56 \div 7 =$



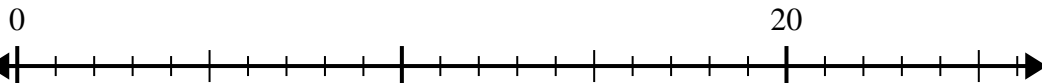
1. _____

2) $40 \div 5 =$



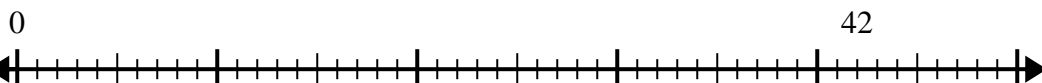
2. _____

3) $20 \div 4 =$



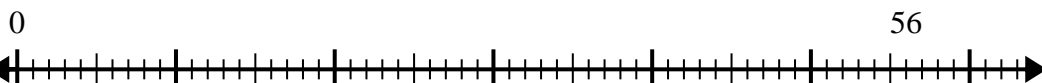
3. _____

4) $42 \div 7 =$



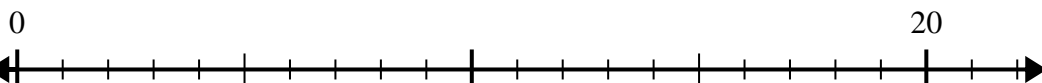
4. _____

5) $56 \div 8 =$



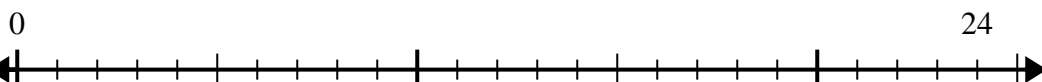
5. _____

6) $20 \div 5 =$



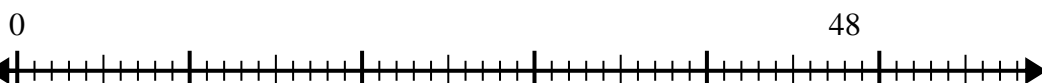
6. _____

7) $24 \div 4 =$



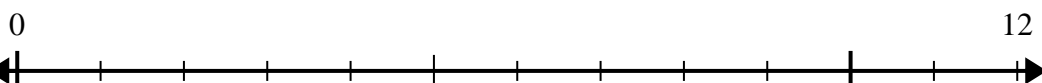
7. _____

8) $48 \div 8 =$



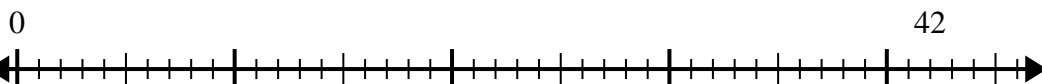
8. _____

9) $12 \div 4 =$



9. _____

10) $42 \div 6 =$

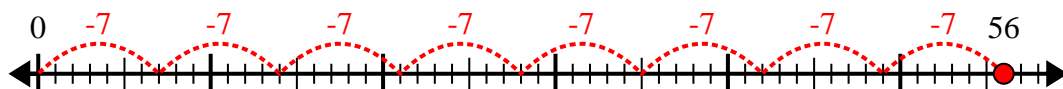


10. _____

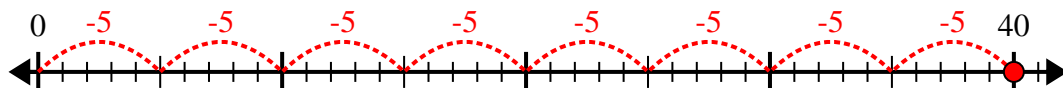


Utilisez la droite numérique pour résoudre le problème de division.

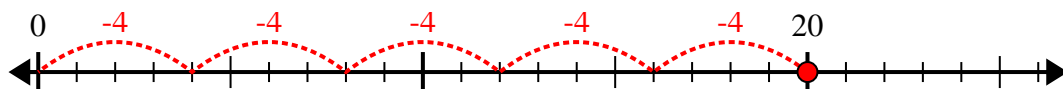
1) $56 \div 7 =$



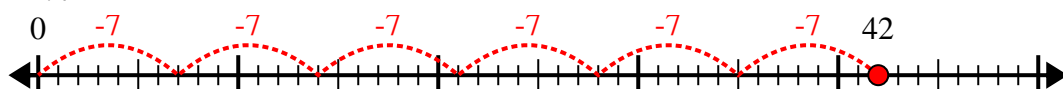
2) $40 \div 5 =$



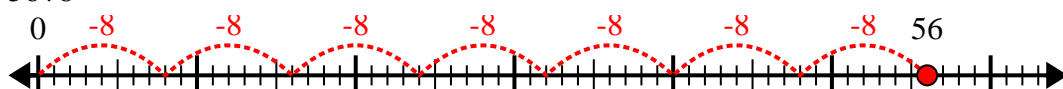
3) $20 \div 4 =$



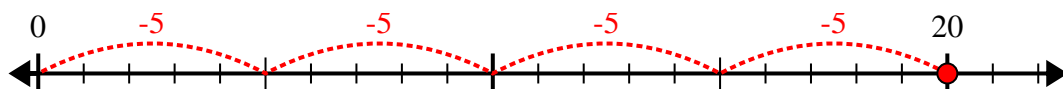
4) $42 \div 7 =$



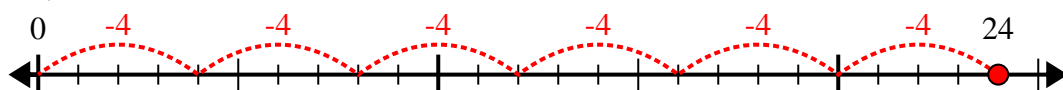
5) $56 \div 8 =$



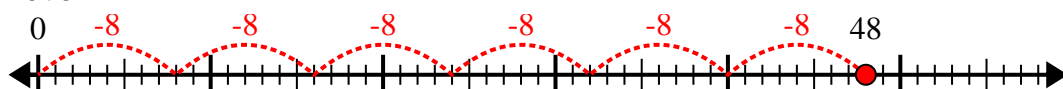
6) $20 \div 5 =$



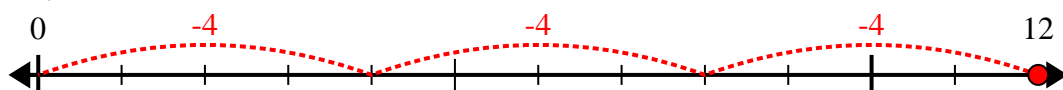
7) $24 \div 4 =$



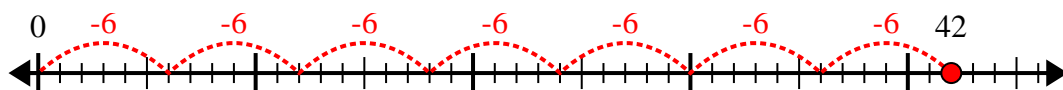
8) $48 \div 8 =$



9) $12 \div 4 =$



10) $42 \div 6 =$



Réponses

1. 8

2. 8

3. 5

4. 6

5. 7

6. 4

7. 6

8. 6

9. 3

10. 7

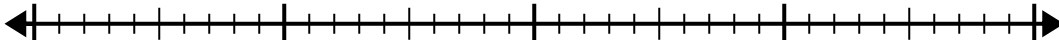


Utilisez la droite numérique pour résoudre le problème de division.

Réponses

1) $30 \div 6 =$
0

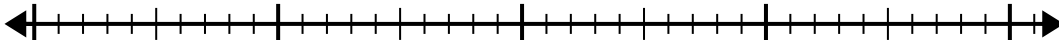
30



1. _____

2) $32 \div 4 =$
0

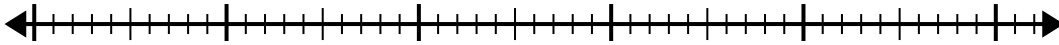
32



2. _____

3) $42 \div 7 =$
0

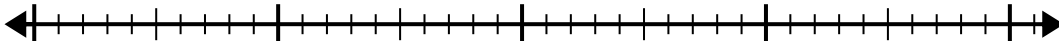
42



3. _____

4) $40 \div 5 =$
0

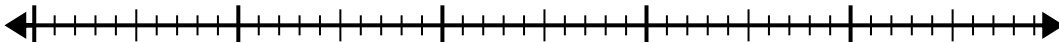
40



4. _____

5) $40 \div 8 =$
0

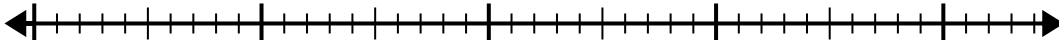
40



5. _____

6) $42 \div 6 =$
0

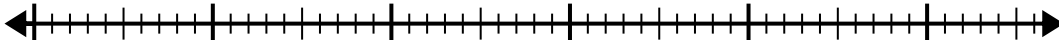
42



6. _____

7) $48 \div 6 =$
0

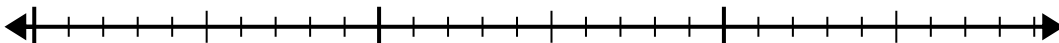
48



7. _____

8) $20 \div 4 =$
0

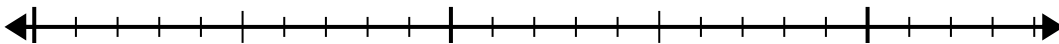
20



8. _____

9) $20 \div 5 =$
0

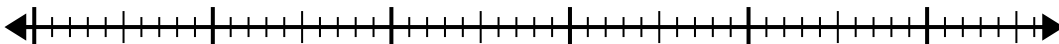
20



9. _____

10) $56 \div 8 =$
0

56

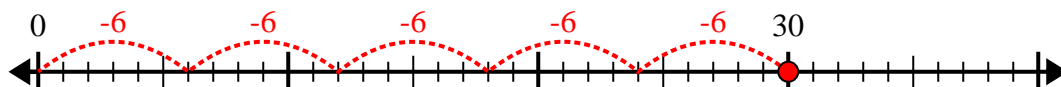


10. _____

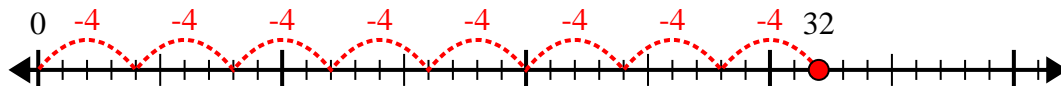


Utilisez la droite numérique pour résoudre le problème de division.

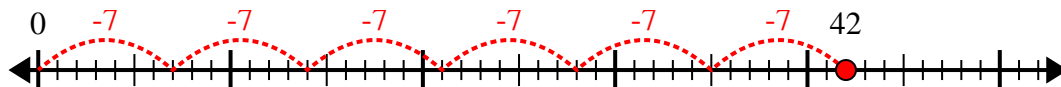
1) $30 \div 6 =$



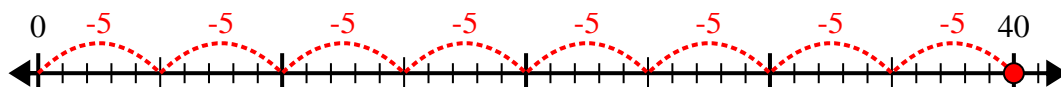
2) $32 \div 4 =$



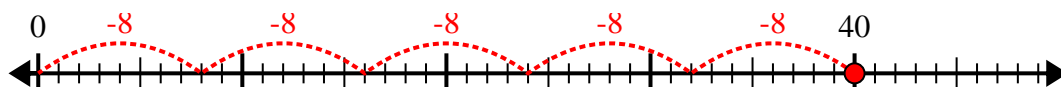
3) $42 \div 7 =$



4) $40 \div 5 =$



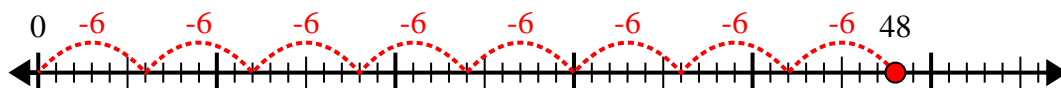
5) $40 \div 8 =$



6) $42 \div 6 =$



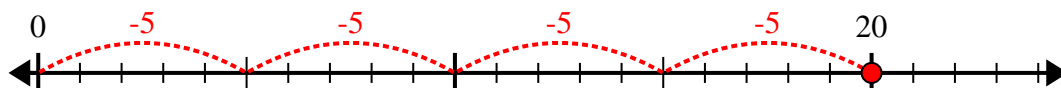
7) $48 \div 6 =$



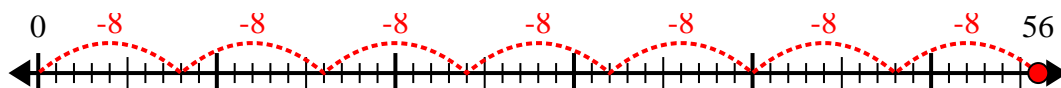
8) $20 \div 4 =$



9) $20 \div 5 =$



10) $56 \div 8 =$



Réponses

1. 5

2. 8

3. 6

4. 8

5. 5

6. 7

7. 8

8. 5

9. 4

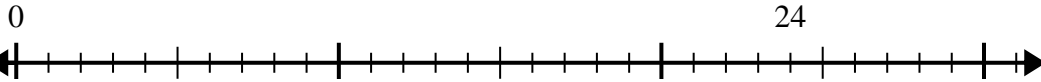
10. 7



Utilisez la droite numérique pour résoudre le problème de division.

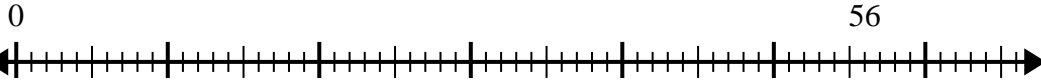
Réponses

1) $24 \div 8 =$



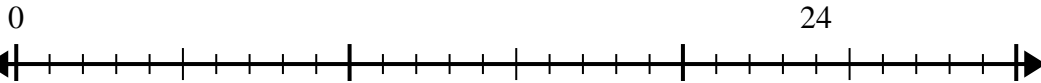
1. _____

2) $56 \div 8 =$



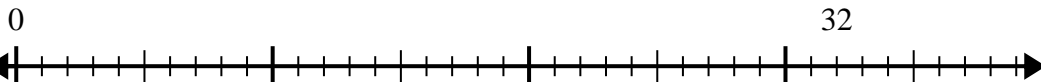
2. _____

3) $24 \div 4 =$



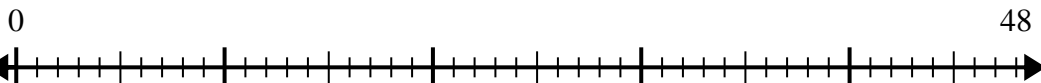
3. _____

4) $32 \div 4 =$



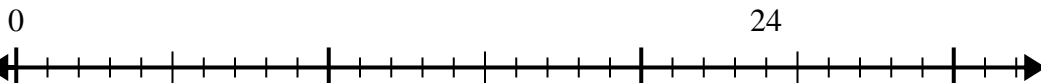
4. _____

5) $48 \div 8 =$



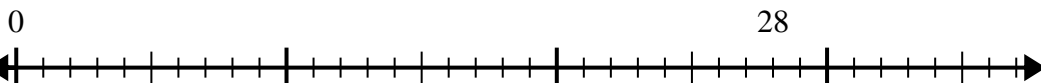
5. _____

6) $24 \div 6 =$



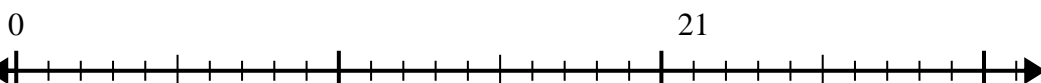
6. _____

7) $28 \div 4 =$



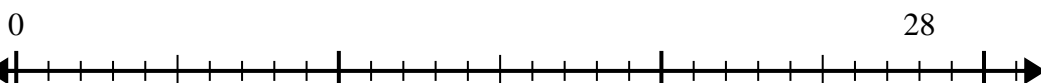
7. _____

8) $21 \div 7 =$



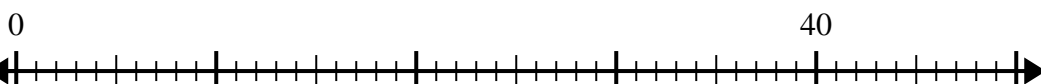
8. _____

9) $28 \div 7 =$



9. _____

10) $40 \div 5 =$

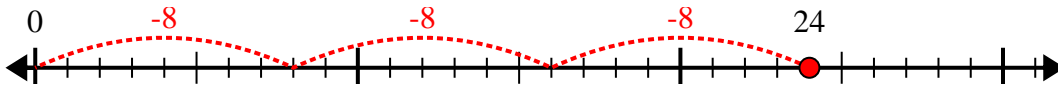


10. _____

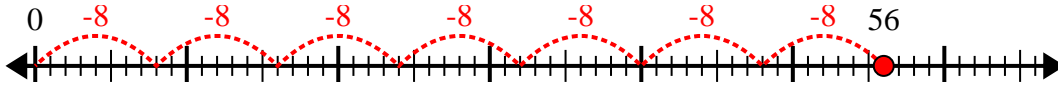


Utilisez la droite numérique pour résoudre le problème de division.

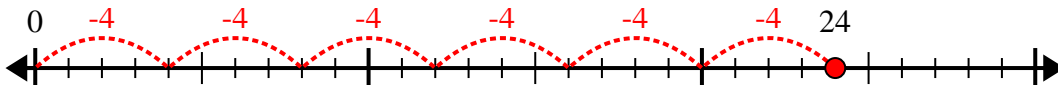
1) $24 \div 8 =$



2) $56 \div 8 =$



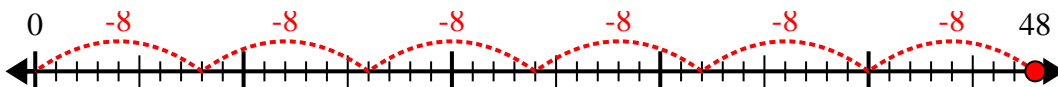
3) $24 \div 4 =$



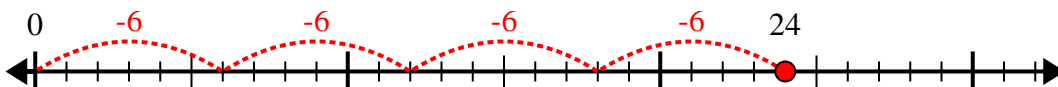
4) $32 \div 4 =$



5) $48 \div 8 =$



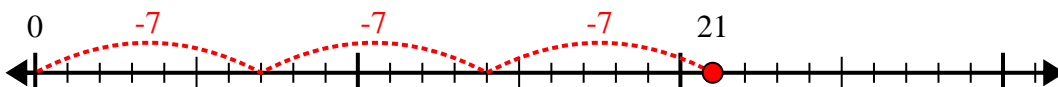
6) $24 \div 6 =$



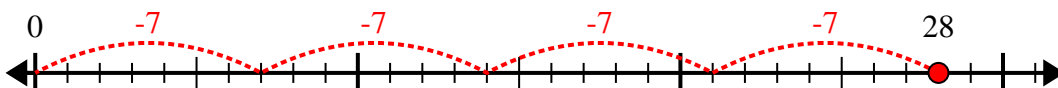
7) $28 \div 4 =$



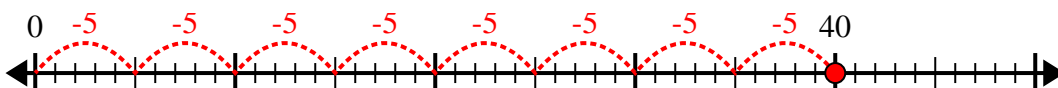
8) $21 \div 7 =$



9) $28 \div 7 =$



10) $40 \div 5 =$



Réponses

1. 3

2. 7

3. 6

4. 8

5. 6

6. 4

7. 7

8. 3

9. 4

10. 8

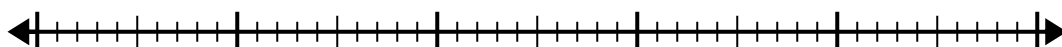


Utilisez la droite numérique pour résoudre le problème de division.

1) $40 \div 5 =$

0

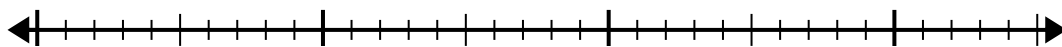
40



2) $28 \div 4 =$

0

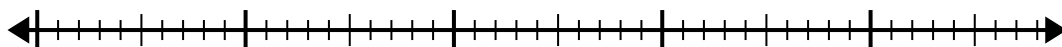
28



3) $42 \div 6 =$

0

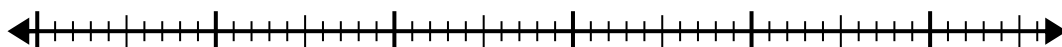
42



4) $56 \div 8 =$

0

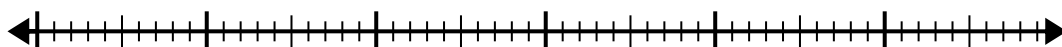
56



5) $56 \div 7 =$

0

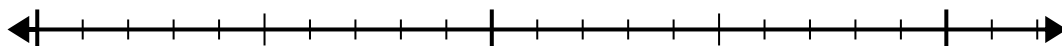
56



6) $20 \div 5 =$

0

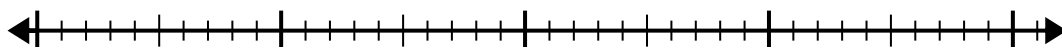
20



7) $35 \div 7 =$

0

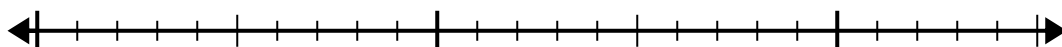
35



8) $24 \div 8 =$

0

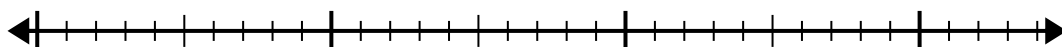
24



9) $30 \div 5 =$

0

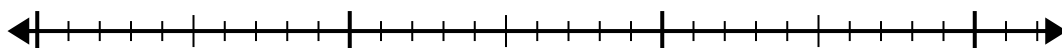
30



10) $32 \div 4 =$

0

32



Réponses

1. _____

2. _____

3. _____

4. _____

5. _____

6. _____

7. _____

8. _____

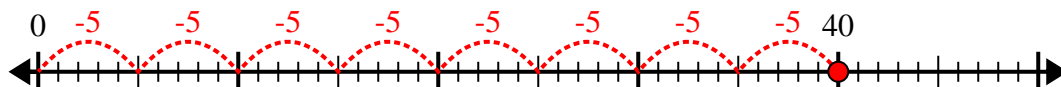
9. _____

10. _____

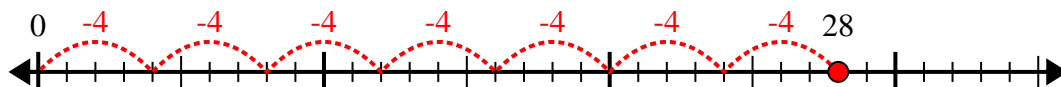


Utilisez la droite numérique pour résoudre le problème de division.

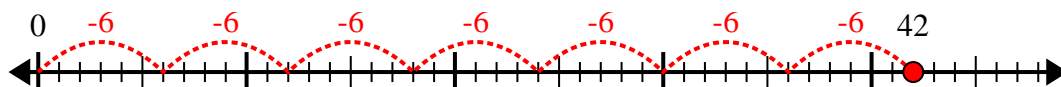
1) $40 \div 5 =$



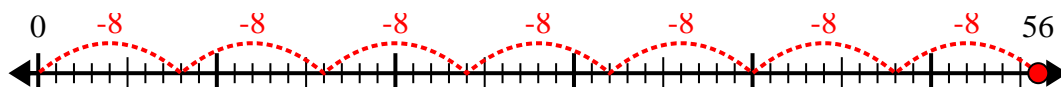
2) $28 \div 4 =$



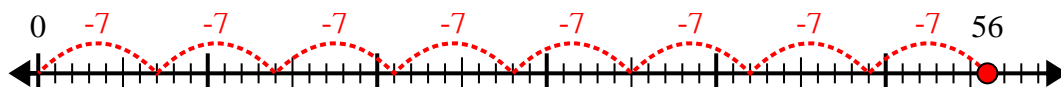
3) $42 \div 6 =$



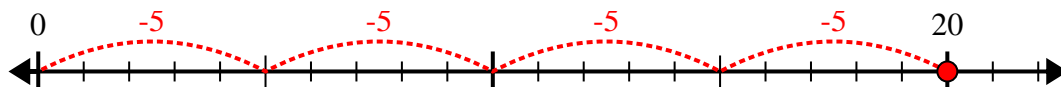
4) $56 \div 8 =$



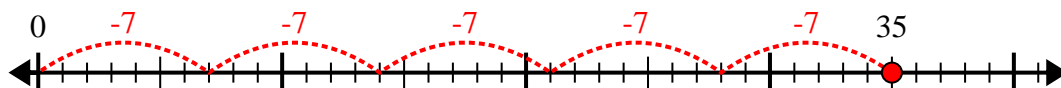
5) $56 \div 7 =$



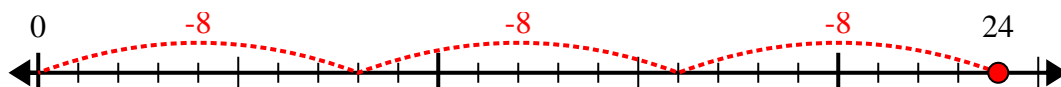
6) $20 \div 5 =$



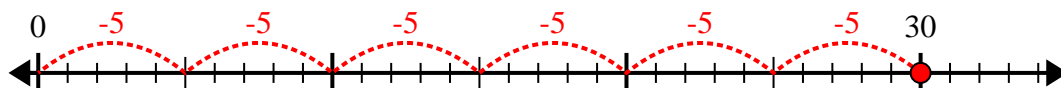
7) $35 \div 7 =$



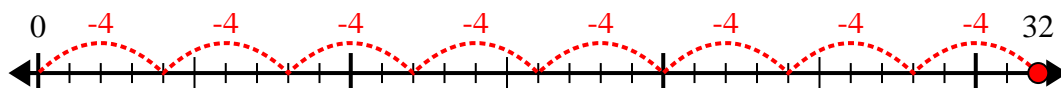
8) $24 \div 8 =$



9) $30 \div 5 =$



10) $32 \div 4 =$



Réponses

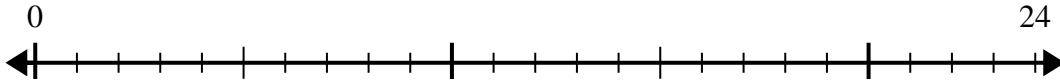
1. 8
2. 7
3. 7
4. 7
5. 8
6. 4
7. 5
8. 3
9. 6
10. 8



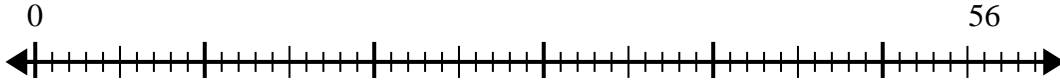
Utilisez la droite numérique pour résoudre le problème de division.

Réponses

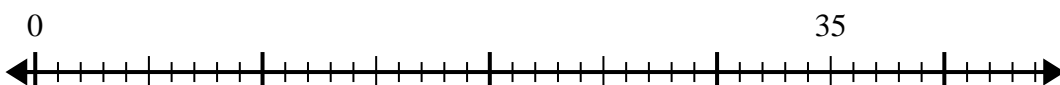
1) $24 \div 4 =$
0



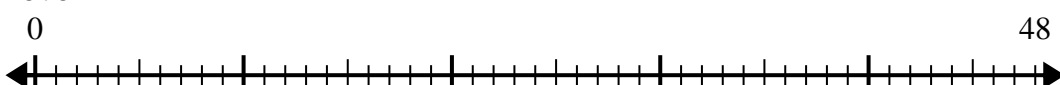
2) $56 \div 8 =$
0




3) $35 \div 5 =$
0



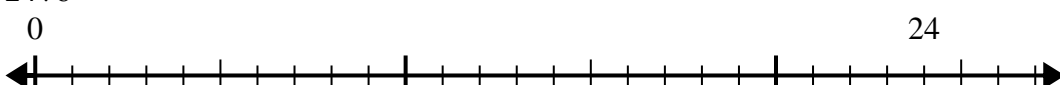
4) $48 \div 8 =$
0



5) $42 \div 6 =$
0



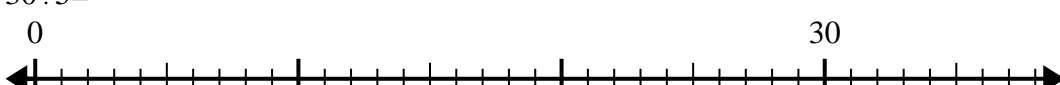
6) $24 \div 6 =$
0



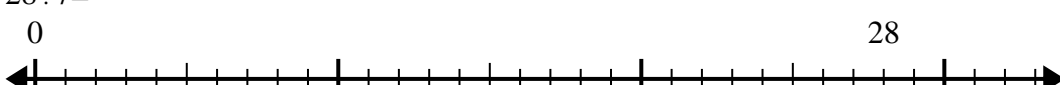
7) $48 \div 6 =$
0



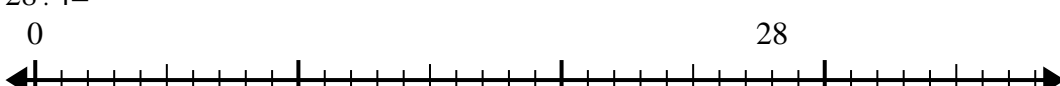
8) $30 \div 5 =$
0



9) $28 \div 7 =$
0



10) $28 \div 4 =$
0

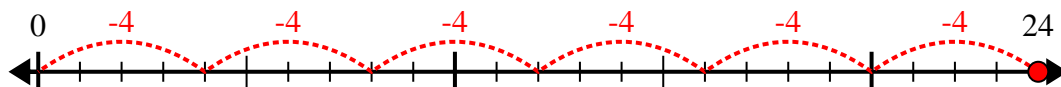


- 1. _____
- 2. _____
- 3. _____
- 4. _____
- 5. _____
- 6. _____
- 7. _____
- 8. _____
- 9. _____
- 10. _____

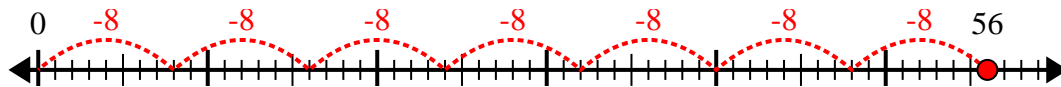


Utilisez la droite numérique pour résoudre le problème de division.

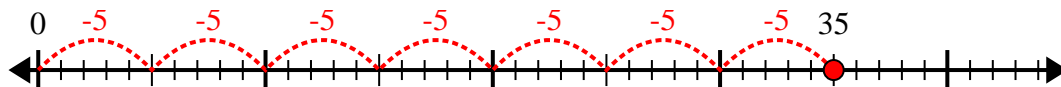
1) $24 \div 4 =$



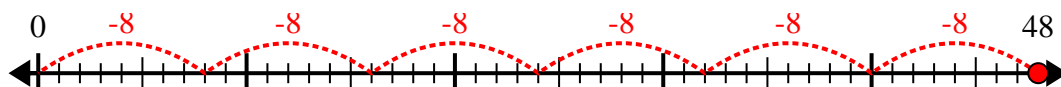
2) $56 \div 8 =$



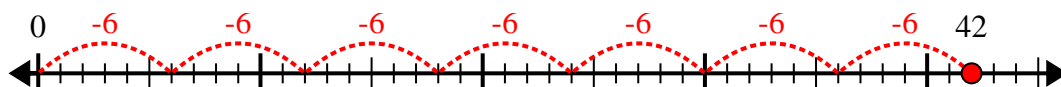
3) $35 \div 5 =$



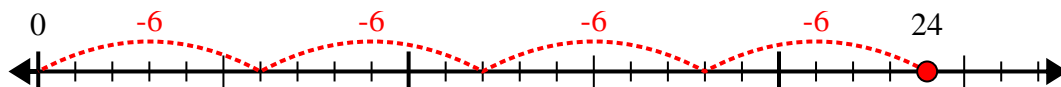
4) $48 \div 8 =$



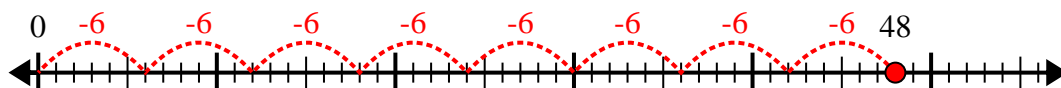
5) $42 \div 6 =$



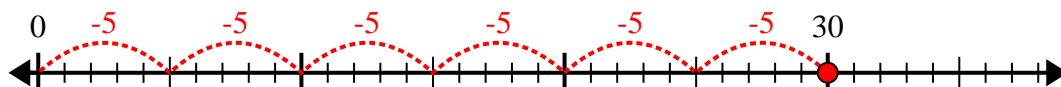
6) $24 \div 6 =$



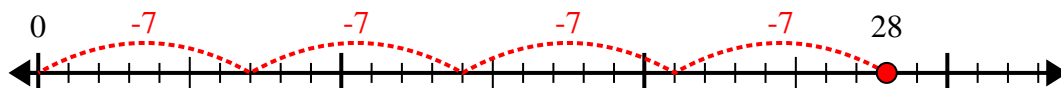
7) $48 \div 6 =$



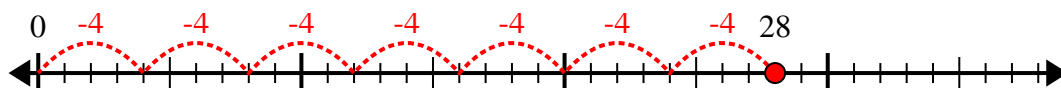
8) $30 \div 5 =$



9) $28 \div 7 =$



10) $28 \div 4 =$



Réponses

1. 6

2. 7

3. 7

4. 6

5. 7

6. 4

7. 8

8. 6

9. 4

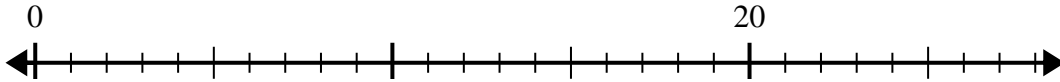
10. 7



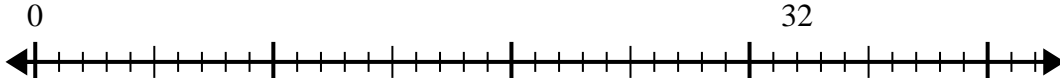
Utilisez la droite numérique pour résoudre le problème de division.

Réponses

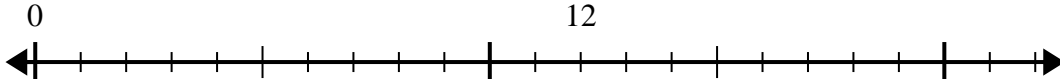
1) $20 \div 4 =$
0



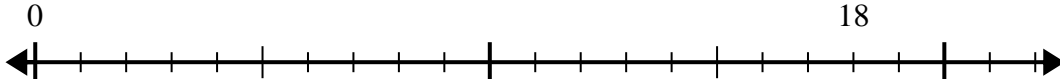
2) $32 \div 8 =$
0



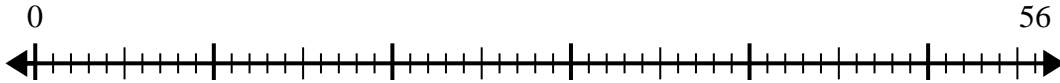
3) $12 \div 4 =$
0



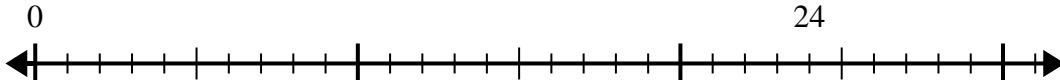
4) $18 \div 6 =$
0



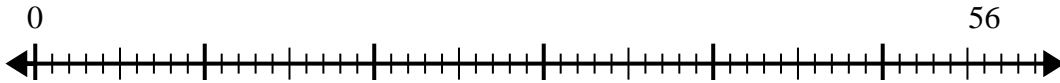
5) $56 \div 8 =$
0



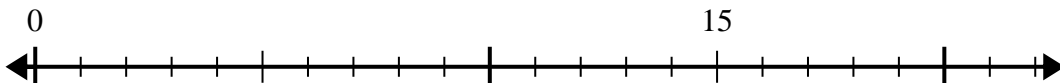
6) $24 \div 8 =$
0



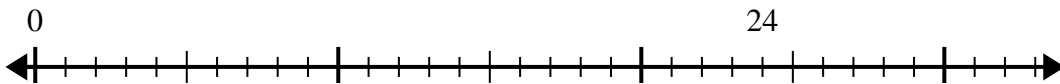
7) $56 \div 7 =$
0



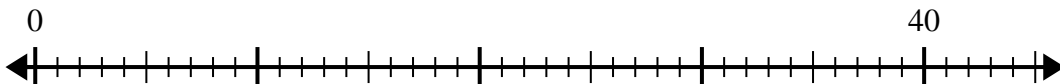
8) $15 \div 5 =$
0



9) $24 \div 4 =$
0



10) $40 \div 5 =$
0



- 1. _____
- 2. _____
- 3. _____
- 4. _____
- 5. _____
- 6. _____
- 7. _____
- 8. _____
- 9. _____
- 10. _____

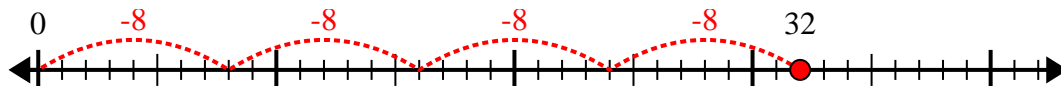


Utilisez la droite numérique pour résoudre le problème de division.

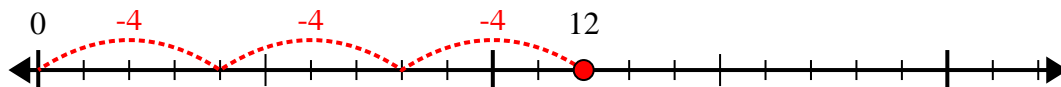
1) $20 \div 4 =$



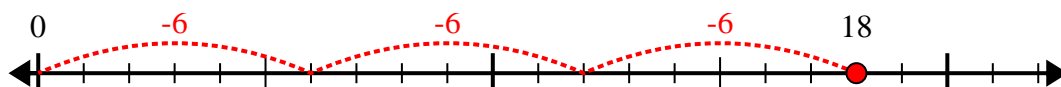
2) $32 \div 8 =$



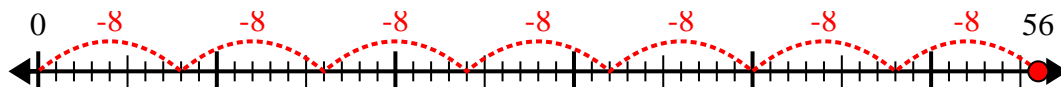
3) $12 \div 4 =$



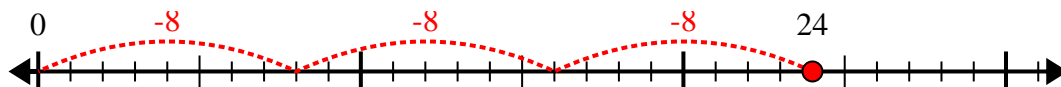
4) $18 \div 6 =$



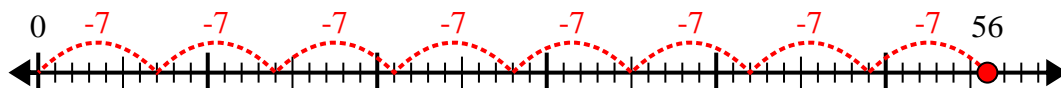
5) $56 \div 8 =$



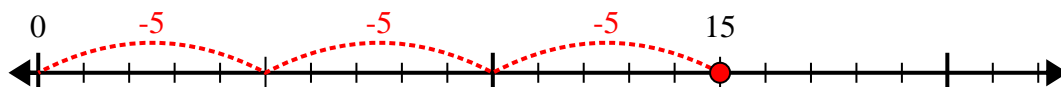
6) $24 \div 8 =$



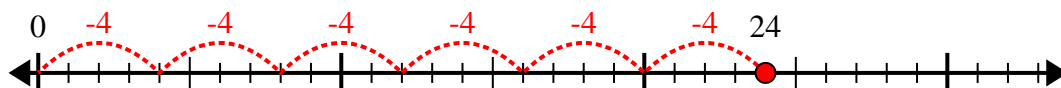
7) $56 \div 7 =$



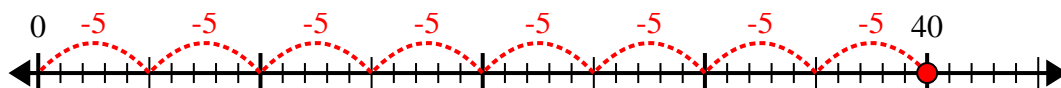
8) $15 \div 5 =$



9) $24 \div 4 =$



10) $40 \div 5 =$



Réponses

1. 5
2. 4
3. 3
4. 3
5. 7
6. 3
7. 8
8. 3
9. 6
10. 8