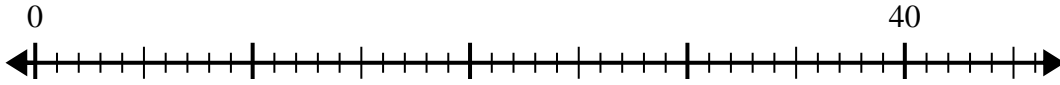




Utilisez la droite numérique pour résoudre le problème de division.

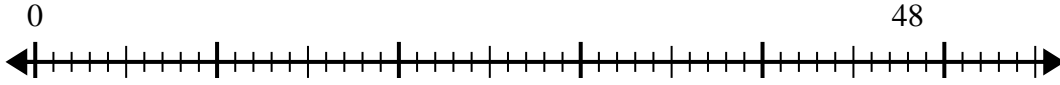
**Réponses**

1)  $40 \div 8 =$   
0



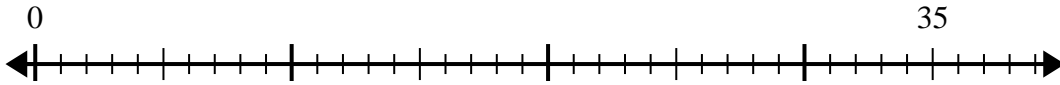
1. \_\_\_\_\_

2)  $48 \div 6 =$   
0



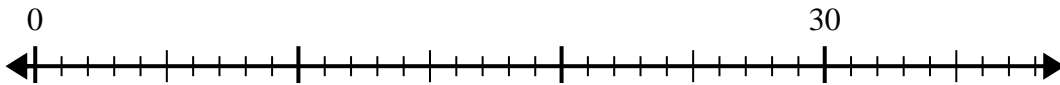
2. \_\_\_\_\_

3)  $35 \div 7 =$   
0



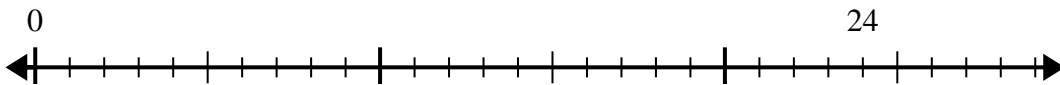
3. \_\_\_\_\_

4)  $30 \div 6 =$   
0



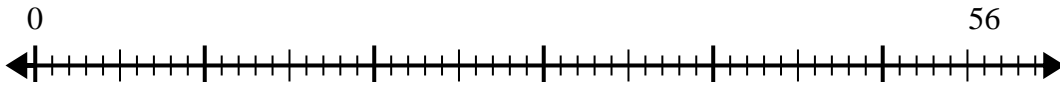
4. \_\_\_\_\_

5)  $24 \div 4 =$   
0



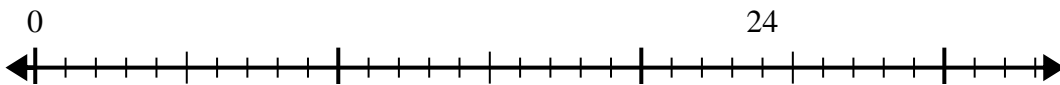
5. \_\_\_\_\_

6)  $56 \div 7 =$   
0



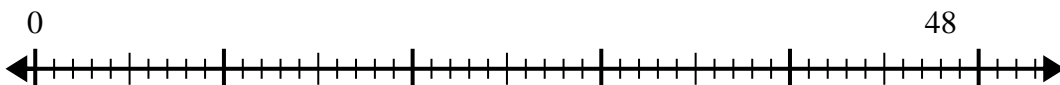
6. \_\_\_\_\_

7)  $24 \div 8 =$   
0



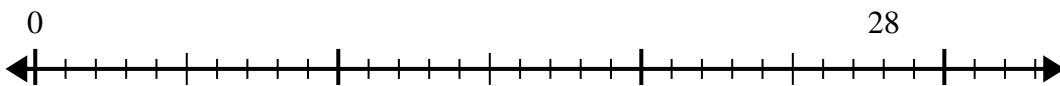
7. \_\_\_\_\_

8)  $48 \div 8 =$   
0



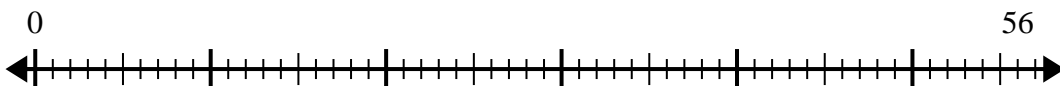
8. \_\_\_\_\_

9)  $28 \div 7 =$   
0



9. \_\_\_\_\_

10)  $56 \div 8 =$   
0

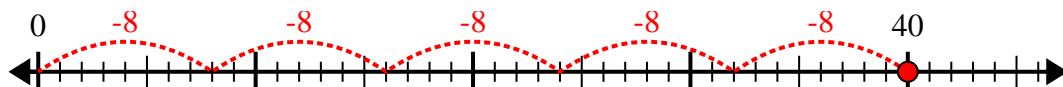


10. \_\_\_\_\_



Utilisez la droite numérique pour résoudre le problème de division.

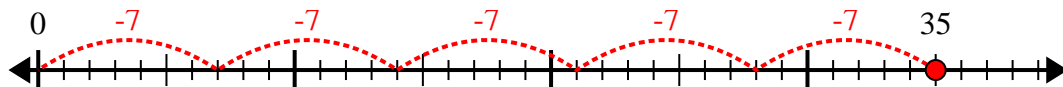
1)  $40 \div 8 =$



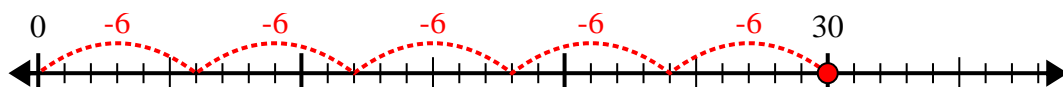
2)  $48 \div 6 =$



3)  $35 \div 7 =$



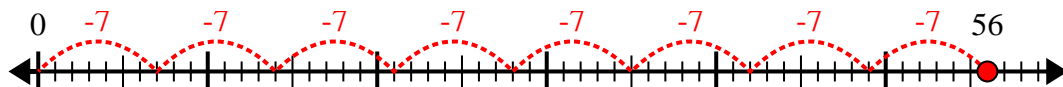
4)  $30 \div 6 =$



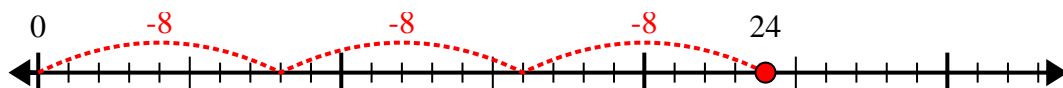
5)  $24 \div 4 =$



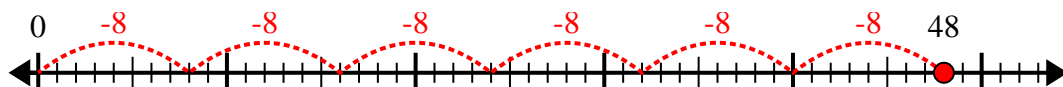
6)  $56 \div 7 =$



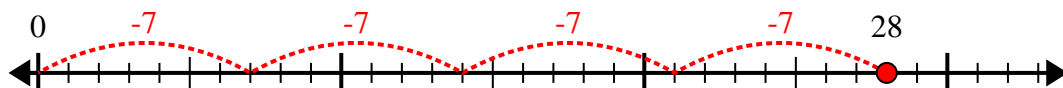
7)  $24 \div 8 =$



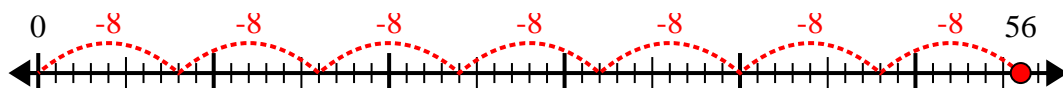
8)  $48 \div 8 =$



9)  $28 \div 7 =$



10)  $56 \div 8 =$



**Réponses**

1. 5

2. 8

3. 5

4. 5

5. 6

6. 8

7. 3

8. 6

9. 4

10. 7