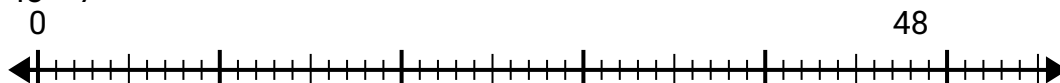


**Utilisez la droite numérique pour résoudre le problème de division.****Réponses**

1) $51 \div 8 =$
0



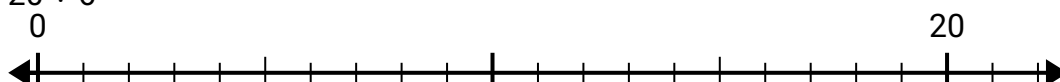
2) $48 \div 7 =$
0



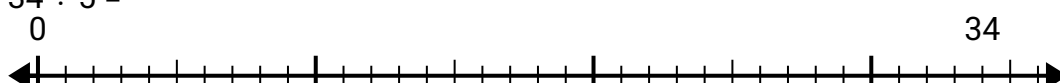
3) $58 \div 7 =$
0



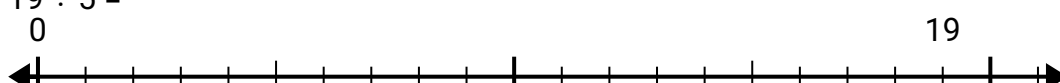
4) $20 \div 6 =$
0




5) $34 \div 5 =$
0



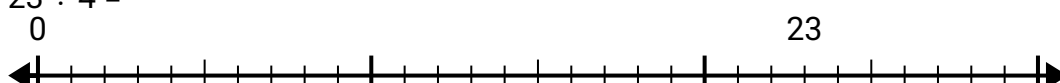
6) $19 \div 5 =$
0




7) $22 \div 5 =$
0



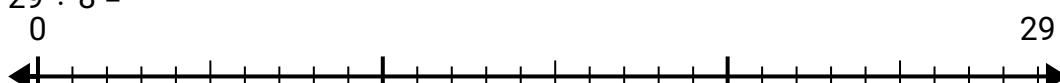
8) $23 \div 4 =$
0



9) $15 \div 4 =$
0



10) $29 \div 8 =$
0



1. _____

2. _____

3. _____

4. _____

5. _____

6. _____

7. _____

8. _____

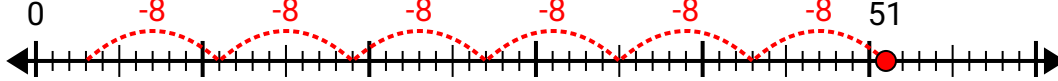
9. _____

10. _____

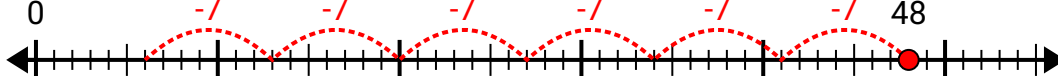


Utilisez la droite numérique pour résoudre le problème de division.

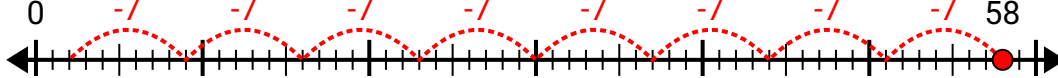
1) $51 \div 8 =$



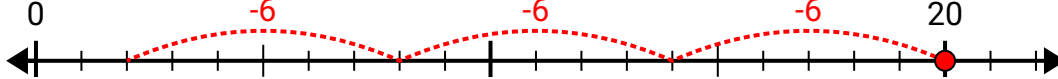
2) $48 \div 7 =$



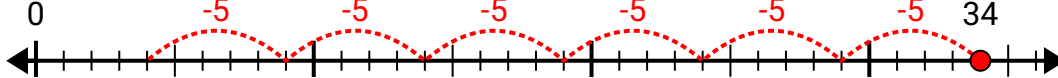
3) $58 \div 7 =$



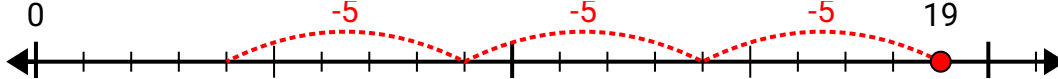
4) $20 \div 6 =$



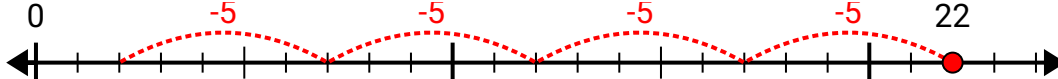
5) $34 \div 5 =$



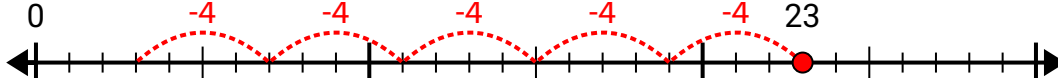
6) $19 \div 5 =$



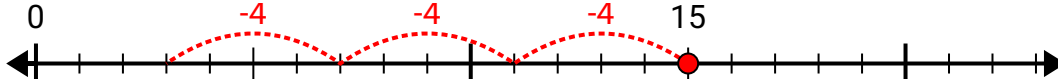
7) $22 \div 5 =$



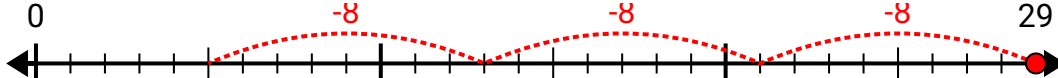
8) $23 \div 4 =$



9) $15 \div 4 =$



10) $29 \div 8 =$



Réponses

1. **6r3**2. **6r6**3. **8r2**4. **3r2**5. **6r4**6. **3r4**7. **4r2**8. **5r3**9. **3r3**10. **3r5**