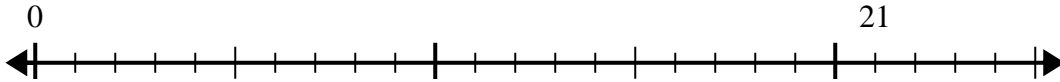




Utilisez la droite numérique pour résoudre le problème de division.

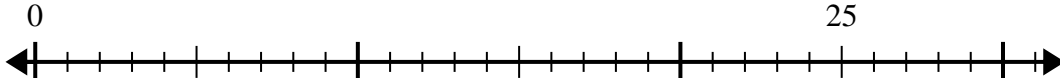
Réponses

1) $21 \div 5 =$
0



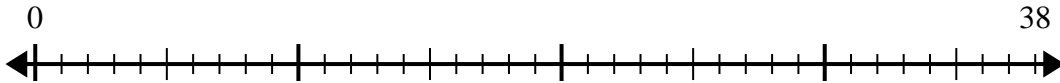
1. _____

2) $25 \div 6 =$
0



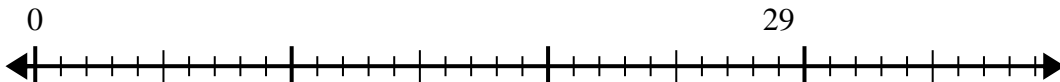
2. _____

3) $38 \div 8 =$
0



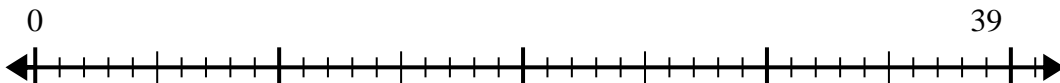
3. _____

4) $29 \div 7 =$
0



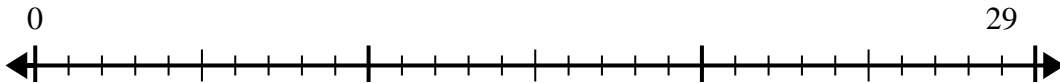
4. _____

5) $39 \div 5 =$
0



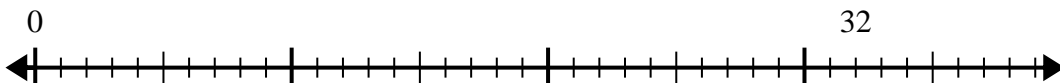
5. _____

6) $29 \div 4 =$
0



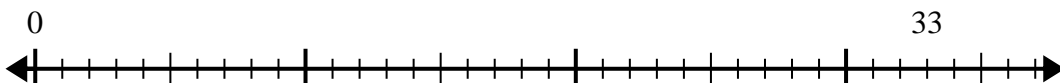
6. _____

7) $32 \div 6 =$
0



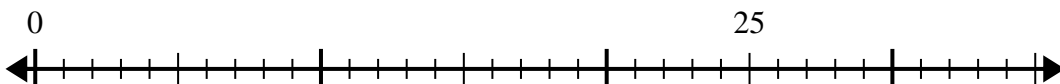
7. _____

8) $33 \div 4 =$
0



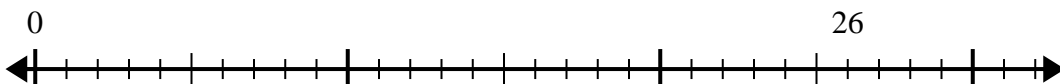
8. _____

9) $25 \div 4 =$
0



9. _____

10) $26 \div 7 =$
0

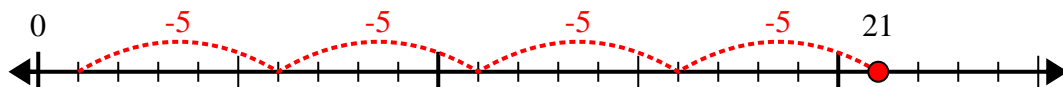


10. _____

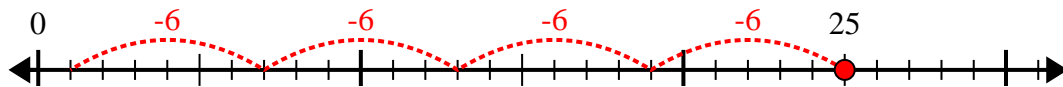


Utilisez la droite numérique pour résoudre le problème de division.

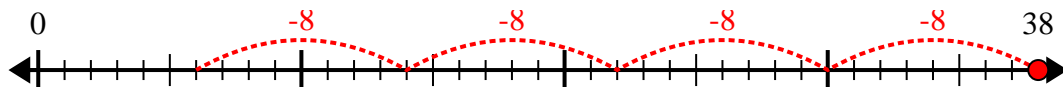
1) $21 \div 5 =$



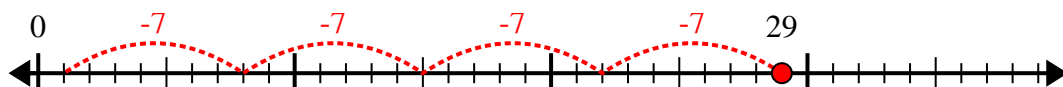
2) $25 \div 6 =$



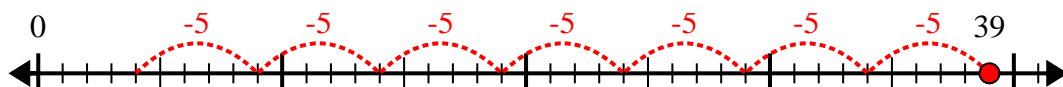
3) $38 \div 8 =$



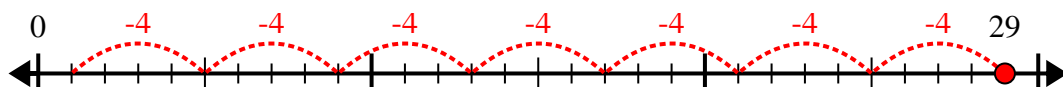
4) $29 \div 7 =$



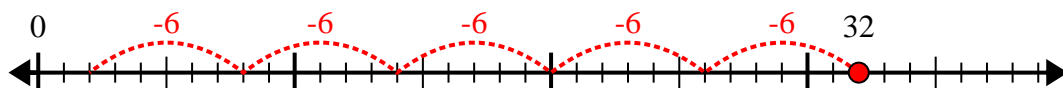
5) $39 \div 5 =$



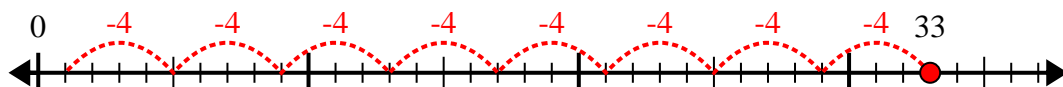
6) $29 \div 4 =$



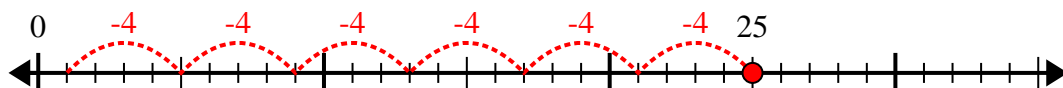
7) $32 \div 6 =$



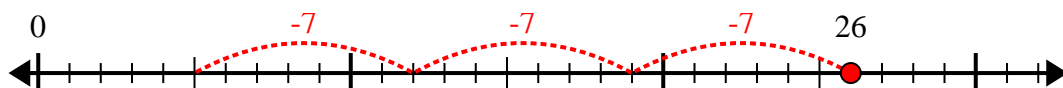
8) $33 \div 4 =$



9) $25 \div 4 =$



10) $26 \div 7 =$



Réponses

1. 4r1

2. 4r1

3. 4r6

4. 4r1

5. 7r4

6. 7r1

7. 5r2

8. 8r1

9. 6r1

10. 3r5