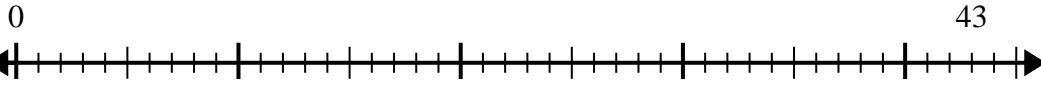




Utilisez la droite numérique pour résoudre le problème de division.

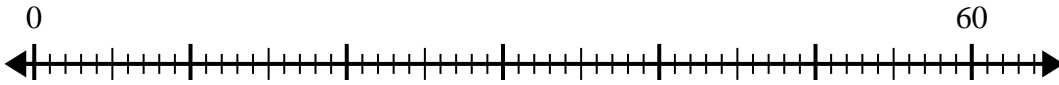
Réponses

1) $43 \div 5 =$



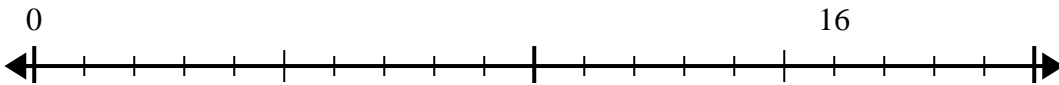
1. _____

2) $60 \div 7 =$



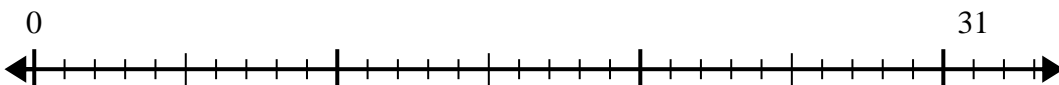
2. _____

3) $16 \div 5 =$



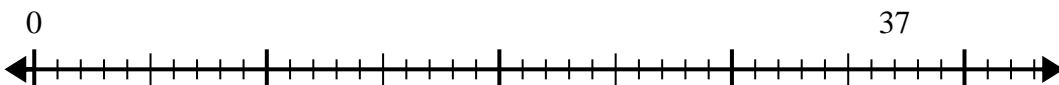
3. _____

4) $31 \div 4 =$



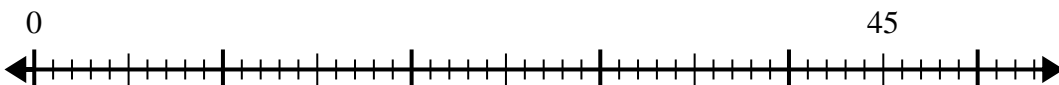
4. _____

5) $37 \div 7 =$



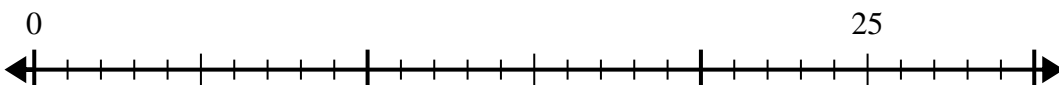
5. _____

6) $45 \div 8 =$



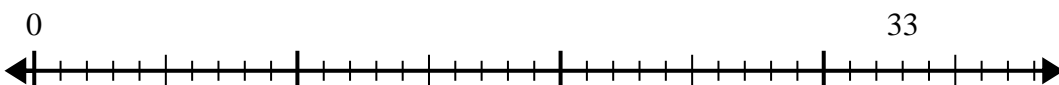
6. _____

7) $25 \div 4 =$



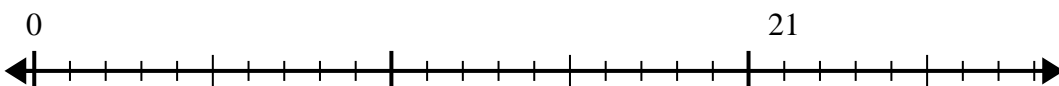
7. _____

8) $33 \div 5 =$



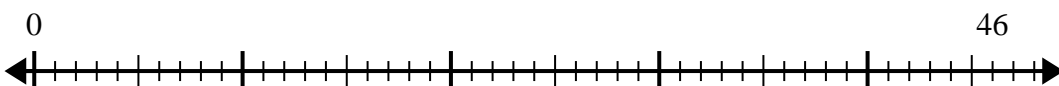
8. _____

9) $21 \div 4 =$



9. _____

10) $46 \div 6 =$

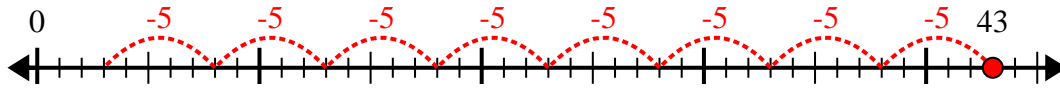


10. _____

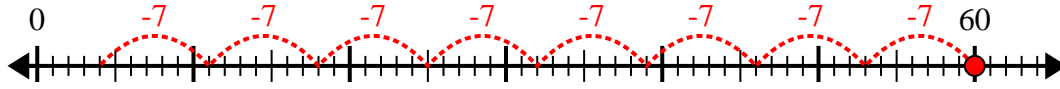


Utilisez la droite numérique pour résoudre le problème de division.

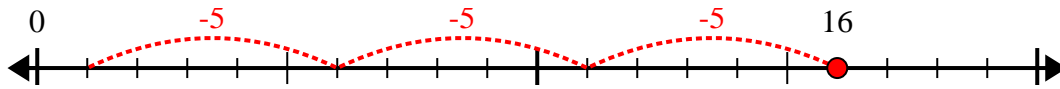
1) $43 \div 5 =$



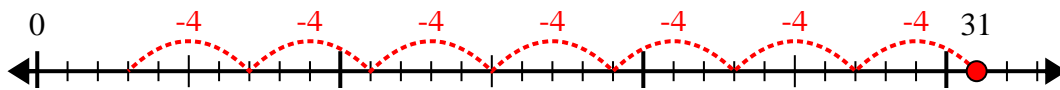
2) $60 \div 7 =$



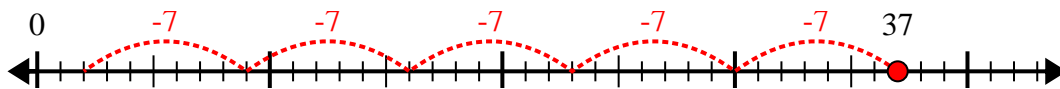
3) $16 \div 5 =$



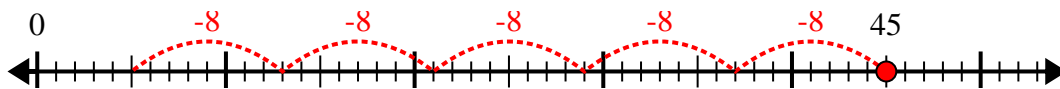
4) $31 \div 4 =$



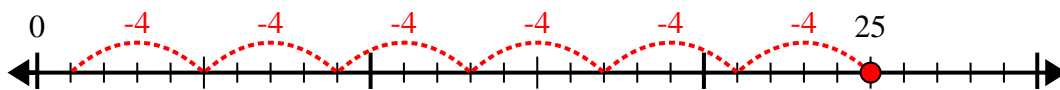
5) $37 \div 7 =$



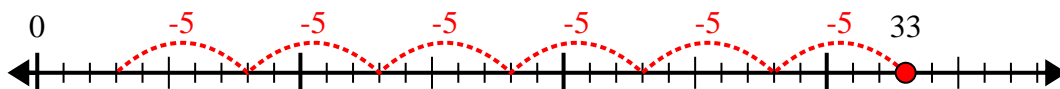
6) $45 \div 8 =$



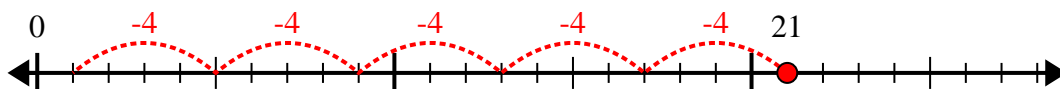
7) $25 \div 4 =$



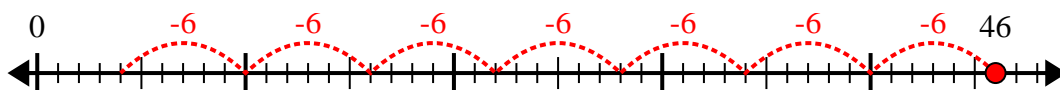
8) $33 \div 5 =$



9) $21 \div 4 =$



10) $46 \div 6 =$



Réponses

1. 8r3

2. 8r4

3. 3r1

4. 7r3

5. 5r2

6. 5r5

7. 6r1

8. 6r3

9. 5r1

10. 7r4