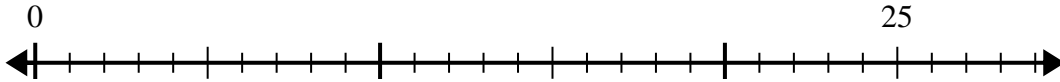




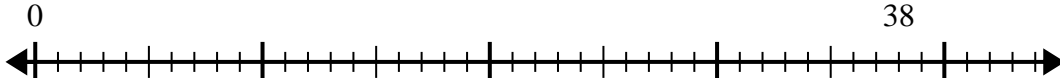
Utilisez la droite numérique pour résoudre le problème de division.

**Réponses**

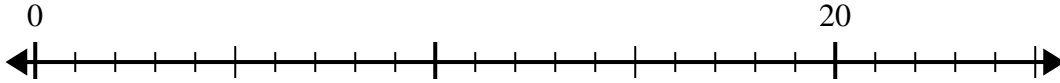
1)  $25 \div 6 =$   
0



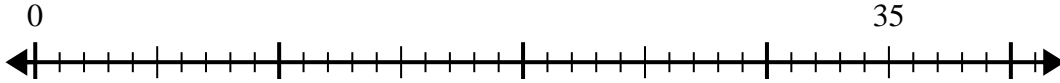
2)  $38 \div 7 =$   
0



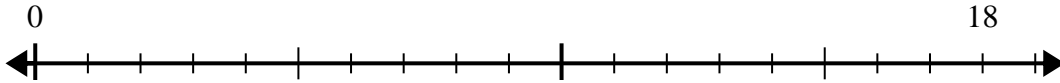
3)  $20 \div 6 =$   
0



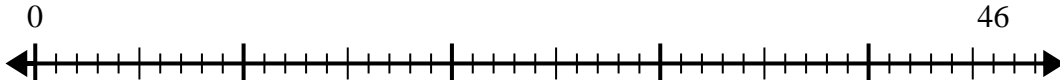
4)  $35 \div 6 =$   
0



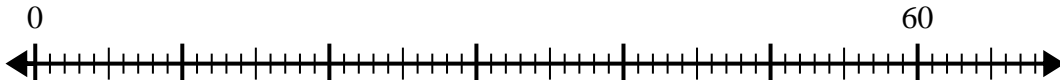
5)  $18 \div 5 =$   
0



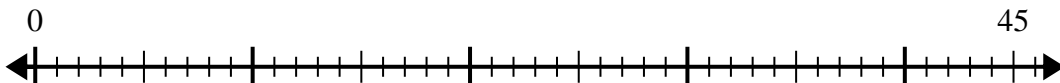
6)  $46 \div 6 =$   
0



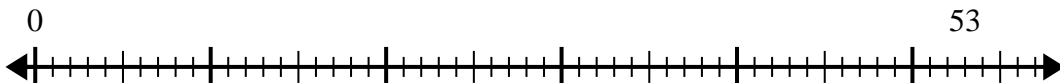
7)  $60 \div 8 =$   
0



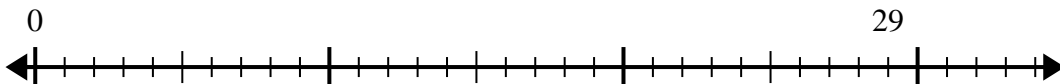
8)  $45 \div 7 =$   
0



9)  $53 \div 8 =$   
0



10)  $29 \div 4 =$   
0

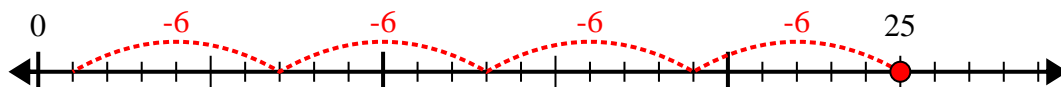


- 1. \_\_\_\_\_
- 2. \_\_\_\_\_
- 3. \_\_\_\_\_
- 4. \_\_\_\_\_
- 5. \_\_\_\_\_
- 6. \_\_\_\_\_
- 7. \_\_\_\_\_
- 8. \_\_\_\_\_
- 9. \_\_\_\_\_
- 10. \_\_\_\_\_

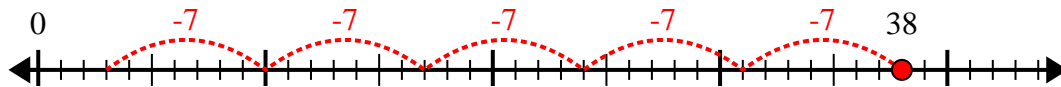


Utilisez la droite numérique pour résoudre le problème de division.

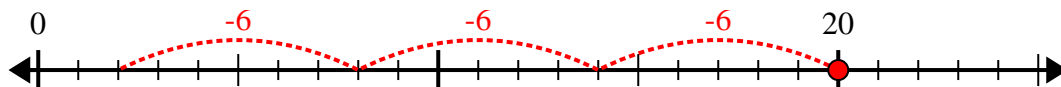
1)  $25 \div 6 =$



2)  $38 \div 7 =$



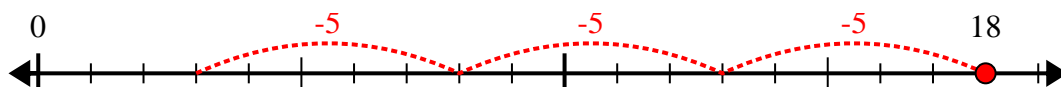
3)  $20 \div 6 =$



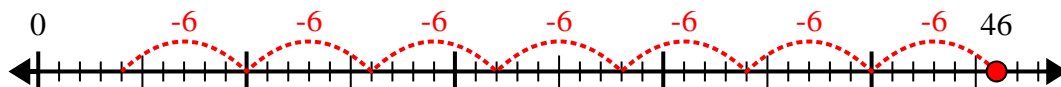
4)  $35 \div 6 =$



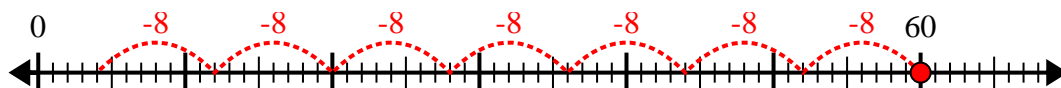
5)  $18 \div 5 =$



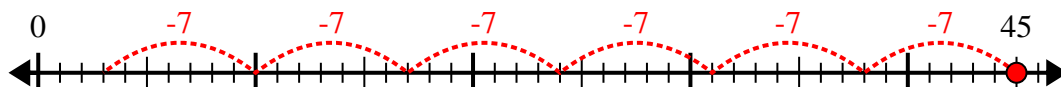
6)  $46 \div 6 =$



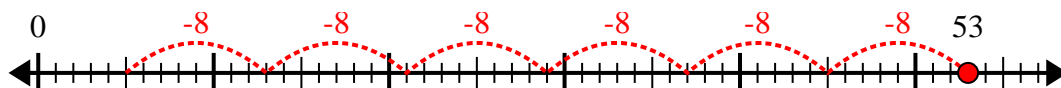
7)  $60 \div 8 =$



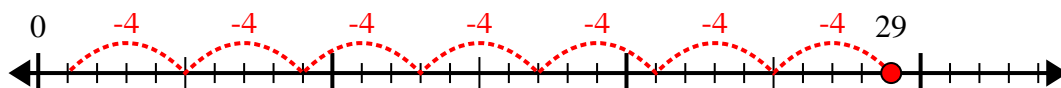
8)  $45 \div 7 =$



9)  $53 \div 8 =$



10)  $29 \div 4 =$



**Réponses**

1. 4r1

2. 5r3

3. 3r2

4. 5r5

5. 3r3

6. 7r4

7. 7r4

8. 6r3

9. 6r5

10. 7r1