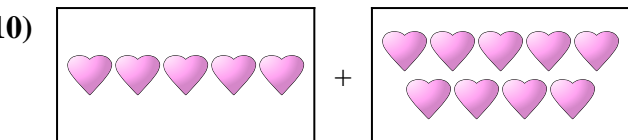
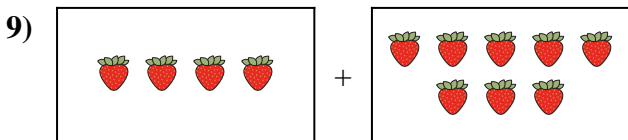
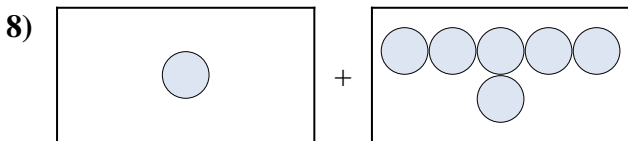
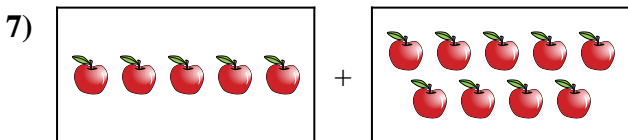

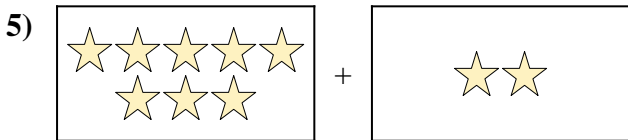
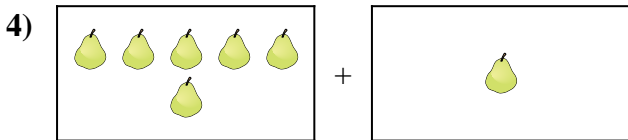
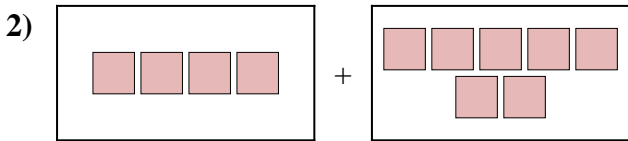
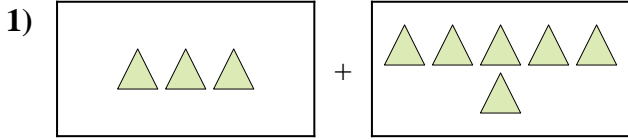




Exprimez le problème visuel sous forme d'équation avec réponse.

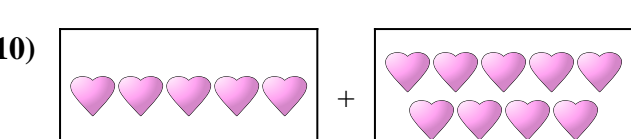
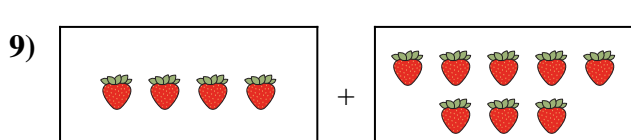
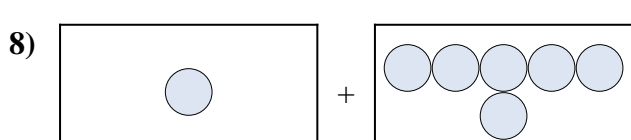
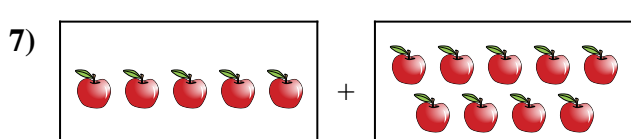

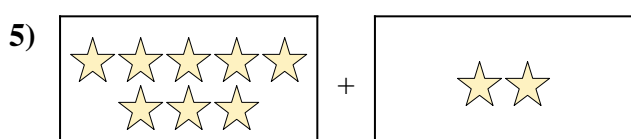
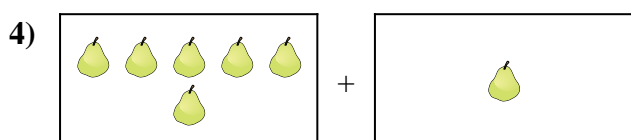
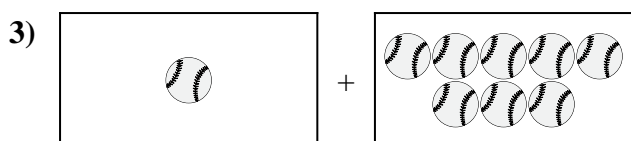
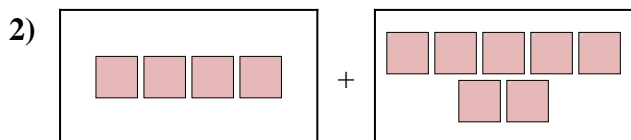
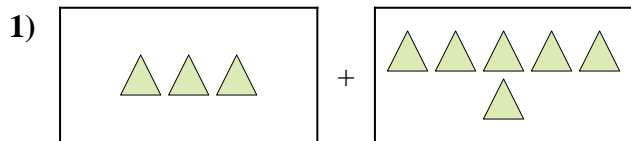
Réponses



1. _____
2. _____
3. _____
4. _____
5. _____
6. _____
7. _____
8. _____
9. _____
10. _____



Exprimez le problème visuel sous forme d'équation avec réponse.



Réponses

1. $3 + 6 = 9$

2. $4 + 7 = 11$

3. $1 + 8 = 9$

4. $6 + 1 = 7$

5. $8 + 2 = 10$

6. $10 + 9 = 19$

7. $5 + 9 = 14$

8. $1 + 6 = 7$

9. $4 + 8 = 12$

10. $5 + 9 = 14$