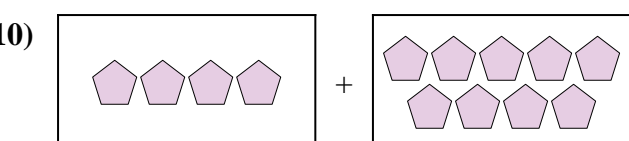
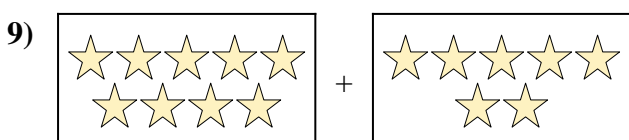
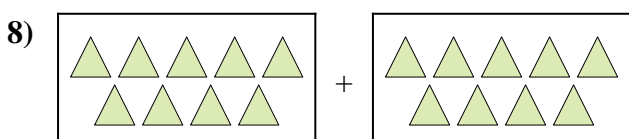

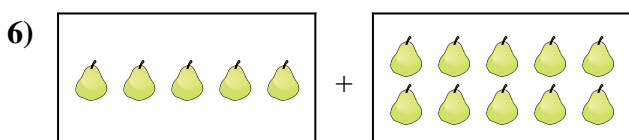
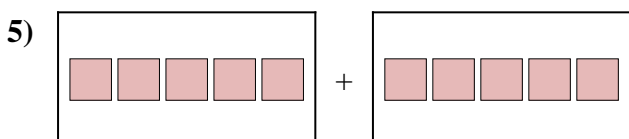
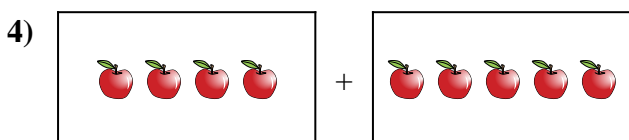

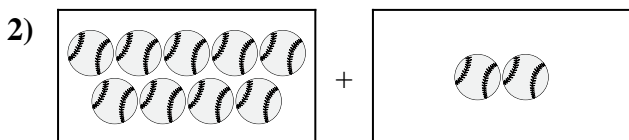
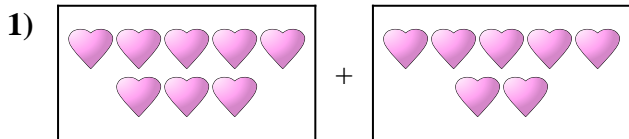




Exprimez le problème visuel sous forme d'équation avec réponse.

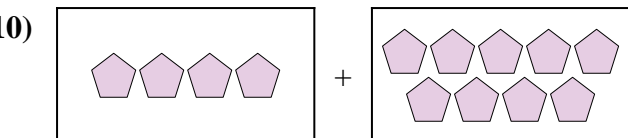
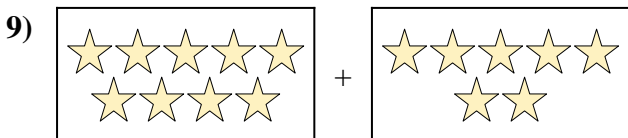
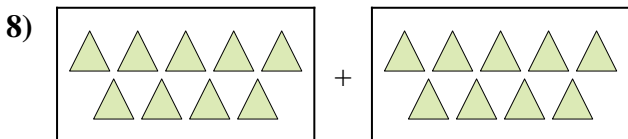

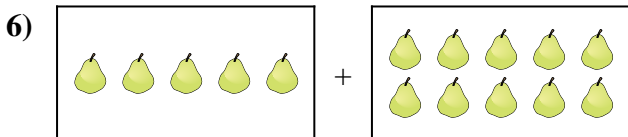
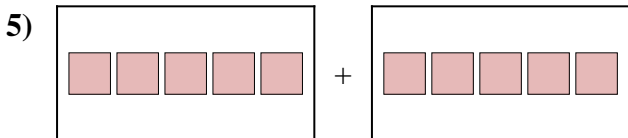
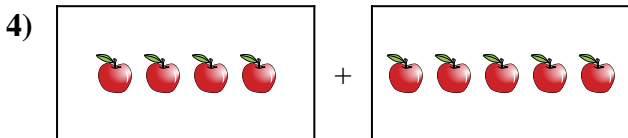

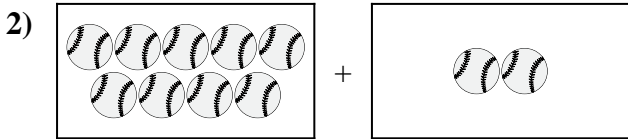
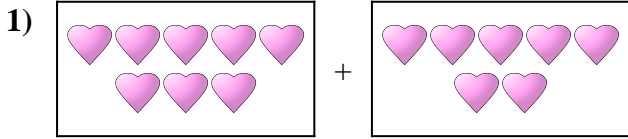
Réponses



1. _____
2. _____
3. _____
4. _____
5. _____
6. _____
7. _____
8. _____
9. _____
10. _____



Exprimez le problème visuel sous forme d'équation avec réponse.



Réponses

1. $8 + 7 = 15$

2. $9 + 2 = 11$

3. $8 + 7 = 15$

4. $4 + 5 = 9$

5. $5 + 5 = 10$

6. $5 + 10 = 15$

7. $5 + 7 = 12$

8. $9 + 9 = 18$

9. $9 + 7 = 16$

10. $4 + 9 = 13$