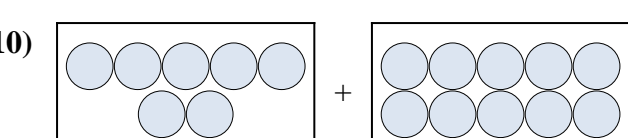

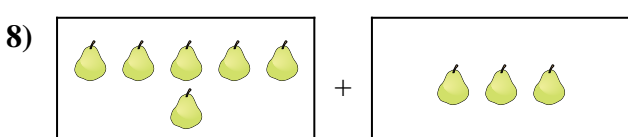

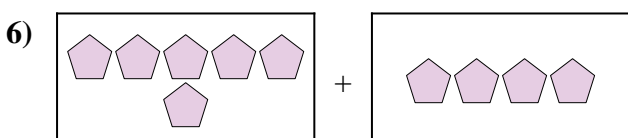
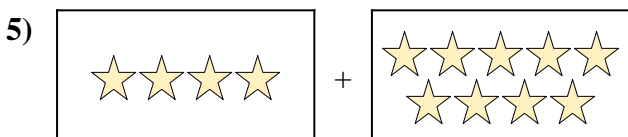
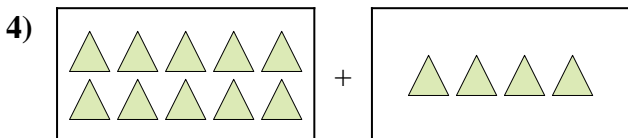
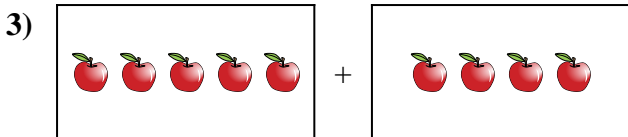
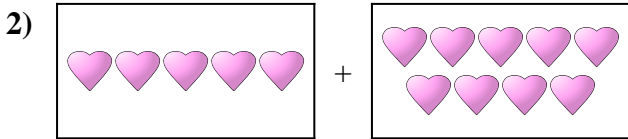
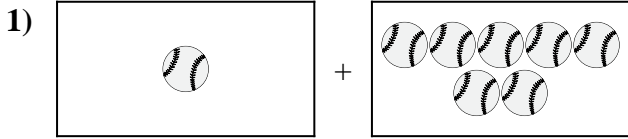




Exprimez le problème visuel sous forme d'équation avec réponse.

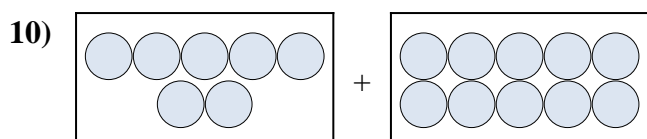

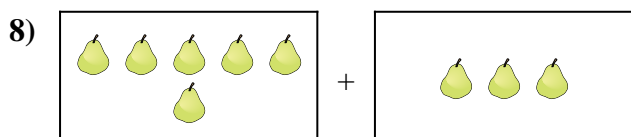

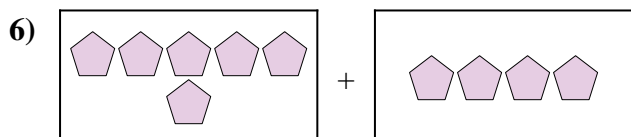
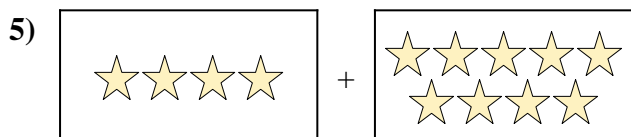
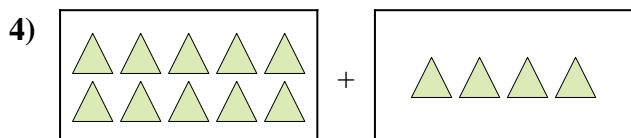
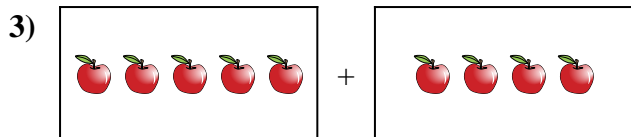
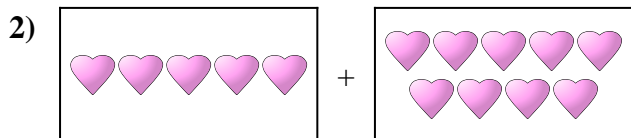
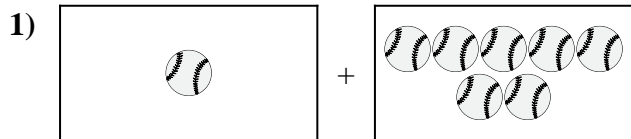
Réponses



1. _____
2. _____
3. _____
4. _____
5. _____
6. _____
7. _____
8. _____
9. _____
10. _____



Exprimez le problème visuel sous forme d'équation avec réponse.

**Réponses**

1. $1 + 7 = 8$

2. $5 + 9 = 14$

3. $5 + 4 = 9$

4. $10 + 4 = 14$

5. $4 + 9 = 13$

6. $6 + 4 = 10$

7. $6 + 10 = 16$

8. $6 + 3 = 9$

9. $7 + 4 = 11$

10. $7 + 10 = 17$