
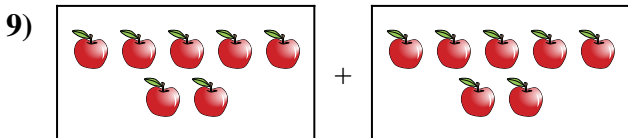
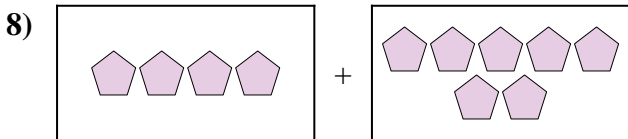
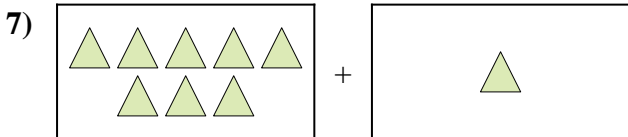
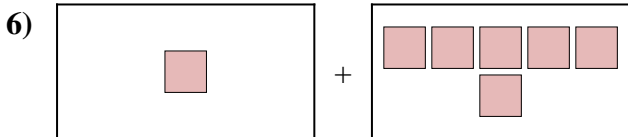
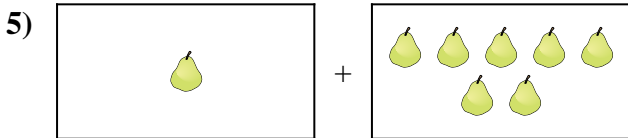
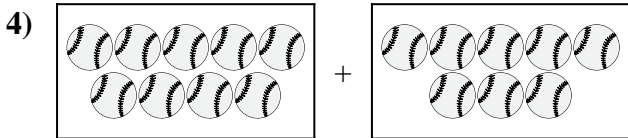
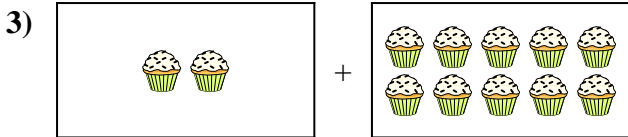
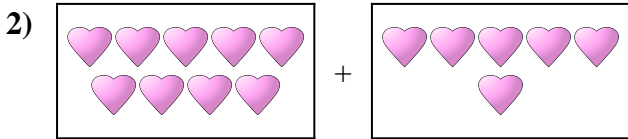
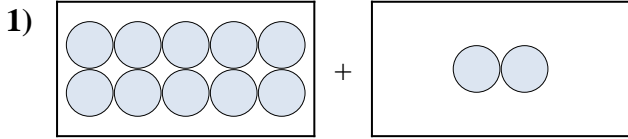




Exprimez le problème visuel sous forme d'équation avec réponse.


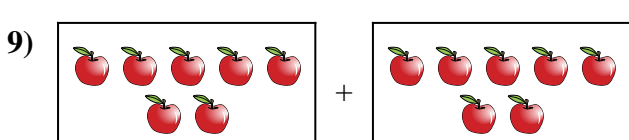
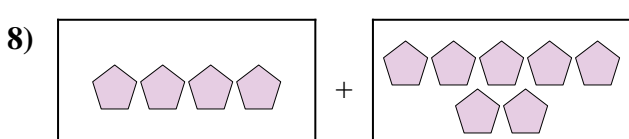
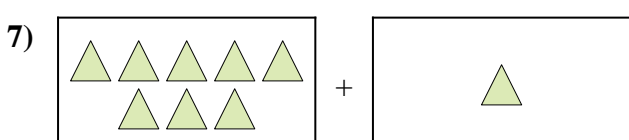
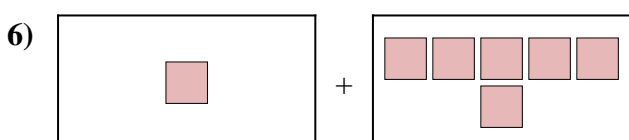
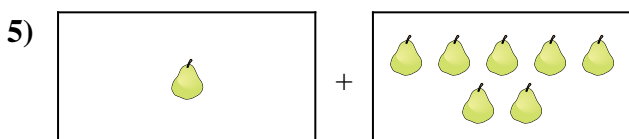
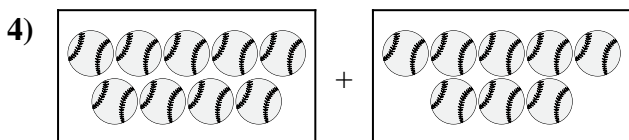
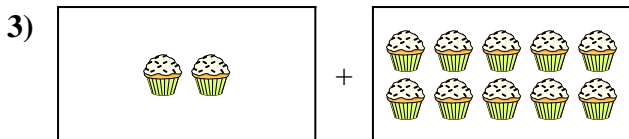
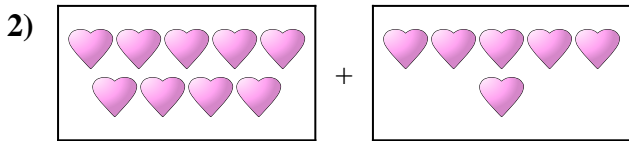
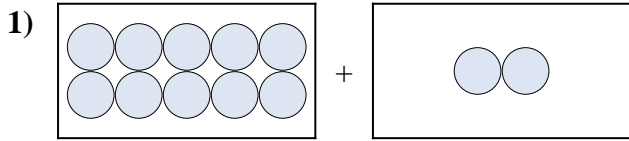
**Réponses**



1. \_\_\_\_\_
2. \_\_\_\_\_
3. \_\_\_\_\_
4. \_\_\_\_\_
5. \_\_\_\_\_
6. \_\_\_\_\_
7. \_\_\_\_\_
8. \_\_\_\_\_
9. \_\_\_\_\_
10. \_\_\_\_\_



Exprimez le problème visuel sous forme d'équation avec réponse.



**Réponses**

1. **10 + 2 = 12**

2. **9 + 6 = 15**

3. **2 + 10 = 12**

4. **9 + 8 = 17**

5. **1 + 7 = 8**

6. **1 + 6 = 7**

7. **8 + 1 = 9**

8. **4 + 7 = 11**

9. **7 + 7 = 14**

10. **9 + 7 = 16**