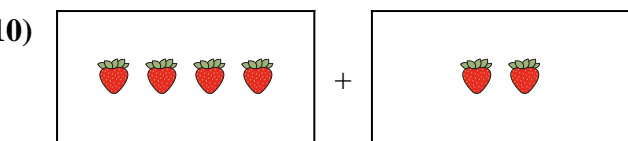
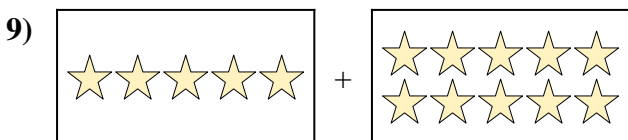
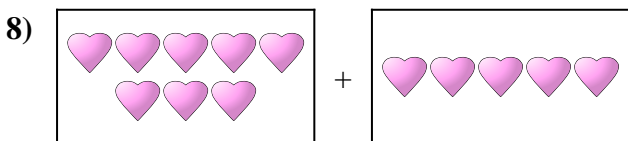
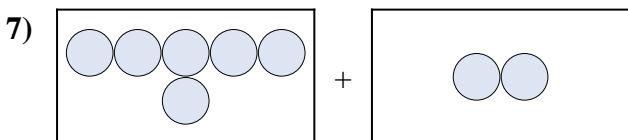
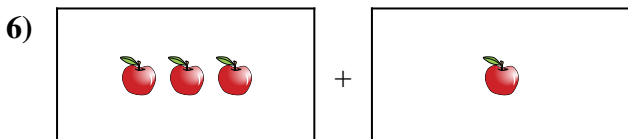
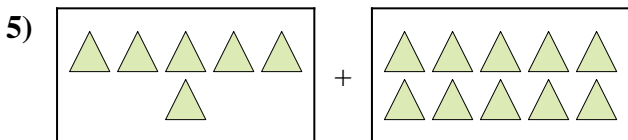
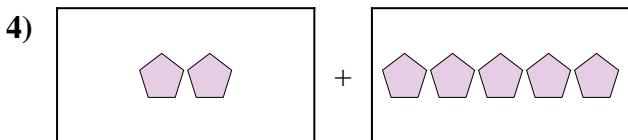
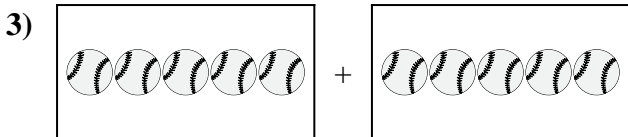
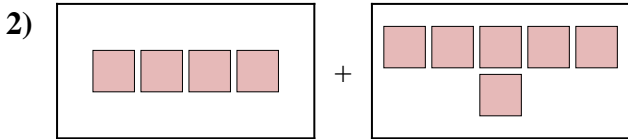
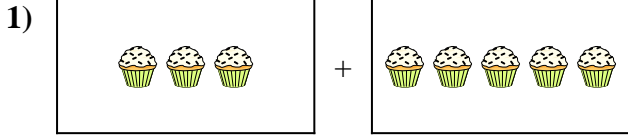




Exprimez le problème visuel sous forme d'équation avec réponse.

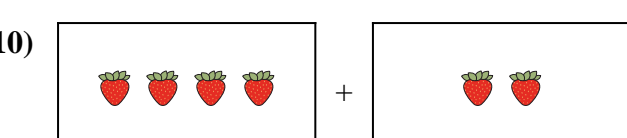
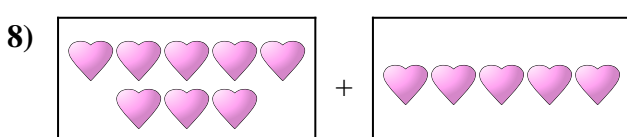
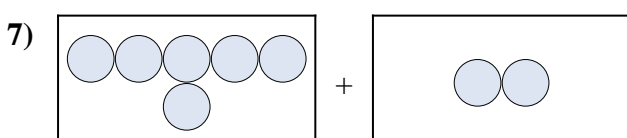
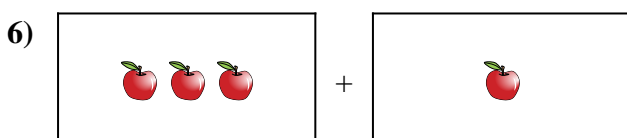
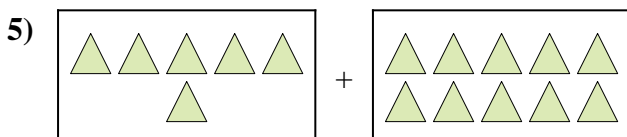
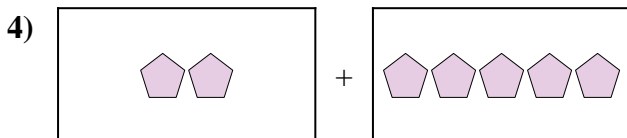
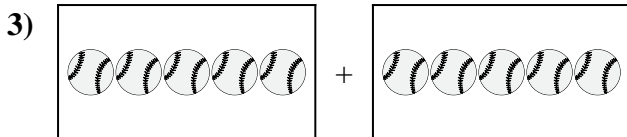
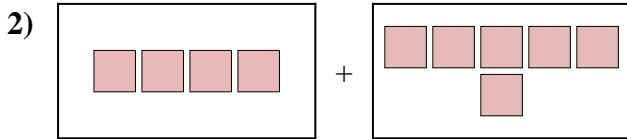

Réponses



1. _____
2. _____
3. _____
4. _____
5. _____
6. _____
7. _____
8. _____
9. _____
10. _____



Exprimez le problème visuel sous forme d'équation avec réponse.



Réponses

1. $3 + 5 = 8$

2. $4 + 6 = 10$

3. $5 + 5 = 10$

4. $2 + 5 = 7$

5. $6 + 10 = 16$

6. $3 + 1 = 4$

7. $6 + 2 = 8$

8. $8 + 5 = 13$

9. $5 + 10 = 15$

10. $4 + 2 = 6$