



Déterminez quelle lettre représente la somme.

1) $\frac{2}{3} + \frac{1}{3}$

3) $\frac{3}{6} + \frac{1}{6}$

5) $\frac{5}{6} + \frac{4}{6}$

7) $\frac{5}{12} + \frac{1}{12}$

9) $\frac{4}{8} + \frac{1}{8}$

11) $\frac{1}{5} + \frac{1}{5}$

13) $\frac{1}{4} + \frac{3}{4}$

2) $\frac{1}{2} + \frac{1}{2}$

4) $\frac{3}{5} + \frac{2}{5}$

6) $\frac{4}{12} + \frac{8}{12}$

8) $\frac{4}{6} + \frac{2}{6}$

10) $\frac{2}{3} + \frac{2}{3}$

12) $\frac{2}{10} + \frac{7}{10}$

14) $\frac{3}{4} + \frac{2}{4}$

Réponses

1. _____

2. _____

3. _____

4. _____

5. _____

6. _____

7. _____

8. _____

9. _____

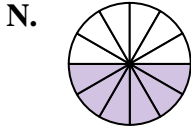
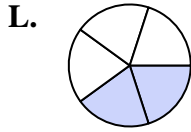
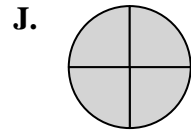
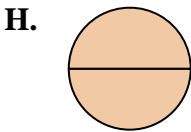
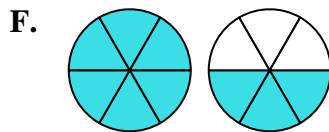
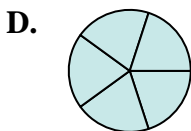
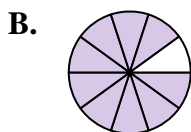
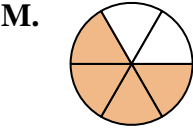
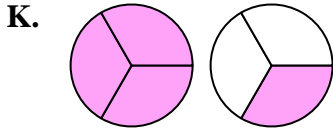
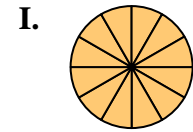
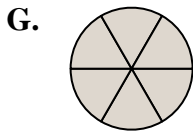
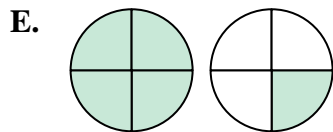
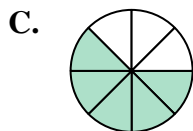
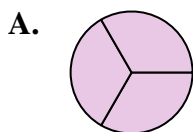
10. _____

11. _____

12. _____

13. _____

14. _____





Déterminez quelle lettre représente la somme.

1) $\frac{2}{3} + \frac{1}{3}$

3) $\frac{3}{6} + \frac{1}{6}$

5) $\frac{5}{6} + \frac{4}{6}$

7) $\frac{5}{12} + \frac{1}{12}$

9) $\frac{4}{8} + \frac{1}{8}$

11) $\frac{1}{5} + \frac{1}{5}$

13) $\frac{1}{4} + \frac{3}{4}$

2) $\frac{1}{2} + \frac{1}{2}$

4) $\frac{3}{5} + \frac{2}{5}$

6) $\frac{4}{12} + \frac{8}{12}$

8) $\frac{4}{6} + \frac{2}{6}$

10) $\frac{2}{3} + \frac{2}{3}$

12) $\frac{2}{10} + \frac{7}{10}$

14) $\frac{3}{4} + \frac{2}{4}$

Réponses

1. A $\frac{3}{3}$

2. H $\frac{2}{2}$

3. M $\frac{4}{6}$

4. D $\frac{5}{5}$

5. F $1\frac{3}{6}$

6. I $\frac{12}{12}$

7. N $\frac{6}{12}$

8. G $\frac{6}{6}$

9. C $\frac{5}{8}$

10. K $1\frac{1}{3}$

11. L $\frac{2}{5}$

12. B $\frac{9}{10}$

13. J $\frac{4}{4}$

14. E $1\frac{1}{4}$

