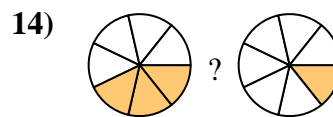
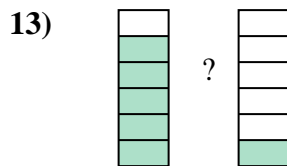
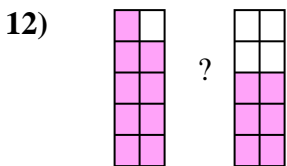
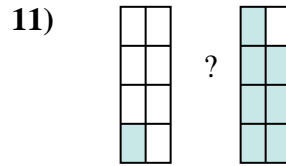
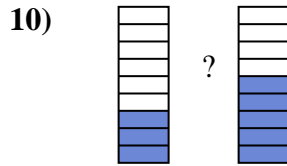
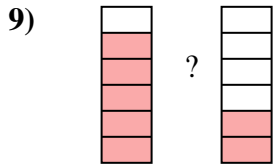
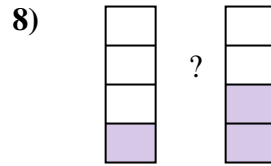
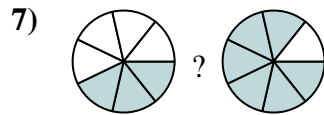
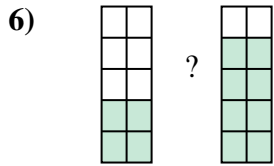
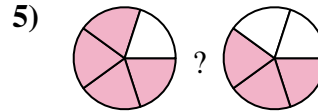
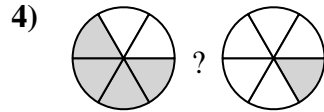
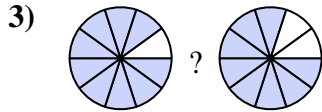
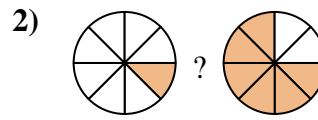
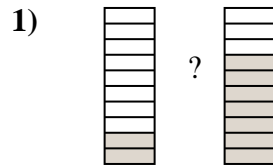
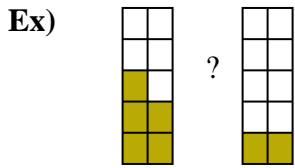




Comparez les fractions visuelles avec < , > ou =.



Réponses

Ex. $\frac{5}{10}$ $>$ $\frac{2}{10}$

1. _____

2. _____

3. _____

4. _____

5. _____

6. _____

7. _____

8. _____

9. _____

10. _____

11. _____

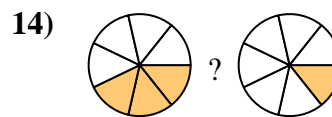
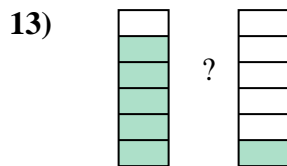
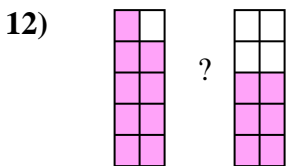
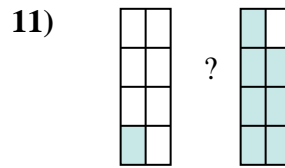
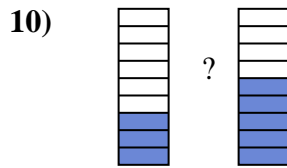
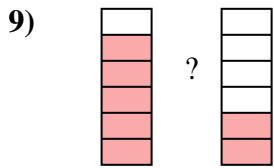
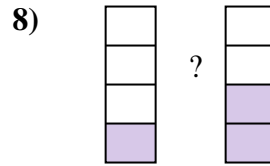
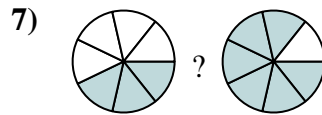
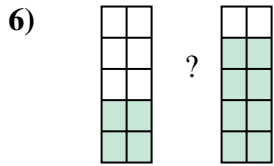
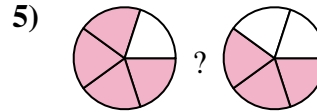
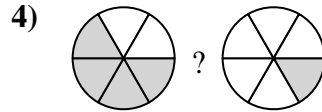
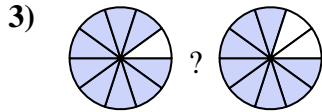
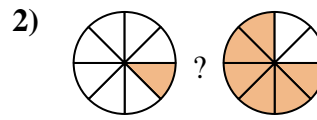
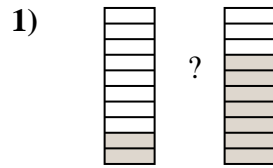
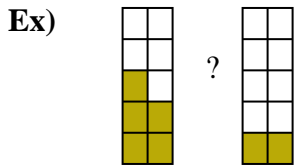
12. _____

13. _____

14. _____



Comparez les fractions visuelles avec $<$, $>$ ou $=$.



Réponses

Ex.	$\frac{5}{10}$	$>$	$\frac{2}{10}$
1.	$\frac{2}{10}$	$<$	$\frac{7}{10}$
2.	$\frac{1}{8}$	$<$	$\frac{6}{8}$
3.	$\frac{9}{10}$	$>$	$\frac{8}{10}$
4.	$\frac{4}{6}$	$>$	$\frac{1}{6}$
5.	$\frac{4}{5}$	$>$	$\frac{3}{5}$
6.	$\frac{4}{10}$	$<$	$\frac{8}{10}$
7.	$\frac{3}{7}$	$<$	$\frac{6}{7}$
8.	$\frac{1}{4}$	$<$	$\frac{2}{4}$
9.	$\frac{5}{6}$	$>$	$\frac{2}{6}$
10.	$\frac{3}{9}$	$<$	$\frac{5}{9}$
11.	$\frac{1}{8}$	$<$	$\frac{7}{8}$
12.	$\frac{9}{10}$	$>$	$\frac{6}{10}$
13.	$\frac{5}{6}$	$>$	$\frac{1}{6}$
14.	$\frac{3}{7}$	$>$	$\frac{1}{7}$