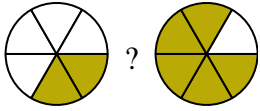


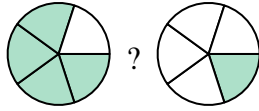


Comparez les fractions visuelles avec $<$, $>$ ou $=$.

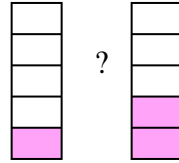
Ex)



1)



2)



Réponses

Ex. $\frac{2}{6}$ $<$ $\frac{5}{6}$

1. _____

2. _____

3. _____

4. _____

5. _____

6. _____

7. _____

8. _____

9. _____

10. _____

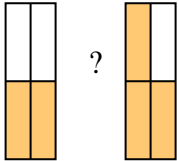
11. _____

12. _____

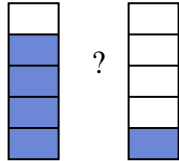
13. _____

14. _____

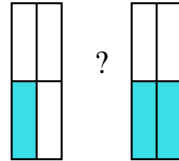
3)



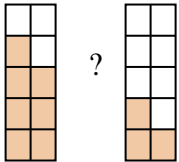
4)



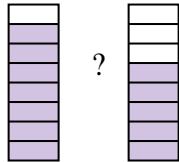
5)



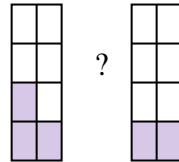
6)



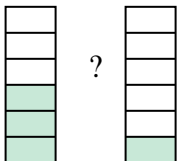
7)



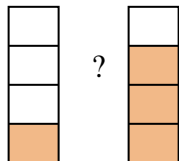
8)



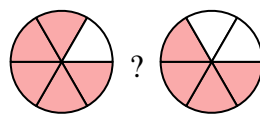
9)



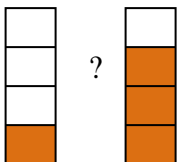
10)



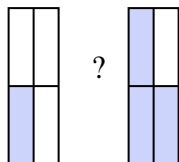
11)



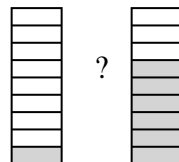
12)



13)

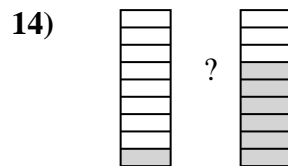
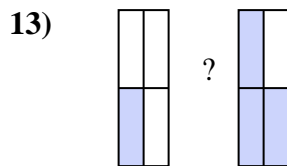
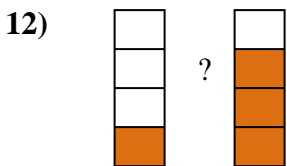
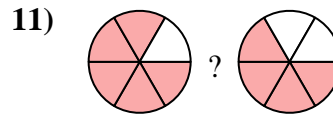
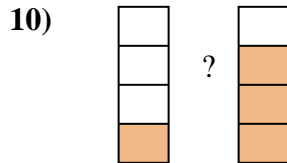
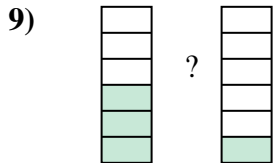
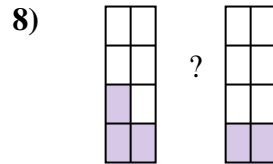
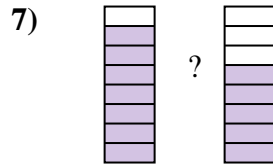
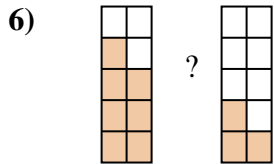
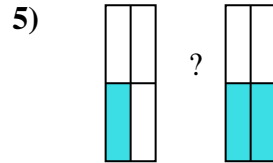
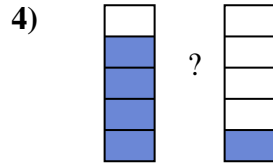
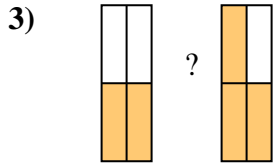
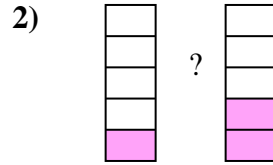
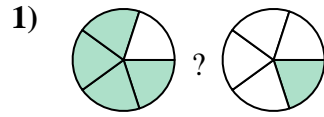
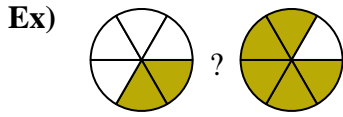


14)





Comparez les fractions visuelles avec $<$, $>$ ou $=$.



Réponses

Ex.	$\frac{2}{6}$	$<$	$\frac{5}{6}$
1.	$\frac{4}{5}$	$>$	$\frac{1}{5}$
2.	$\frac{1}{5}$	$<$	$\frac{2}{5}$
3.	$\frac{2}{4}$	$<$	$\frac{3}{4}$
4.	$\frac{4}{5}$	$>$	$\frac{1}{5}$
5.	$\frac{1}{4}$	$<$	$\frac{2}{4}$
6.	$\frac{7}{10}$	$>$	$\frac{3}{10}$
7.	$\frac{7}{8}$	$>$	$\frac{5}{8}$
8.	$\frac{3}{8}$	$>$	$\frac{2}{8}$
9.	$\frac{3}{6}$	$>$	$\frac{1}{6}$
10.	$\frac{1}{4}$	$<$	$\frac{3}{4}$
11.	$\frac{5}{6}$	$>$	$\frac{4}{6}$
12.	$\frac{1}{4}$	$<$	$\frac{3}{4}$
13.	$\frac{1}{4}$	$<$	$\frac{3}{4}$
14.	$\frac{1}{9}$	$<$	$\frac{6}{9}$