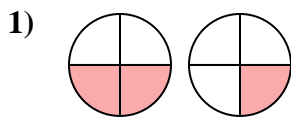


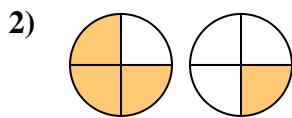


Déterminez quelle lettre représente la comparaison des fractions.

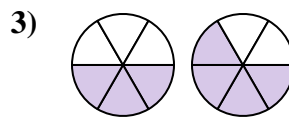
Réponses



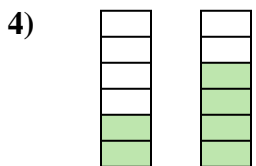
- A. $\frac{2}{2} < \frac{1}{3}$
- B. $\frac{2}{2} > \frac{1}{3}$
- C. $\frac{2}{4} > \frac{1}{4}$
- D. $\frac{2}{4} < \frac{1}{4}$



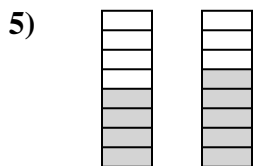
- A. $\frac{1}{3} > \frac{3}{1}$
- B. $\frac{3}{1} > \frac{1}{3}$
- C. $\frac{3}{4} > \frac{1}{4}$
- D. $\frac{3}{4} < \frac{1}{4}$



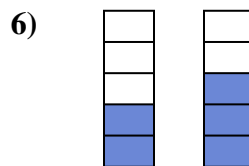
- A. $\frac{3}{6} < \frac{4}{6}$
- B. $\frac{3}{3} < \frac{2}{4}$
- C. $\frac{6}{3} > \frac{6}{4}$
- D. $\frac{3}{6} > \frac{4}{6}$



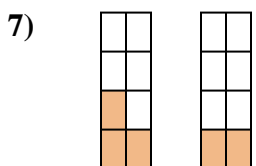
- A. $\frac{2}{4} < \frac{4}{2}$
- B. $\frac{2}{6} < \frac{4}{6}$
- C. $\frac{2}{4} > \frac{4}{2}$
- D. $\frac{2}{6} > \frac{4}{6}$



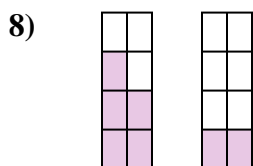
- A. $\frac{8}{4} > \frac{8}{5}$
- B. $\frac{4}{8} > \frac{5}{8}$
- C. $\frac{4}{4} > \frac{5}{3}$
- D. $\frac{4}{8} < \frac{5}{8}$



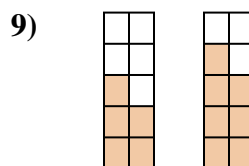
- A. $\frac{2}{5} > \frac{3}{5}$
- B. $\frac{2}{3} > \frac{3}{2}$
- C. $\frac{5}{2} > \frac{5}{3}$
- D. $\frac{2}{5} < \frac{3}{5}$



- A. $\frac{3}{5} > \frac{2}{6}$
- B. $\frac{3}{8} < \frac{2}{8}$
- C. $\frac{3}{8} > \frac{2}{8}$
- D. $\frac{5}{3} < \frac{6}{2}$



- A. $\frac{5}{3} < \frac{2}{6}$
- B. $\frac{5}{3} > \frac{2}{6}$
- C. $\frac{5}{8} > \frac{2}{8}$
- D. $\frac{3}{5} > \frac{6}{2}$



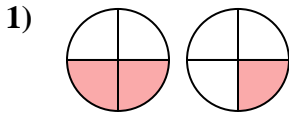
- A. $\frac{10}{5} > \frac{10}{7}$
- B. $\frac{5}{5} < \frac{7}{3}$
- C. $\frac{5}{5} < \frac{3}{7}$
- D. $\frac{5}{10} < \frac{7}{10}$

- 1. _____
- 2. _____
- 3. _____
- 4. _____
- 5. _____
- 6. _____
- 7. _____
- 8. _____
- 9. _____

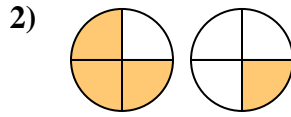


Déterminez quelle lettre représente la comparaison des fractions.

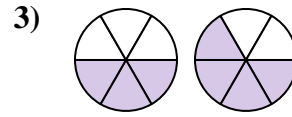
Réponses



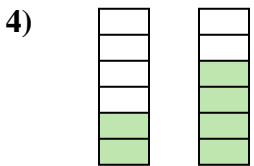
- A. $\frac{2}{2} < \frac{1}{3}$
- B. $\frac{2}{2} > \frac{1}{3}$
- C. $\frac{2}{4} > \frac{1}{4}$
- D. $\frac{2}{4} < \frac{1}{4}$



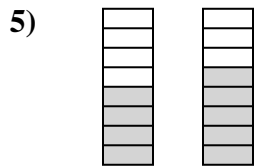
- A. $\frac{1}{3} > \frac{3}{1}$
- B. $\frac{3}{1} > \frac{1}{3}$
- C. $\frac{3}{4} > \frac{1}{4}$
- D. $\frac{3}{4} < \frac{1}{4}$



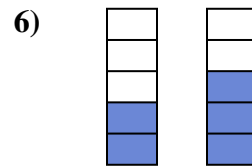
- A. $\frac{3}{6} < \frac{4}{6}$
- B. $\frac{3}{3} < \frac{2}{4}$
- C. $\frac{6}{3} > \frac{6}{4}$
- D. $\frac{3}{6} > \frac{4}{6}$



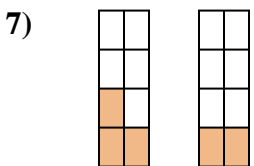
- A. $\frac{2}{4} < \frac{4}{2}$
- B. $\frac{2}{6} < \frac{4}{6}$
- C. $\frac{2}{4} > \frac{4}{2}$
- D. $\frac{2}{6} > \frac{4}{6}$



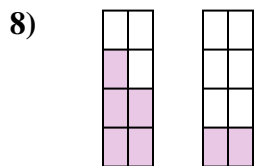
- A. $\frac{8}{4} > \frac{8}{5}$
- B. $\frac{4}{8} > \frac{5}{8}$
- C. $\frac{4}{4} > \frac{5}{3}$
- D. $\frac{4}{8} < \frac{5}{8}$



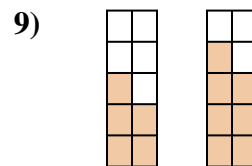
- A. $\frac{2}{5} > \frac{3}{5}$
- B. $\frac{2}{3} > \frac{3}{2}$
- C. $\frac{5}{2} > \frac{5}{3}$
- D. $\frac{2}{5} < \frac{3}{5}$



- A. $\frac{3}{5} > \frac{2}{6}$
- B. $\frac{3}{8} < \frac{2}{8}$
- C. $\frac{3}{8} > \frac{2}{8}$
- D. $\frac{5}{3} < \frac{6}{2}$



- A. $\frac{5}{3} < \frac{2}{6}$
- B. $\frac{5}{3} > \frac{2}{6}$
- C. $\frac{5}{8} > \frac{2}{8}$
- D. $\frac{3}{5} > \frac{6}{2}$



- A. $\frac{10}{5} > \frac{10}{7}$
- B. $\frac{5}{5} < \frac{7}{3}$
- C. $\frac{5}{5} < \frac{3}{7}$
- D. $\frac{5}{10} < \frac{7}{10}$

- 1. **C**
- 2. **C**
- 3. **A**
- 4. **B**
- 5. **D**
- 6. **D**
- 7. **C**
- 8. **C**
- 9. **D**