



1-10	91	82	73	64	55	45	36	27	18	9
11	0									



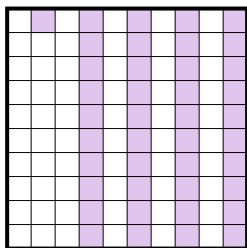
Exprimez la valeur en fraction , décimal & pourcentage.

Ex)



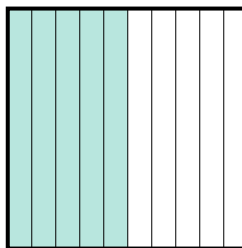
fraction $\frac{8}{10}$
décimal $0,8$
pourcentage 80

1)



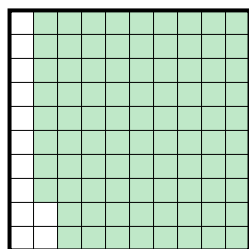
fraction $\frac{41}{100}$
décimal $0,41$
pourcentage 41

2)



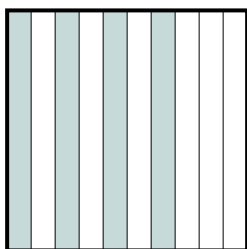
fraction $\frac{5}{10}$
décimal $0,5$
pourcentage 50

3)



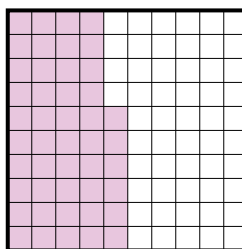
fraction $\frac{88}{100}$
décimal $0,88$
pourcentage 88

4)



fraction $\frac{4}{10}$
décimal $0,4$
pourcentage 40

5)



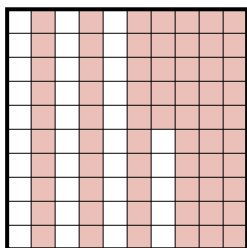
fraction $\frac{86}{100}$
décimal $0,86$
pourcentage 86

6)



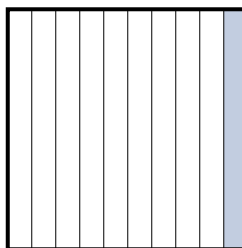
fraction $\frac{6}{10}$
décimal $0,6$
pourcentage 60

7)



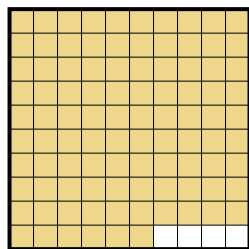
fraction $\frac{65}{100}$
décimal $0,65$
pourcentage 65

8)



fraction $\frac{1}{10}$
décimal $0,1$
pourcentage 10

9)



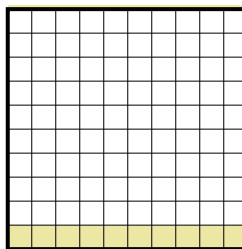
fraction $\frac{96}{100}$
décimal $0,96$
pourcentage 96

10)



fraction $\frac{3}{10}$
décimal $0,3$
pourcentage 30

11)



fraction $\frac{20}{100}$
décimal $0,20$
pourcentage 20

Réponses

Ex. $\frac{8}{10}$ **0,8** **80%**

1. $\frac{41}{100}$ **0,41** **41%**

2. $\frac{5}{10}$ **0,5** **50%**

3. $\frac{88}{100}$ **0,88** **88%**

4. $\frac{4}{10}$ **0,4** **40%**

5. $\frac{86}{100}$ **0,86** **86%**

6. $\frac{6}{10}$ **0,6** **60%**

7. $\frac{65}{100}$ **0,65** **65%**

8. $\frac{1}{10}$ **0,1** **10%**

9. $\frac{96}{100}$ **0,96** **96%**

10. $\frac{3}{10}$ **0,3** **30%**

11. $\frac{20}{100}$ **0,20** **20%**