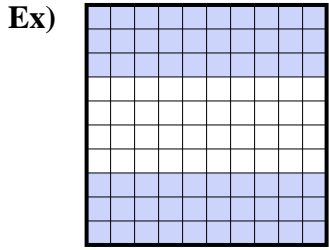
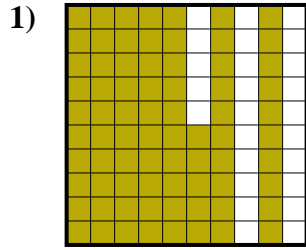




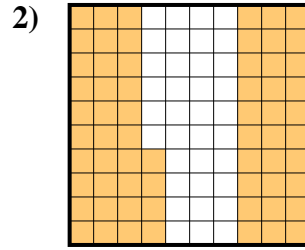
Exprimez la valeur en fraction , décimal & pourcentage.



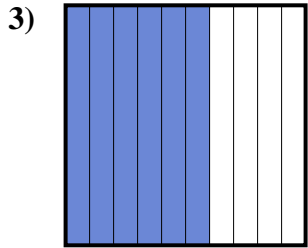
fraction $\frac{60}{100}$
 décimal $0,60$
 pourcentage 60



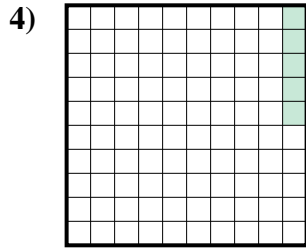
fraction $\frac{75}{100}$
 décimal $0,75$
 pourcentage 75



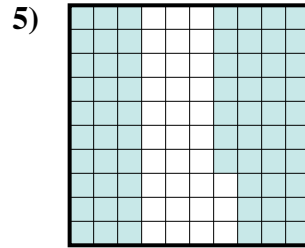
fraction $\frac{64}{100}$
 décimal $0,64$
 pourcentage 64



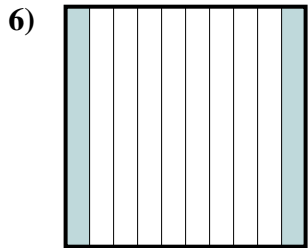
fraction $\frac{6}{10}$
 décimal $0,6$
 pourcentage 60



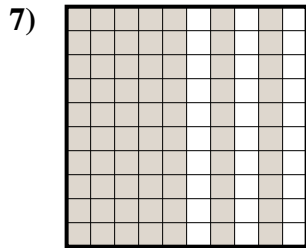
fraction $\frac{5}{100}$
 décimal $0,05$
 pourcentage 5



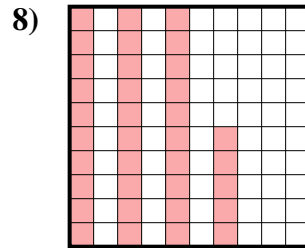
fraction $\frac{67}{100}$
 décimal $0,67$
 pourcentage 67



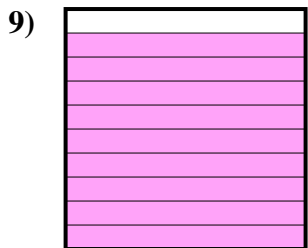
fraction $\frac{2}{10}$
 décimal $0,2$
 pourcentage 20



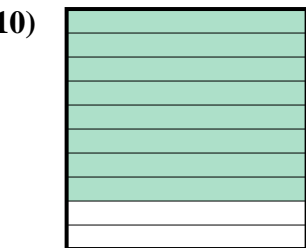
fraction $\frac{70}{100}$
 décimal $0,70$
 pourcentage 70



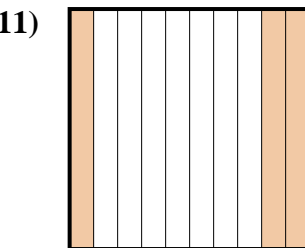
fraction $\frac{35}{100}$
 décimal $0,35$
 pourcentage 35



fraction $\frac{9}{10}$
 décimal $0,9$
 pourcentage 90



fraction $\frac{8}{10}$
 décimal $0,8$
 pourcentage 80



fraction $\frac{3}{10}$
 décimal $0,3$
 pourcentage 30

Réponses

- Ex. $\frac{60}{100}$ **0,60** **60%**
 1. $\frac{75}{100}$ **0,75** **75%**
 2. $\frac{64}{100}$ **0,64** **64%**
 3. $\frac{6}{10}$ **0,6** **60%**
 4. $\frac{5}{100}$ **0,05** **5%**
 5. $\frac{67}{100}$ **0,67** **67%**
 6. $\frac{2}{10}$ **0,2** **20%**
 7. $\frac{70}{100}$ **0,70** **70%**
 8. $\frac{35}{100}$ **0,35** **35%**
 9. $\frac{9}{10}$ **0,9** **90%**
 10. $\frac{8}{10}$ **0,8** **80%**
 11. $\frac{3}{10}$ **0,3** **30%**