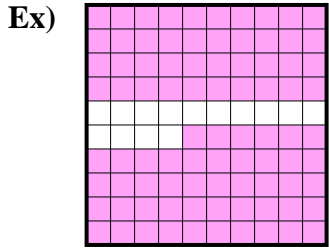


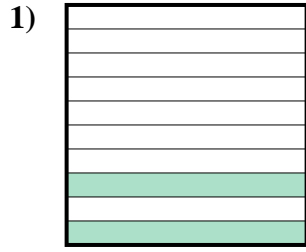




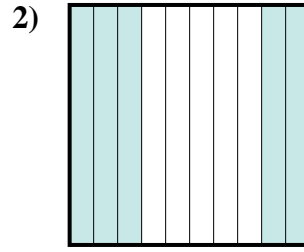
Exprimez la valeur en fraction , décimal & pourcentage.



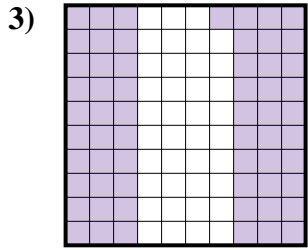
fraction  $\frac{86}{100}$   
 décimal  $0,86$   
 pourcentage  $86$



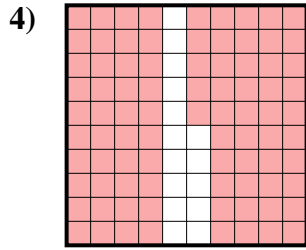
fraction  $\frac{2}{10}$   
 décimal  $0,2$   
 pourcentage  $20$



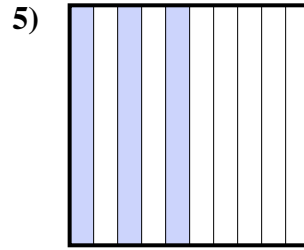
fraction  $\frac{5}{10}$   
 décimal  $0,5$   
 pourcentage  $50$



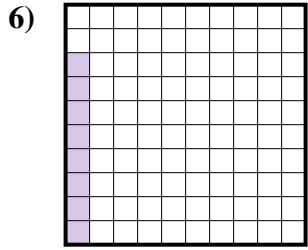
fraction  $\frac{61}{100}$   
 décimal  $0,61$   
 pourcentage  $61$



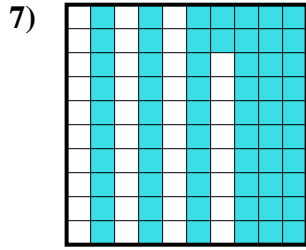
fraction  $\frac{85}{100}$   
 décimal  $0,85$   
 pourcentage  $85$



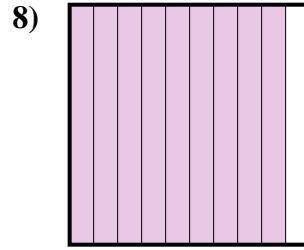
fraction  $\frac{3}{10}$   
 décimal  $0,3$   
 pourcentage  $30$



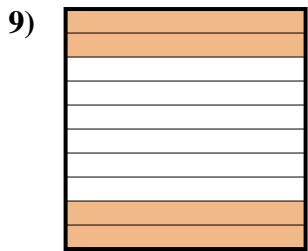
fraction  $\frac{8}{100}$   
 décimal  $0,08$   
 pourcentage  $8$



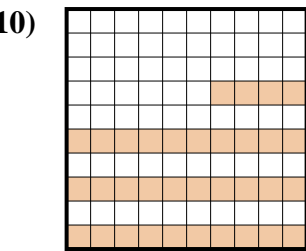
fraction  $\frac{62}{100}$   
 décimal  $0,62$   
 pourcentage  $62$



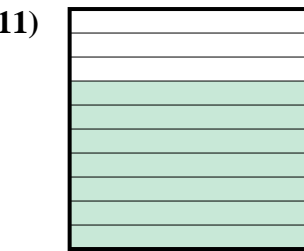
fraction  $\frac{9}{10}$   
 décimal  $0,9$   
 pourcentage  $90$



fraction  $\frac{4}{10}$   
 décimal  $0,4$   
 pourcentage  $40$



fraction  $\frac{34}{100}$   
 décimal  $0,34$   
 pourcentage  $34$



fraction  $\frac{7}{10}$   
 décimal  $0,7$   
 pourcentage  $70$

**Réponses**

|     |                  |             |            |
|-----|------------------|-------------|------------|
| Ex. | $\frac{86}{100}$ | <b>0,86</b> | <b>86%</b> |
| 1.  | $\frac{2}{10}$   | <b>0,2</b>  | <b>20%</b> |
| 2.  | $\frac{5}{10}$   | <b>0,5</b>  | <b>50%</b> |
| 3.  | $\frac{61}{100}$ | <b>0,61</b> | <b>61%</b> |
| 4.  | $\frac{85}{100}$ | <b>0,85</b> | <b>85%</b> |
| 5.  | $\frac{3}{10}$   | <b>0,3</b>  | <b>30%</b> |
| 6.  | $\frac{8}{100}$  | <b>0,08</b> | <b>8%</b>  |
| 7.  | $\frac{62}{100}$ | <b>0,62</b> | <b>62%</b> |
| 8.  | $\frac{9}{10}$   | <b>0,9</b>  | <b>90%</b> |
| 9.  | $\frac{4}{10}$   | <b>0,4</b>  | <b>40%</b> |
| 10. | $\frac{34}{100}$ | <b>0,34</b> | <b>34%</b> |
| 11. | $\frac{7}{10}$   | <b>0,7</b>  | <b>70%</b> |