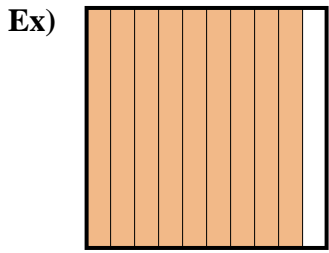
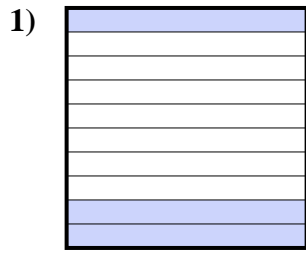




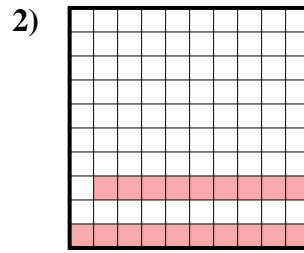
Exprimez la valeur en fraction , décimal & pourcentage.



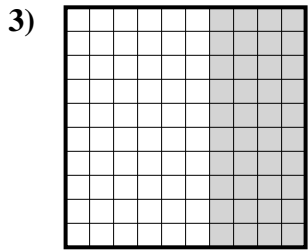
fraction $\frac{9}{10}$
 décimal 0,9
 pourcentage 90



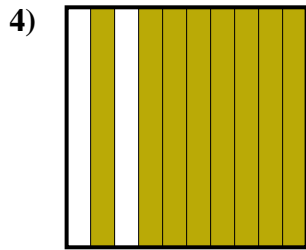
fraction _____
 décimal _____
 pourcentage _____



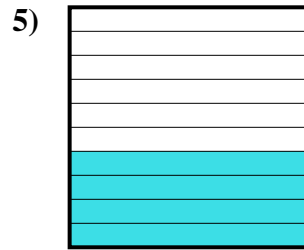
fraction _____
 décimal _____
 pourcentage _____



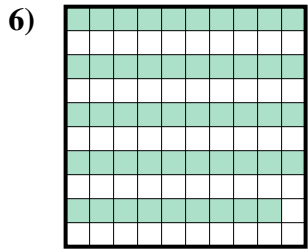
fraction _____
 décimal _____
 pourcentage _____



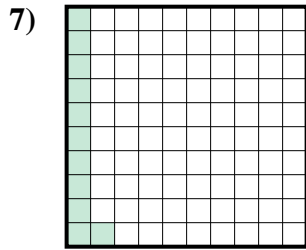
fraction _____
 décimal _____
 pourcentage _____



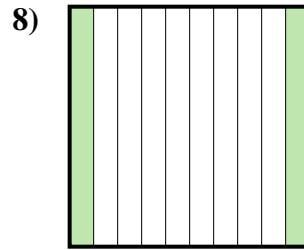
fraction _____
 décimal _____
 pourcentage _____



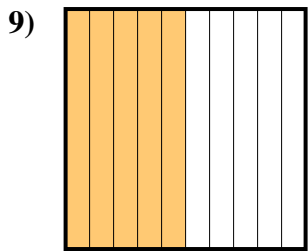
fraction _____
 décimal _____
 pourcentage _____



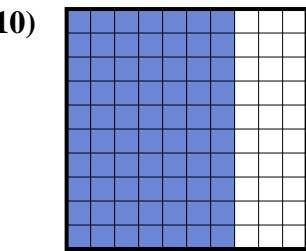
fraction _____
 décimal _____
 pourcentage _____



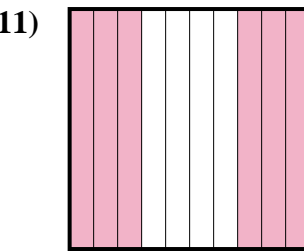
fraction _____
 décimal _____
 pourcentage _____



fraction _____
 décimal _____
 pourcentage _____



fraction _____
 décimal _____
 pourcentage _____



fraction _____
 décimal _____
 pourcentage _____

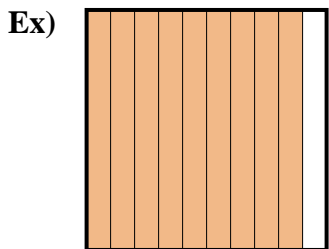
Réponses

Ex. $\frac{9}{10}$ 0,9 90%

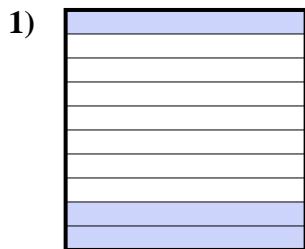
1. _____
2. _____
3. _____
4. _____
5. _____
6. _____
7. _____
8. _____
9. _____
10. _____
11. _____



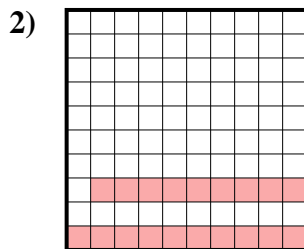
Exprimez la valeur en fraction , décimal & pourcentage.



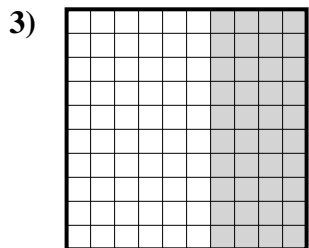
fraction $\frac{9}{10}$
 décimal $0,9$
 pourcentage 90



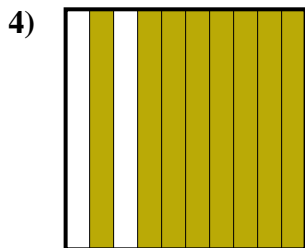
fraction $\frac{3}{10}$
 décimal $0,3$
 pourcentage 30




fraction $\frac{19}{100}$
 décimal $0,19$
 pourcentage 19



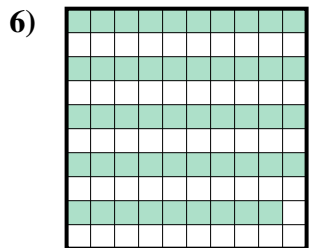
fraction $\frac{40}{100}$
 décimal $0,40$
 pourcentage 40



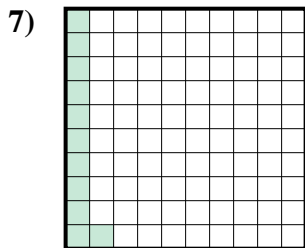
fraction $\frac{8}{10}$
 décimal $0,8$
 pourcentage 80



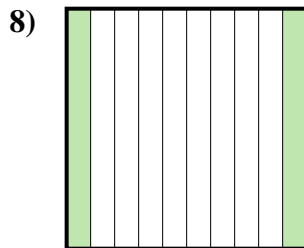
fraction $\frac{4}{10}$
 décimal $0,4$
 pourcentage 40



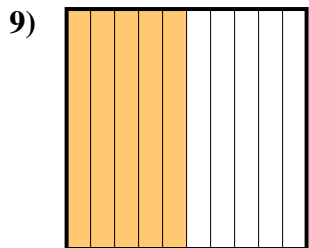
fraction $\frac{49}{100}$
 décimal $0,49$
 pourcentage 49



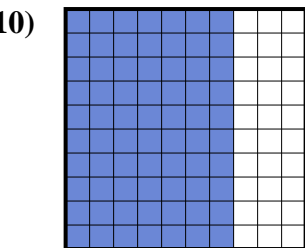
fraction $\frac{11}{100}$
 décimal $0,11$
 pourcentage 11



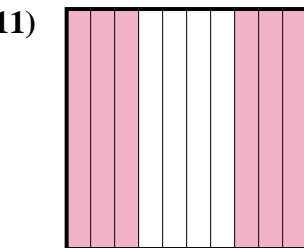
fraction $\frac{2}{10}$
 décimal $0,2$
 pourcentage 20



fraction $\frac{5}{10}$
 décimal $0,5$
 pourcentage 50



fraction $\frac{70}{100}$
 décimal $0,70$
 pourcentage 70



fraction $\frac{6}{10}$
 décimal $0,6$
 pourcentage 60

Réponses

- Ex. $\frac{9}{10}$ **0,9** **90%**
 1. $\frac{3}{10}$ **0,3** **30%**
 2. $\frac{19}{100}$ **0,19** **19%**
 3. $\frac{40}{100}$ **0,40** **40%**
 4. $\frac{8}{10}$ **0,8** **80%**
 5. $\frac{4}{10}$ **0,4** **40%**
 6. $\frac{49}{100}$ **0,49** **49%**
 7. $\frac{11}{100}$ **0,11** **11%**
 8. $\frac{2}{10}$ **0,2** **20%**
 9. $\frac{5}{10}$ **0,5** **50%**
 10. $\frac{70}{100}$ **0,70** **70%**
 11. $\frac{6}{10}$ **0,6** **60%**